



Collega ogni equazione alla sua risposta corretta e scrivi la risposta.

Es)  $\frac{1}{6} + \frac{1}{6} + \frac{1}{6} + \frac{1}{6}$




1)  $\frac{1}{10} + \frac{1}{10} + \frac{1}{10}$




2)  $\frac{1}{5} + \frac{1}{5} + \frac{1}{5}$



3)  $\frac{1}{8} + \frac{1}{8} + \frac{1}{8} + \frac{1}{8} + \frac{1}{8} + \frac{1}{8}$




4)  $\frac{1}{3} + \frac{1}{3}$



5)  $\frac{1}{10} + \frac{1}{10} + \frac{1}{10} + \frac{1}{10} + \frac{1}{10}$




6)  $\frac{1}{10} + \frac{1}{10} + \frac{1}{10} + \frac{1}{10} + \frac{1}{10} + \frac{1}{10} + \frac{1}{10}$



7)  $\frac{1}{8} + \frac{1}{8} + \frac{1}{8} + \frac{1}{8} + \frac{1}{8} + \frac{1}{8} + \frac{1}{8}$



8)  $\frac{1}{8} + \frac{1}{8} + \frac{1}{8} + \frac{1}{8} + \frac{1}{8}$



9)  $\frac{1}{10} + \frac{1}{10} + \frac{1}{10} + \frac{1}{10} + \frac{1}{10} + \frac{1}{10}$




10)  $\frac{1}{8} + \frac{1}{8}$



11)  $\frac{1}{6} + \frac{1}{6} + \frac{1}{6} + \frac{1}{6} + \frac{1}{6}$



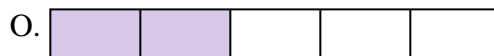
12)  $\frac{1}{5} + \frac{1}{5}$




13)  $\frac{1}{4} + \frac{1}{4} + \frac{1}{4}$



14)  $\frac{1}{12} + \frac{1}{12} + \frac{1}{12} + \frac{1}{12} + \frac{1}{12} + \frac{1}{12}$



15)  $\frac{1}{8} + \frac{1}{8} + \frac{1}{8} + \frac{1}{8}$

**Risposte**Es. **P**  $\frac{4}{6}$ 

1. \_\_\_\_\_

2. \_\_\_\_\_

3. \_\_\_\_\_

4. \_\_\_\_\_

5. \_\_\_\_\_

6. \_\_\_\_\_

7. \_\_\_\_\_

8. \_\_\_\_\_

9. \_\_\_\_\_

10. \_\_\_\_\_

11. \_\_\_\_\_

12. \_\_\_\_\_

13. \_\_\_\_\_

14. \_\_\_\_\_

15. \_\_\_\_\_



Collega ogni equazione alla sua risposta corretta e scrivi la risposta.

Es)  $\frac{1}{6} + \frac{1}{6} + \frac{1}{6} + \frac{1}{6}$



1)  $\frac{1}{10} + \frac{1}{10} + \frac{1}{10}$




2)  $\frac{1}{5} + \frac{1}{5} + \frac{1}{5}$



3)  $\frac{1}{8} + \frac{1}{8} + \frac{1}{8} + \frac{1}{8} + \frac{1}{8} + \frac{1}{8}$




4)  $\frac{1}{3} + \frac{1}{3}$



5)  $\frac{1}{10} + \frac{1}{10} + \frac{1}{10} + \frac{1}{10} + \frac{1}{10}$




6)  $\frac{1}{10} + \frac{1}{10} + \frac{1}{10} + \frac{1}{10} + \frac{1}{10} + \frac{1}{10} + \frac{1}{10}$




7)  $\frac{1}{8} + \frac{1}{8} + \frac{1}{8} + \frac{1}{8} + \frac{1}{8} + \frac{1}{8} + \frac{1}{8}$




8)  $\frac{1}{8} + \frac{1}{8} + \frac{1}{8} + \frac{1}{8} + \frac{1}{8}$




9)  $\frac{1}{10} + \frac{1}{10} + \frac{1}{10} + \frac{1}{10} + \frac{1}{10} + \frac{1}{10}$




10)  $\frac{1}{8} + \frac{1}{8}$



11)  $\frac{1}{6} + \frac{1}{6} + \frac{1}{6} + \frac{1}{6} + \frac{1}{6}$



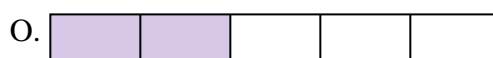
12)  $\frac{1}{5} + \frac{1}{5}$



13)  $\frac{1}{4} + \frac{1}{4} + \frac{1}{4}$



14)  $\frac{1}{12} + \frac{1}{12} + \frac{1}{12} + \frac{1}{12} + \frac{1}{12} + \frac{1}{12}$



15)  $\frac{1}{8} + \frac{1}{8} + \frac{1}{8} + \frac{1}{8}$

**Risposte**

Es. **P**  $\frac{4}{6}$

1. **A**  $\frac{3}{10}$

2. **E**  $\frac{3}{5}$

3. **K**  $\frac{6}{8}$

4. **D**  $\frac{2}{3}$

5. **C**  $\frac{5}{10}$

6. **I**  $\frac{7}{10}$

7. **M**  $\frac{7}{8}$

8. **B**  $\frac{5}{8}$

9. **J**  $\frac{6}{10}$

10. **L**  $\frac{2}{8}$

11. **H**  $\frac{5}{6}$

12. **O**  $\frac{2}{5}$

13. **F**  $\frac{3}{4}$

14. **G**  $\frac{6}{12}$

15. **N**  $\frac{4}{8}$