



Scrivi numericamente la frazione rappresentata.

Es)



Es. $\frac{3}{7} + \frac{2}{7} = \frac{5}{7}$

1)



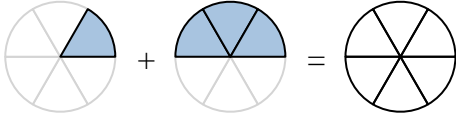
1. _____ + _____ = _____

2)



2. _____ + _____ = _____

3)



3. _____ + _____ = _____

4)



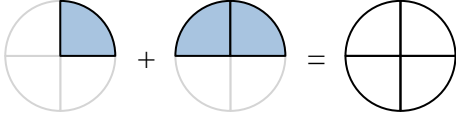
4. _____ + _____ = _____

5)



5. _____ + _____ = _____

6)



6. _____ + _____ = _____

7)



7. _____ + _____ = _____

8)



8. _____ + _____ = _____

9)



9. _____ + _____ = _____

10)



10. _____ + _____ = _____

Risposte



Scrivi numericamente la frazione rappresentata.

Es)



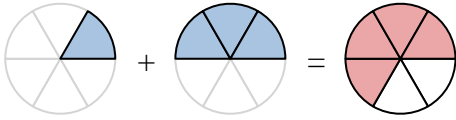
1)



2)



3)



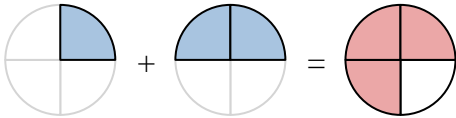
4)



5)



6)



7)



8)



9)



10)

**Risposte**

Es. $\frac{3}{7} + \frac{2}{7} = \frac{5}{7}$

1. $\frac{1}{3} + \frac{1}{3} = \frac{2}{3}$

2. $\frac{8}{10} + \frac{1}{10} = \frac{9}{10}$

3. $\frac{1}{6} + \frac{3}{6} = \frac{4}{6}$

4. $\frac{5}{10} + \frac{3}{10} = \frac{8}{10}$

5. $\frac{2}{8} + \frac{1}{8} = \frac{3}{8}$

6. $\frac{1}{4} + \frac{2}{4} = \frac{3}{4}$

7. $\frac{1}{8} + \frac{1}{8} = \frac{2}{8}$

8. $\frac{3}{8} + \frac{4}{8} = \frac{7}{8}$

9. $\frac{1}{5} + \frac{3}{5} = \frac{4}{5}$

10. $\frac{9}{12} + \frac{1}{12} = \frac{10}{12}$