



Determina quale lettera rappresenta graficamente la somma numerica.

1) $\frac{8}{10} + \frac{8}{10}$

2) $\frac{1}{6} + \frac{4}{6}$

3) $\frac{9}{12} + \frac{3}{12}$

4) $\frac{3}{4} + \frac{1}{4}$

5) $\frac{1}{10} + \frac{1}{10}$

6) $\frac{5}{12} + \frac{5}{12}$

7) $\frac{1}{12} + \frac{4}{12}$

8) $\frac{4}{10} + \frac{4}{10}$

9) $\frac{6}{10} + \frac{3}{10}$

10) $\frac{4}{8} + \frac{6}{8}$

11) $\frac{1}{3} + \frac{2}{3}$

12) $\frac{4}{5} + \frac{2}{5}$

13) $\frac{2}{6} + \frac{2}{6}$

14) $\frac{1}{2} + \frac{1}{2}$

15) $\frac{1}{8} + \frac{3}{8}$

Risposte

1. _____

2. _____

3. _____

4. _____

5. _____

6. _____

7. _____

8. _____

9. _____

10. _____

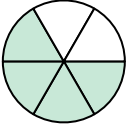
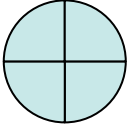
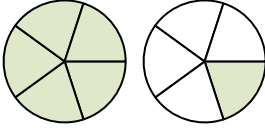
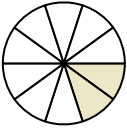
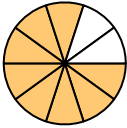
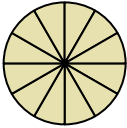
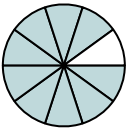
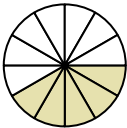
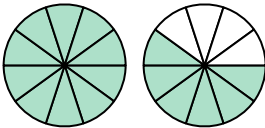
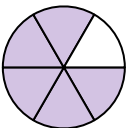
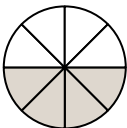
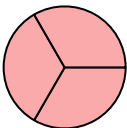
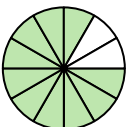
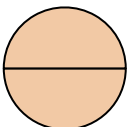
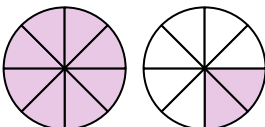
11. _____

12. _____

13. _____

14. _____

15. _____

A. 	B. 	C. 
D. 	E. 	F. 
G. 	H. 	I. 
J. 	K. 	L. 
M. 	N. 	O. 



Determina quale lettera rappresenta graficamente la somma numerica.

1) $\frac{8}{10} + \frac{8}{10}$

2) $\frac{1}{6} + \frac{4}{6}$

3) $\frac{9}{12} + \frac{3}{12}$

4) $\frac{3}{4} + \frac{1}{4}$

5) $\frac{1}{10} + \frac{1}{10}$

6) $\frac{5}{12} + \frac{5}{12}$

7) $\frac{1}{12} + \frac{4}{12}$

8) $\frac{4}{10} + \frac{4}{10}$

9) $\frac{6}{10} + \frac{3}{10}$

10) $\frac{4}{8} + \frac{6}{8}$

11) $\frac{1}{3} + \frac{2}{3}$

12) $\frac{4}{5} + \frac{2}{5}$

13) $\frac{2}{6} + \frac{2}{6}$

14) $\frac{1}{2} + \frac{1}{2}$

15) $\frac{1}{8} + \frac{3}{8}$

Risposte

1. **I** $1\frac{6}{10}$

2. **J** $\frac{5}{6}$

3. **F** $\frac{12}{12}$

4. **B** $\frac{4}{4}$

5. **D** $\frac{2}{10}$

6. **M** $\frac{10}{12}$

7. **H** $\frac{5}{12}$

8. **E** $\frac{8}{10}$

9. **G** $\frac{9}{10}$

10. **O** $1\frac{2}{8}$

11. **L** $\frac{3}{3}$

12. **C** $1\frac{1}{5}$

13. **A** $\frac{4}{6}$

14. **N** $\frac{2}{2}$

15. **K** $\frac{4}{8}$

