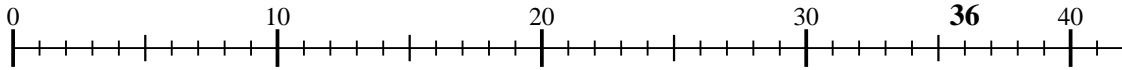




Usa la linea numerata per risolvere ogni problema.

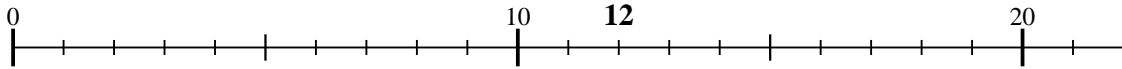
Risposte

1) $36 : 9 =$




1. _____

2) $12 : 3 =$



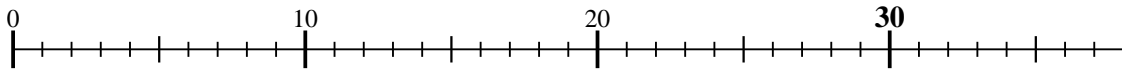
2. _____

3) $4 : 2 =$



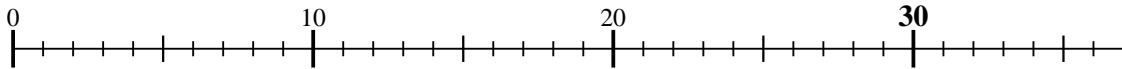
3. _____

4) $30 : 10 =$



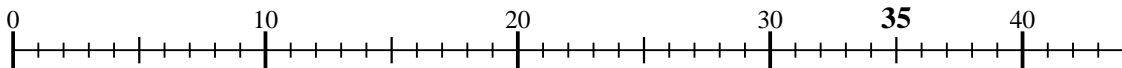
4. _____

5) $30 : 6 =$



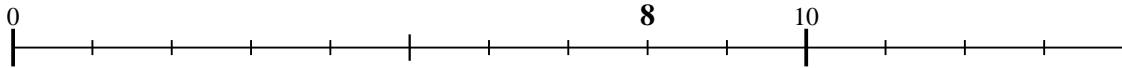
5. _____

6) $35 : 7 =$



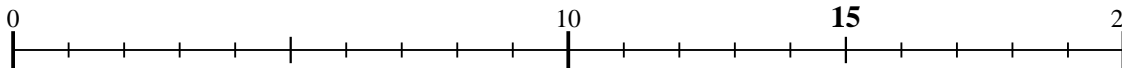
6. _____

7) $8 : 2 =$



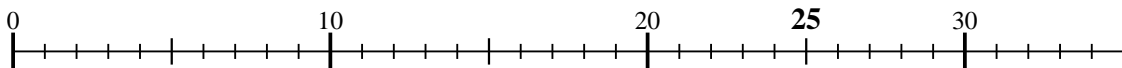
7. _____

8) $15 : 3 =$



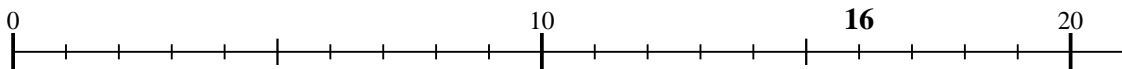
8. _____

9) $25 : 5 =$



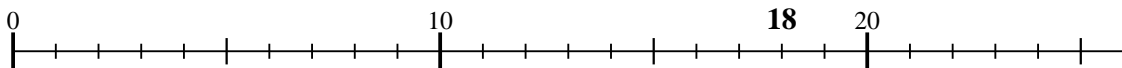
9. _____

10) $16 : 8 =$



10. _____

11) $18 : 6 =$



11. _____

