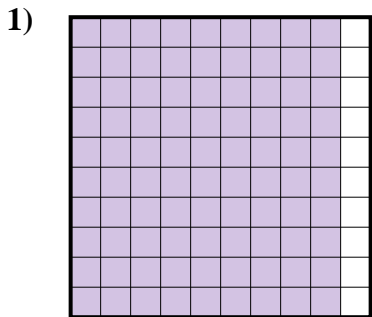


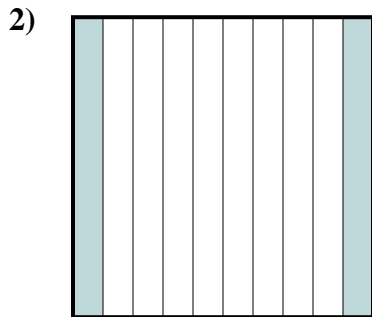


Determina quale lettera rappresenta la quantità colorata del tutto.

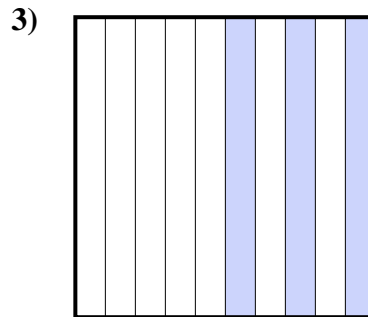
Risposte



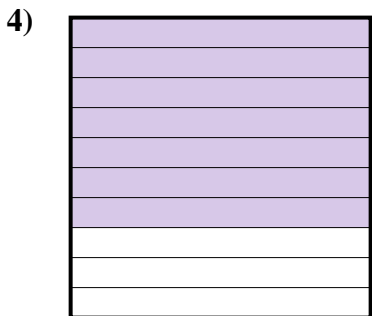
- A. 9
- B. 0,09
- C. 900
- D. 0,9



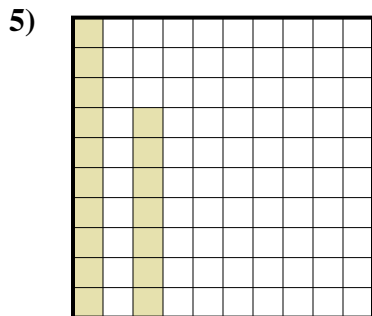
- A. 0,2
- B. 20
- C. 200
- D. 0,02



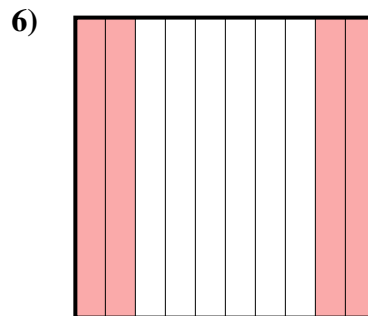
- A. 300
- B. 3
- C. 0,03
- D. 0,3



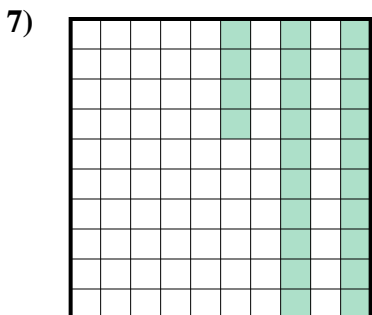
- A. 0,7
- B. 70
- C. 7
- D. 0,07



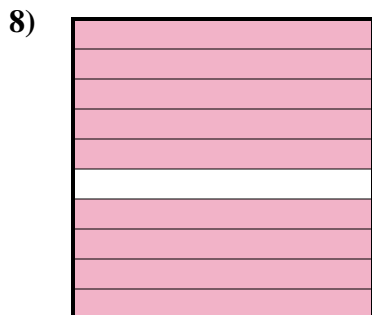
- A. 1,7
- B. 170
- C. 0,17
- D. 0,017



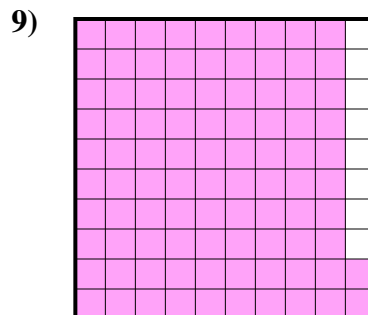
- A. 0,04
- B. 4
- C. 40
- D. 0,4



- A. 0,024
- B. 240
- C. 0,24
- D. 24



- A. 90
- B. 900
- C. 9
- D. 0,9

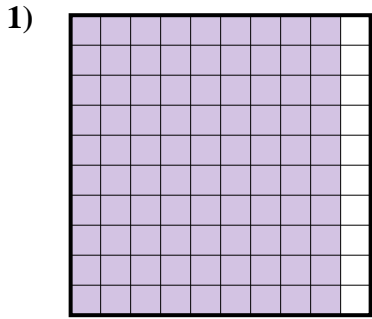


- A. 9,2
- B. 0,92
- C. 0,092
- D. 92

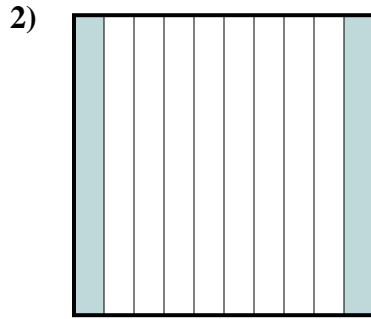
- 1. _____
- 2. _____
- 3. _____
- 4. _____
- 5. _____
- 6. _____
- 7. _____
- 8. _____
- 9. _____



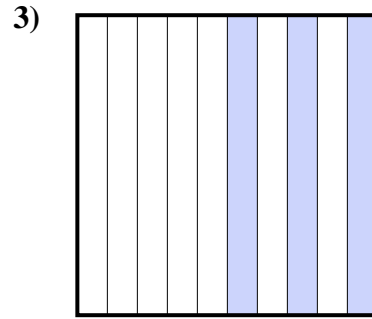
Determina quale lettera rappresenta la quantità colorata del tutto.



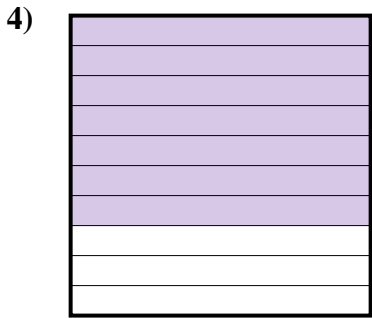
- A. 9
- B. 0,09
- C. 900
- D. 0,9



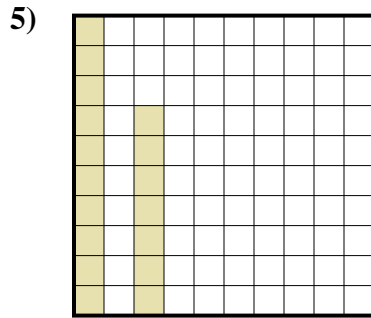
- A. 0,2
- B. 20
- C. 200
- D. 0,02



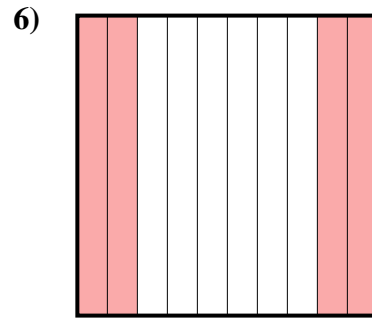
- A. 300
- B. 3
- C. 0,03
- D. 0,3



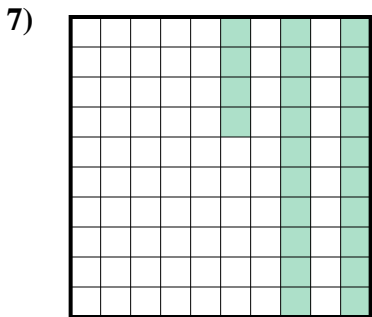
- A. 0,7
- B. 70
- C. 7
- D. 0,07



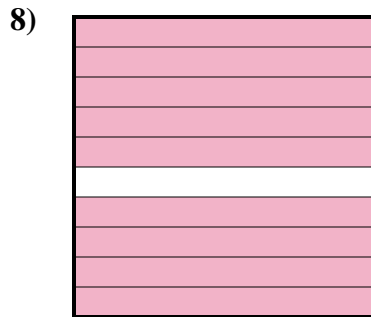
- A. 1,7
- B. 170
- C. 0,17
- D. 0,017



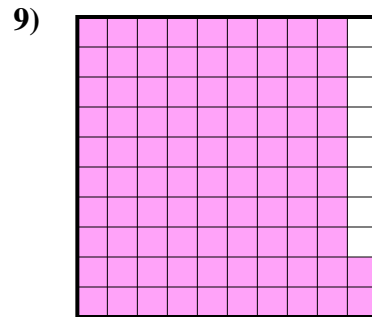
- A. 0,04
- B. 4
- C. 40
- D. 0,4



- A. 0,024
- B. 240
- C. 0,24
- D. 24



- A. 90
- B. 900
- C. 9
- D. 0,9



- A. 9,2
- B. 0,92
- C. 0,092
- D. 92

Risposte

- 1. **D**
- 2. **A**
- 3. **D**
- 4. **A**
- 5. **C**
- 6. **D**
- 7. **C**
- 8. **D**
- 9. **B**