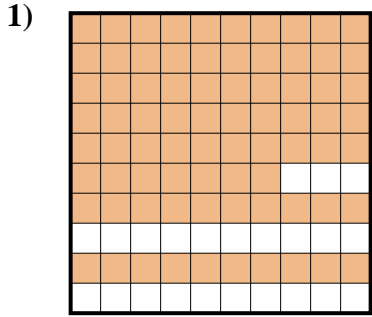


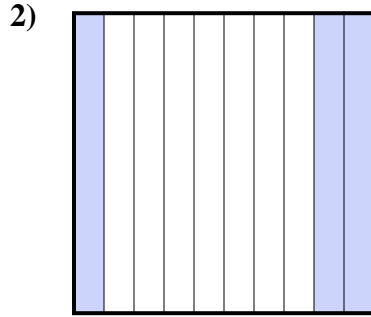


Determina quale lettera rappresenta la quantità colorata del tutto.

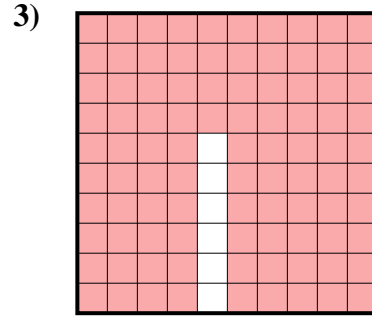
Risposte



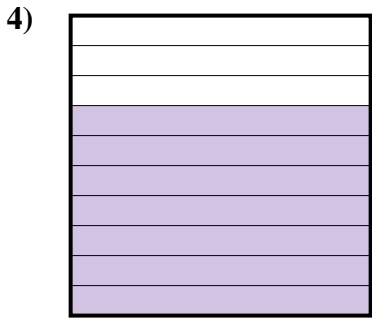
- A. 0,77
- B. 77
- C. 7,7
- D. 770



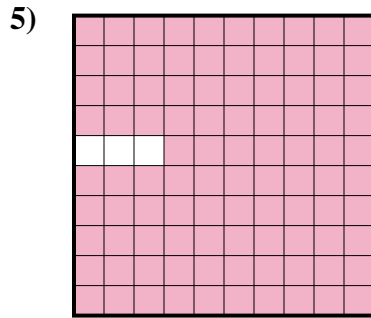
- A. 0,03
- B. 3
- C. 0,3
- D. 300



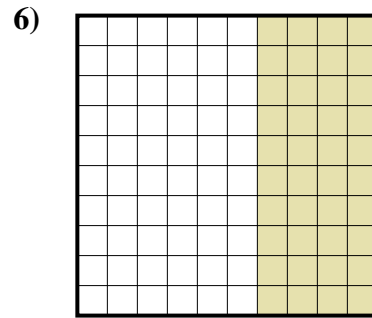
- A. 9,4
- B. 940
- C. 0,94
- D. 0,094



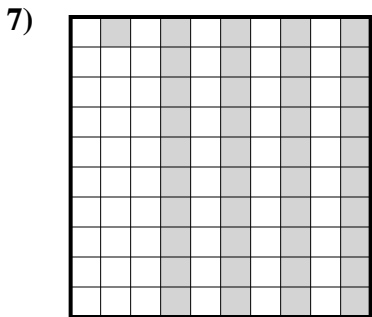
- A. 700
- B. 0,7
- C. 70
- D. 7



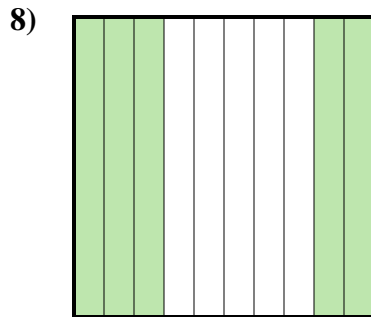
- A. 9,7
- B. 0,97
- C. 970
- D. 0,097



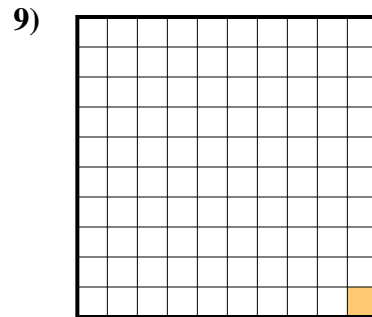
- A. 40
- B. 4
- C. 0,4
- D. 0,04



- A. 41
- B. 0,041
- C. 0,41
- D. 4,1



- A. 50
- B. 0,5
- C. 5
- D. 0,05



- A. 0,01
- B. 0,001
- C. 1
- D. 0,1

1. _____

2. _____

3. _____

4. _____

5. _____

6. _____

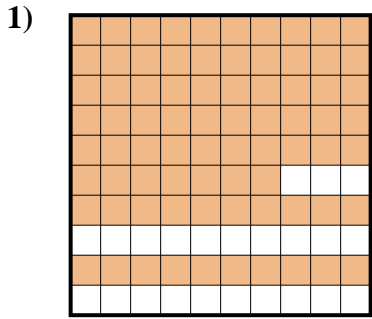
7. _____

8. _____

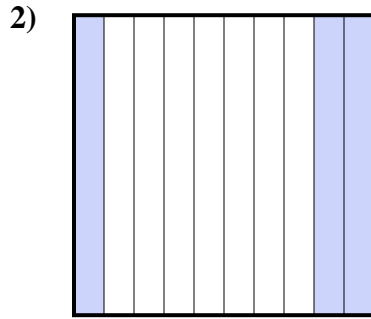
9. _____



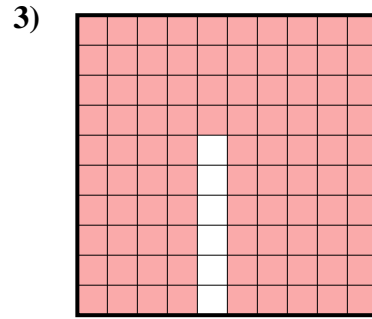
Determina quale lettera rappresenta la quantità colorata del tutto.



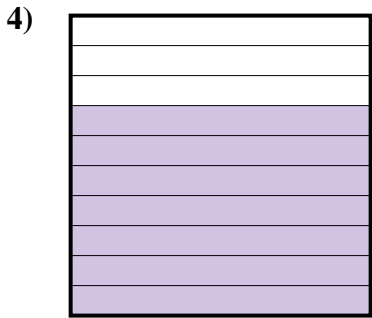
- A. 0,77
- B. 77
- C. 7,7
- D. 770



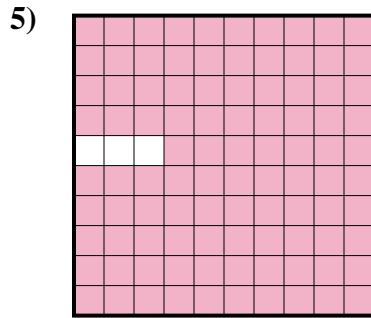
- A. 0,03
- B. 3
- C. 0,3
- D. 300



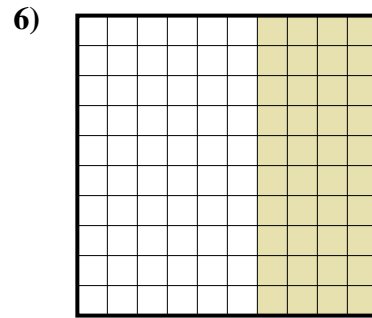
- A. 9,4
- B. 940
- C. 0,94
- D. 0,094



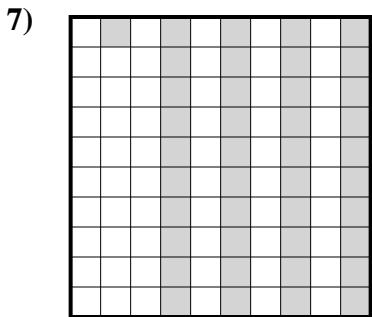
- A. 700
- B. 0,7
- C. 70
- D. 7



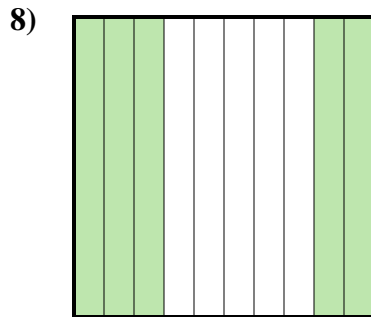
- A. 9,7
- B. 0,97
- C. 970
- D. 0,097



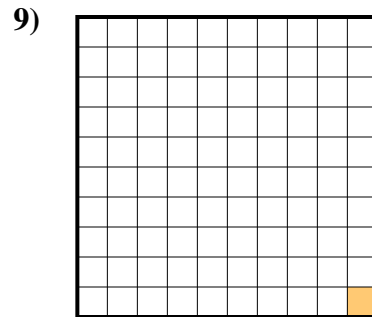
- A. 40
- B. 4
- C. 0,4
- D. 0,04



- A. 41
- B. 0,041
- C. 0,41
- D. 4,1



- A. 50
- B. 0,5
- C. 5
- D. 0,05



- A. 0,01
- B. 0,001
- C. 1
- D. 0,1

Risposte

- 1. **A**
- 2. **C**
- 3. **C**
- 4. **B**
- 5. **B**
- 6. **C**
- 7. **C**
- 8. **B**
- 9. **A**