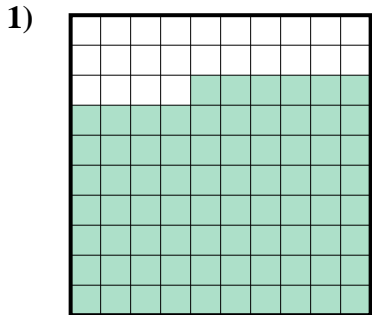


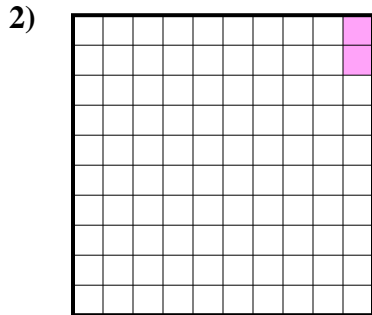


Determina quale lettera rappresenta la quantità colorata del tutto.

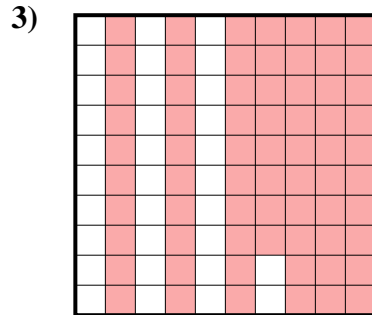
**Risposte**



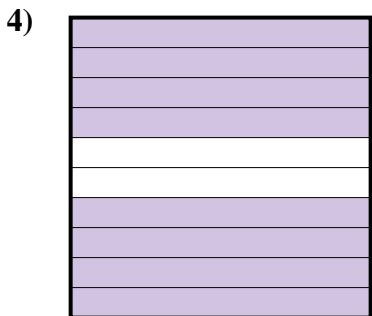
- A. 760
- B. 0,76
- C. 7,6
- D. 76



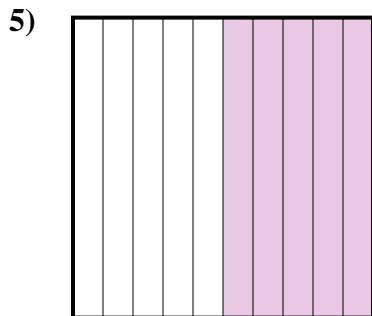
- A. 2
- B. 0,02
- C. 0,2
- D. 20



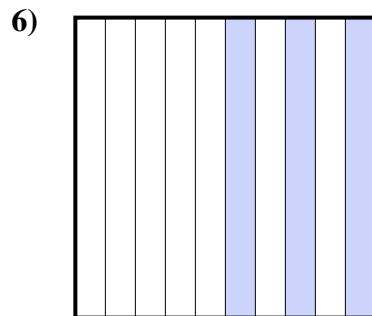
- A. 680
- B. 68
- C. 0,68
- D. 6,8



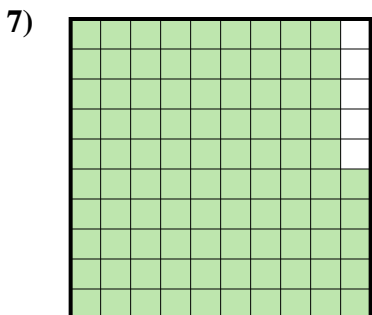
- A. 80
- B. 0,08
- C. 8
- D. 0,8



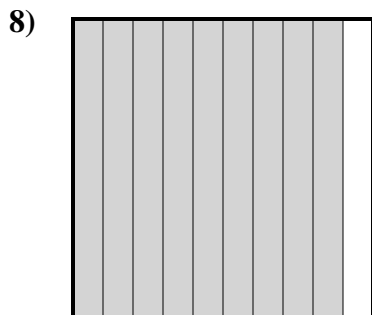
- A. 0,5
- B. 500
- C. 0,05
- D. 5



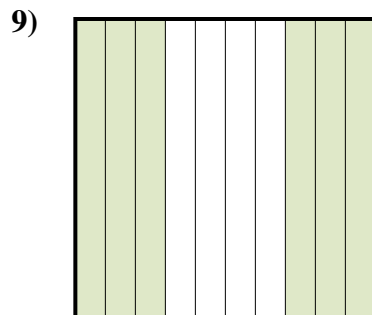
- A. 30
- B. 0,03
- C. 0,3
- D. 3



- A. 95
- B. 950
- C. 9,5
- D. 0,95



- A. 900
- B. 90
- C. 0,09
- D. 0,9



- A. 600
- B. 0,6
- C. 6
- D. 0,06

1. \_\_\_\_\_

2. \_\_\_\_\_

3. \_\_\_\_\_

4. \_\_\_\_\_

5. \_\_\_\_\_

6. \_\_\_\_\_

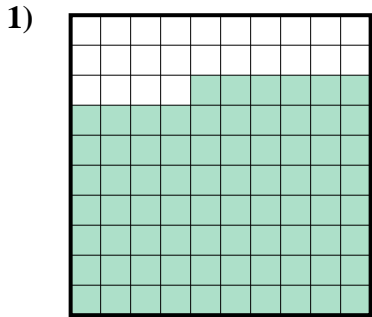
7. \_\_\_\_\_

8. \_\_\_\_\_

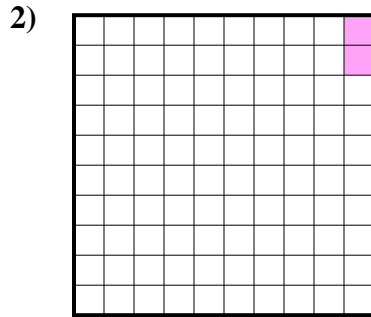
9. \_\_\_\_\_



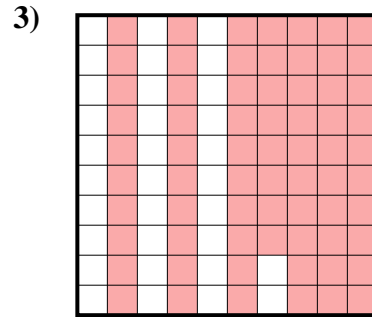
Determina quale lettera rappresenta la quantità colorata del tutto.



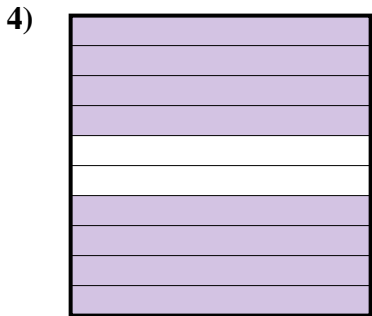
- A. 760
- B. 0,76
- C. 7,6
- D. 76



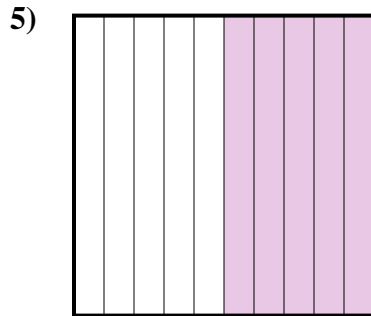
- A. 2
- B. 0,02
- C. 0,2
- D. 20



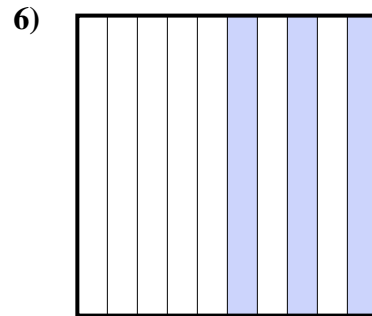
- A. 680
- B. 68
- C. 0,68
- D. 6,8



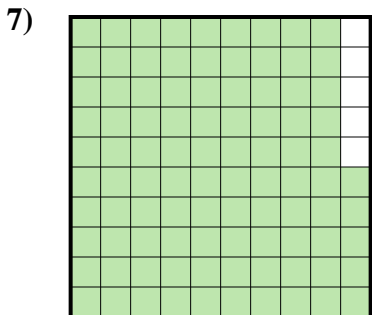
- A. 80
- B. 0,08
- C. 8
- D. 0,8



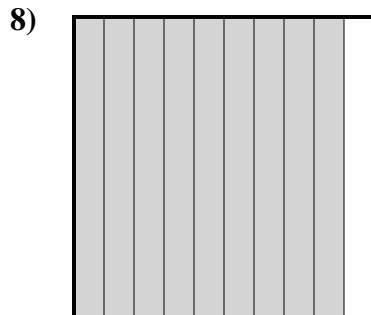
- A. 0,5
- B. 500
- C. 0,05
- D. 5



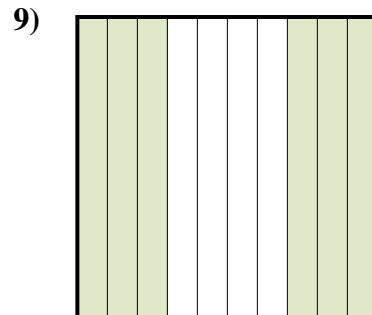
- A. 30
- B. 0,03
- C. 0,3
- D. 3



- A. 95
- B. 950
- C. 9,5
- D. 0,95



- A. 900
- B. 90
- C. 0,09
- D. 0,9



- A. 600
- B. 0,6
- C. 6
- D. 0,06

Risposte

- 1.     **B**
- 2.     **B**
- 3.     **C**
- 4.     **D**
- 5.     **A**
- 6.     **C**
- 7.     **D**
- 8.     **D**
- 9.     **B**