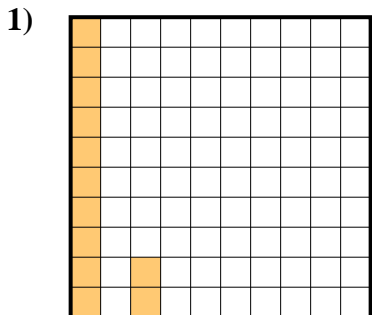


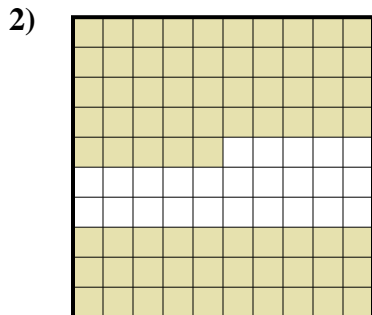


Determina quale lettera rappresenta la quantità colorata del tutto.


**Risposte**



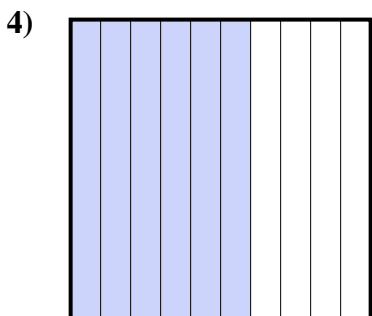
- A. 12
- B. 120
- C. 0,12
- D. 0,012



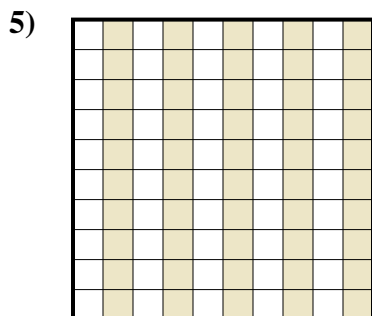
- A. 0,075
- B. 750
- C. 0,75
- D. 7,5



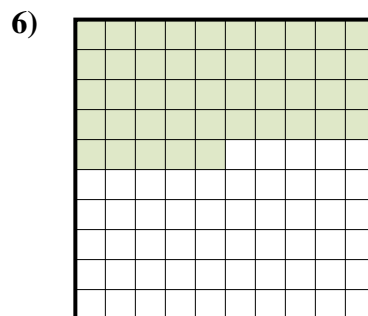
- A. 3
- B. 0,03
- C. 300
- D. 0,3



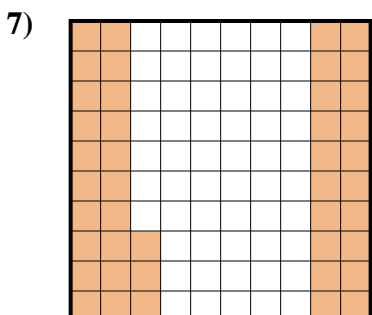
- A. 0,06
- B. 600
- C. 0,6
- D. 60



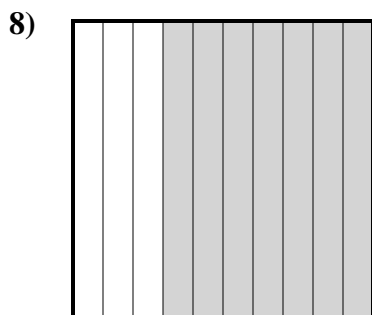
- A. 5
- B. 500
- C. 50
- D. 0,5



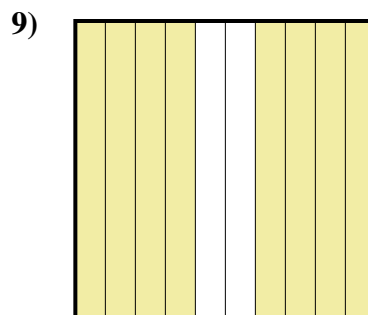
- A. 0,45
- B. 4,5
- C. 45
- D. 0,045



- A. 0,43
- B. 430
- C. 0,043
- D. 4,3



- A. 0,7
- B. 7
- C. 700
- D. 70



- A. 0,8
- B. 80
- C. 800
- D. 0,08

1. \_\_\_\_\_

2. \_\_\_\_\_

3. \_\_\_\_\_

4. \_\_\_\_\_

5. \_\_\_\_\_

6. \_\_\_\_\_

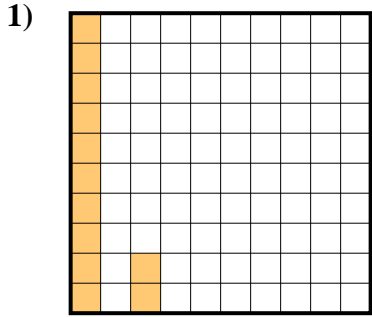
7. \_\_\_\_\_

8. \_\_\_\_\_

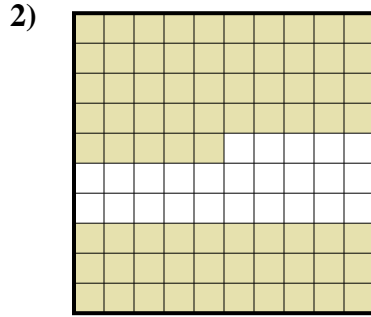
9. \_\_\_\_\_




Determina quale lettera rappresenta la quantità colorata del tutto.



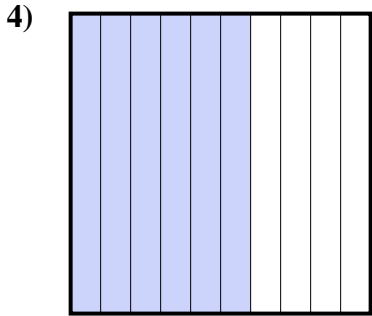
- A. 12
- B. 120
- C. 0,12
- D. 0,012



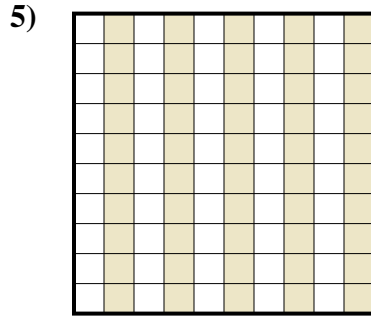
- A. 0,075
- B. 750
- C. 0,75
- D. 7,5



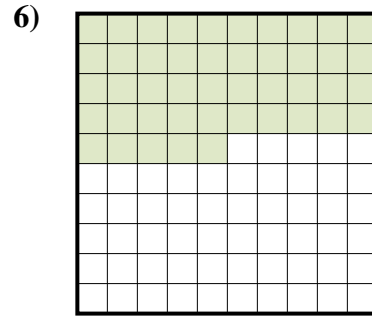
- A. 3
- B. 0,03
- C. 300
- D. 0,3



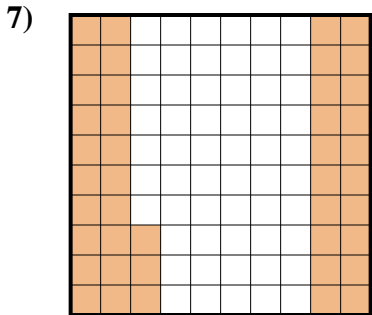
- A. 0,06
- B. 600
- C. 0,6
- D. 60



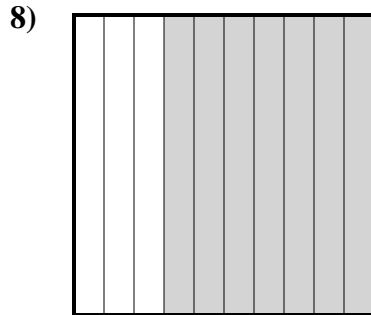
- A. 5
- B. 500
- C. 50
- D. 0,5



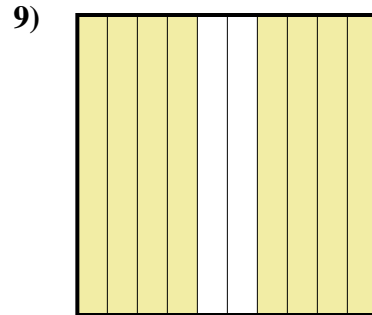
- A. 0,45
- B. 4,5
- C. 45
- D. 0,045



- A. 0,43
- B. 430
- C. 0,043
- D. 4,3



- A. 0,7
- B. 7
- C. 700
- D. 70



- A. 0,8
- B. 80
- C. 800
- D. 0,08

**Risposte**

- 1.           **C**
- 2.           **C**
- 3.           **D**
- 4.           **C**
- 5.           **D**
- 6.           **A**
- 7.           **A**
- 8.           **A**
- 9.           **A**