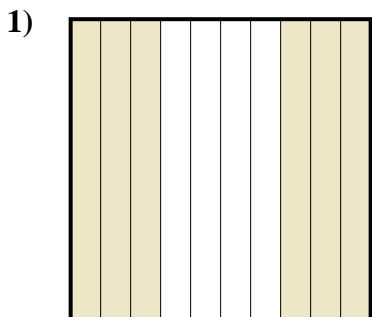


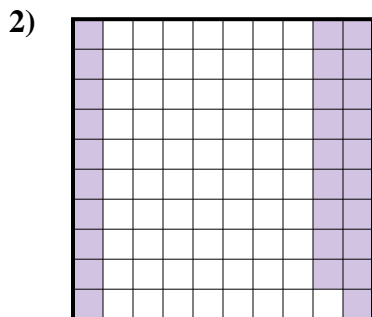


Determina quale lettera rappresenta la quantità colorata del tutto.

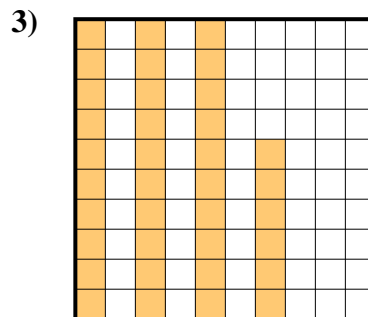
**Risposte**



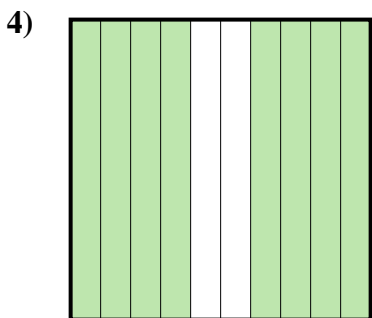
- A. 0,6
- B. 6
- C. 60
- D. 600



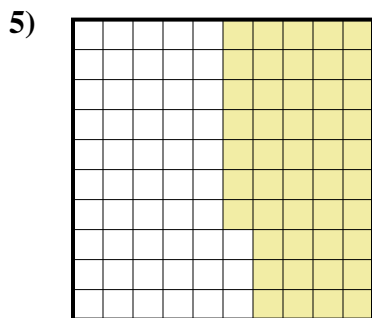
- A. 2,9
- B. 0,29
- C. 0,029
- D. 290



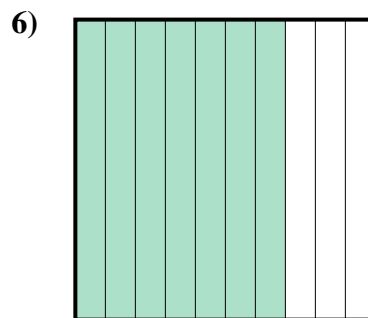
- A. 3,6
- B. 0,036
- C. 0,36
- D. 360



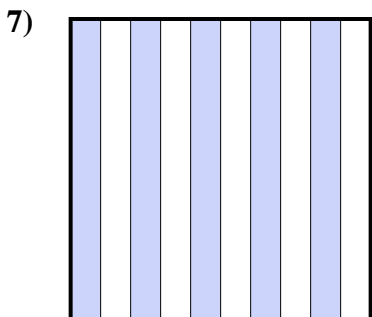
- A. 80
- B. 8
- C. 0,8
- D. 0,08




- A. 0,047
- B. 4,7
- C. 0,47
- D. 470



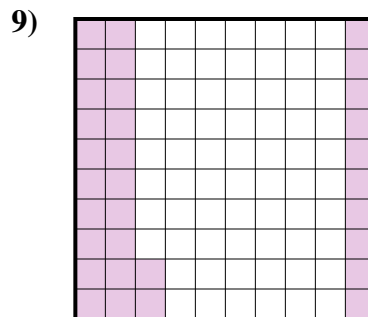
- A. 0,7
- B. 70
- C. 7
- D. 700



- A. 500
- B. 0,05
- C. 5
- D. 0,5



- A. 100
- B. 0,01
- C. 0,1
- D. 10

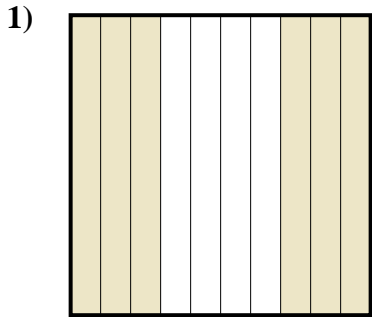


- A. 3,2
- B. 320
- C. 0,32
- D. 32

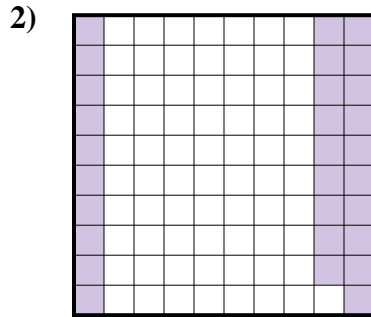
- 1. \_\_\_\_\_
- 2. \_\_\_\_\_
- 3. \_\_\_\_\_
- 4. \_\_\_\_\_
- 5. \_\_\_\_\_
- 6. \_\_\_\_\_
- 7. \_\_\_\_\_
- 8. \_\_\_\_\_
- 9. \_\_\_\_\_



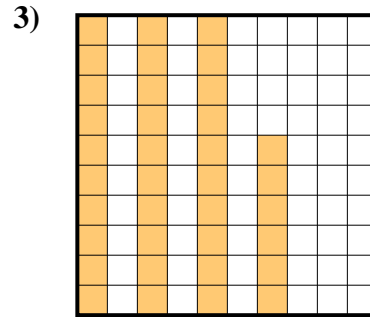
Determina quale lettera rappresenta la quantità colorata del tutto.



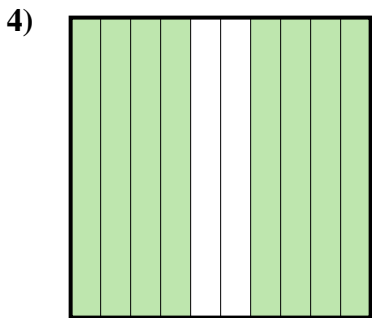
- A. 0,6
- B. 6
- C. 60
- D. 600



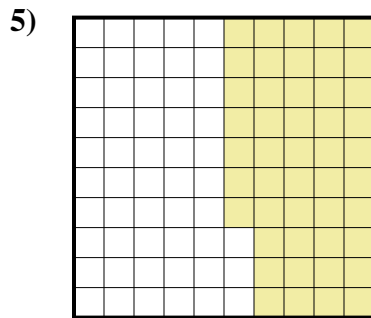
- A. 2,9
- B. 0,29
- C. 0,029
- D. 290



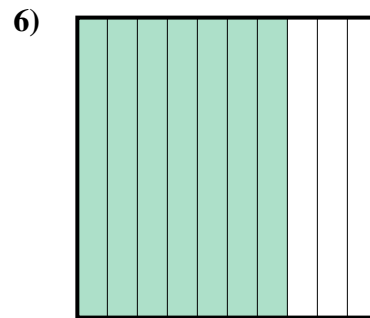
- A. 3,6
- B. 0,036
- C. 0,36
- D. 360



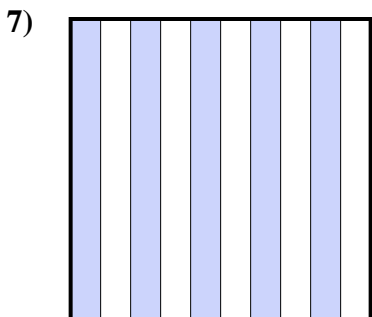
- A. 80
- B. 8
- C. 0,8
- D. 0,08




- A. 0,047
- B. 4,7
- C. 0,47
- D. 470



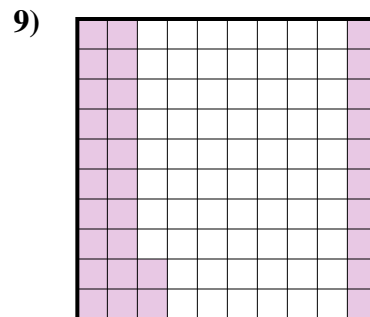
- A. 0,7
- B. 70
- C. 7
- D. 700



- A. 500
- B. 0,05
- C. 5
- D. 0,5



- A. 100
- B. 0,01
- C. 0,1
- D. 10



- A. 3,2
- B. 320
- C. 0,32
- D. 32

**Risposte**

- 1.     **A**
- 2.     **B**
- 3.     **C**
- 4.     **C**
- 5.     **C**
- 6.     **A**
- 7.     **D**
- 8.     **C**
- 9.     **C**