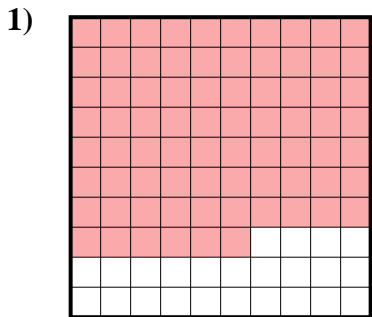


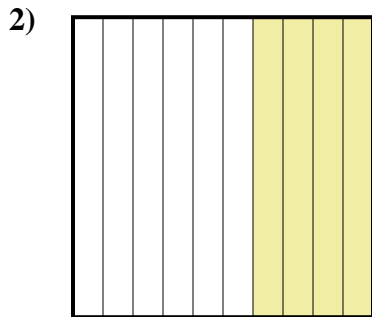


Determina quale lettera rappresenta la quantità colorata del tutto.

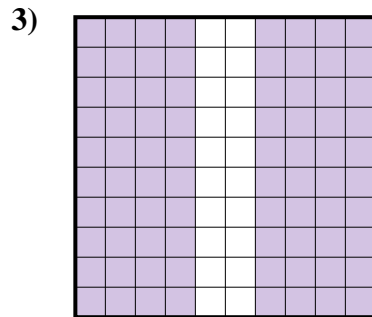
Risposte



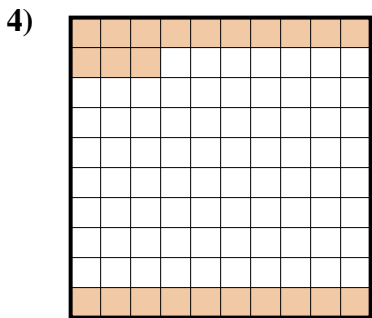
- A. 760
- B. 0,076
- C. 76
- D. 0,76



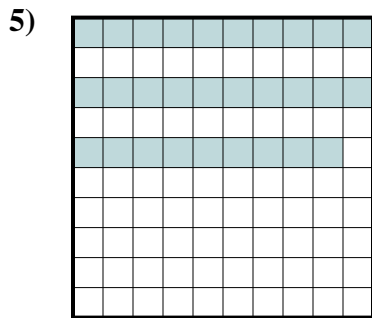
- A. 400
- B. 0,04
- C. 0,4
- D. 40



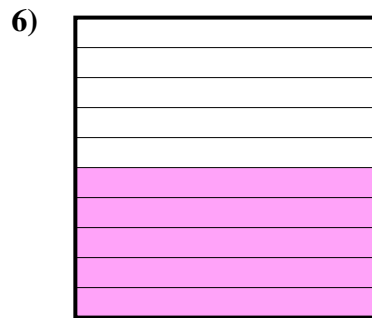
- A. 80
- B. 0,8
- C. 8
- D. 0,08




- A. 0,23
- B. 23
- C. 2,3
- D. 0,023



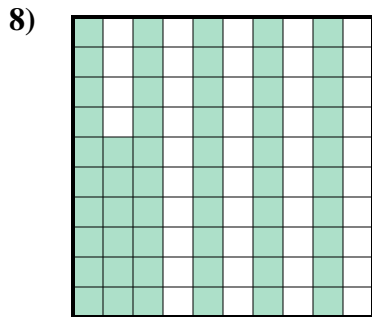
- A. 0,029
- B. 29
- C. 0,29
- D. 2,9



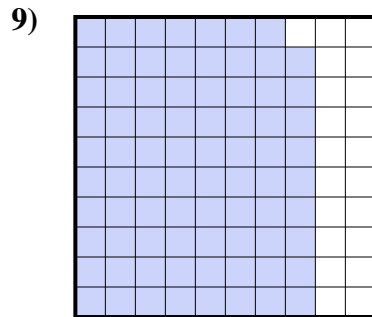
- A. 500
- B. 0,5
- C. 5
- D. 50



- A. 0,8
- B. 80
- C. 0,08
- D. 8



- A. 0,56
- B. 560
- C. 56
- D. 5,6



- A. 790
- B. 0,79
- C. 79
- D. 0,079

1. _____

2. _____

3. _____

4. _____

5. _____

6. _____

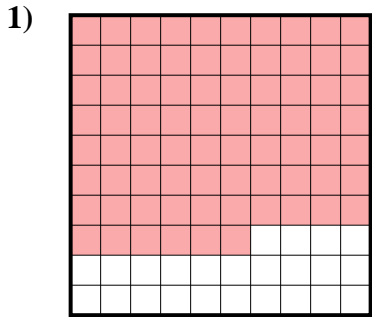
7. _____

8. _____

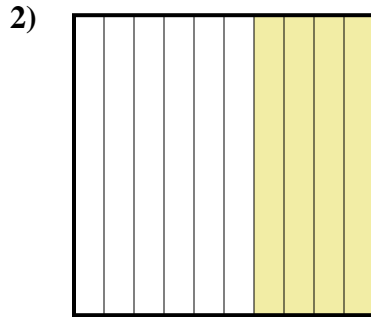
9. _____



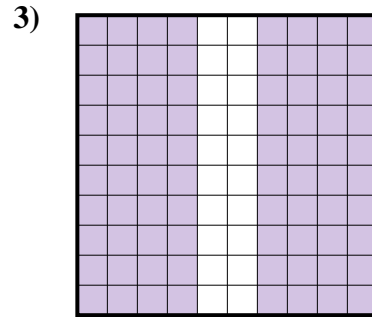
Determina quale lettera rappresenta la quantità colorata del tutto.



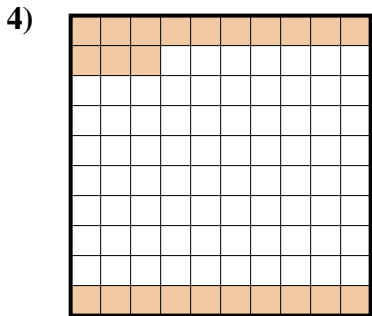
- A. 760
- B. 0,076
- C. 76
- D. 0,76



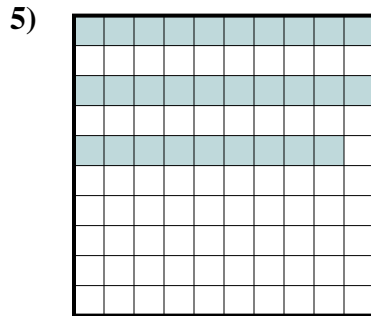
- A. 400
- B. 0,04
- C. 0,4
- D. 40



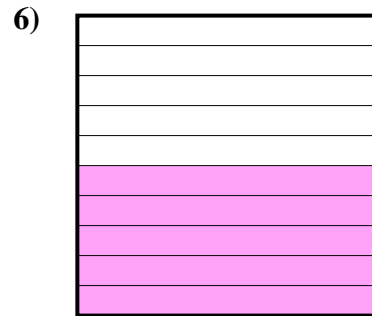
- A. 80
- B. 0,8
- C. 8
- D. 0,08



- A. 0,23
- B. 23
- C. 2,3
- D. 0,023



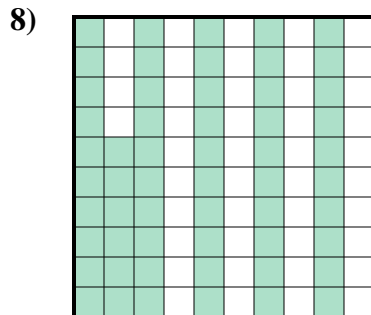
- A. 0,029
- B. 29
- C. 0,29
- D. 2,9



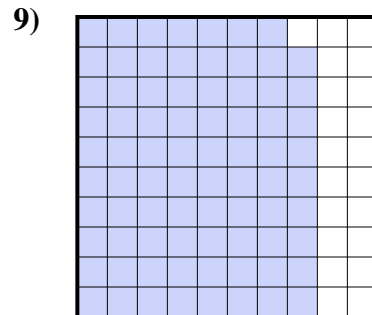
- A. 500
- B. 0,5
- C. 5
- D. 50



- A. 0,8
- B. 80
- C. 0,08
- D. 8



- A. 0,56
- B. 560
- C. 56
- D. 5,6



- A. 790
- B. 0,79
- C. 79
- D. 0,079

Risposte

- 1. **D**
- 2. **C**
- 3. **B**
- 4. **A**
- 5. **C**
- 6. **B**
- 7. **A**
- 8. **A**
- 9. **B**