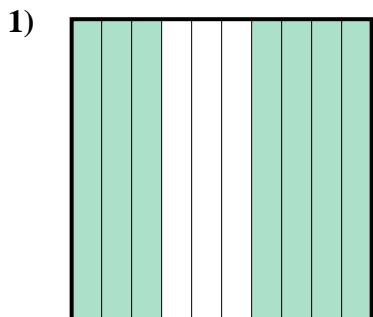


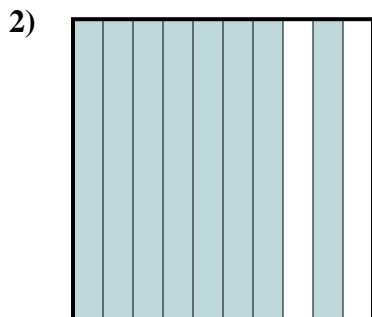


Determina quale lettera rappresenta la quantità colorata del tutto.

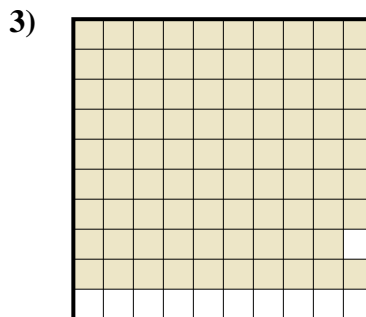
Risposte



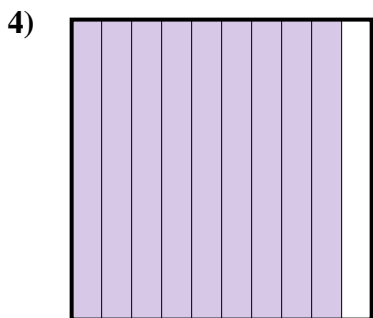
- A. 7
- B. 0,07
- C. 700
- D. 0,7



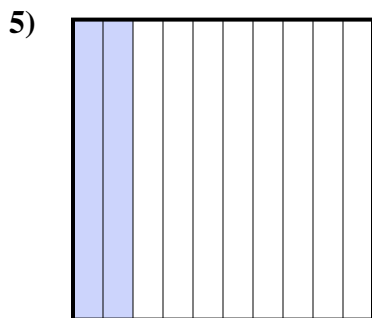
- A. 0,8
- B. 800
- C. 8
- D. 0,08




- A. 89
- B. 0,89
- C. 0,089
- D. 8,9



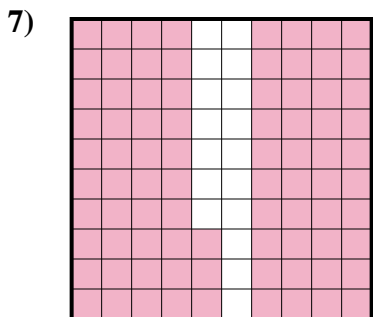
- A. 900
- B. 0,09
- C. 0,9
- D. 9



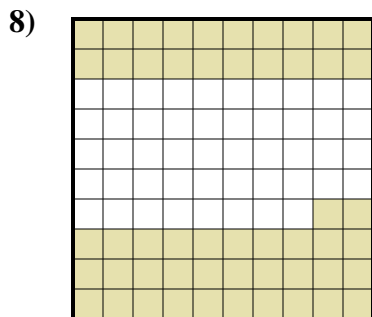
- A. 200
- B. 0,2
- C. 2
- D. 0,02



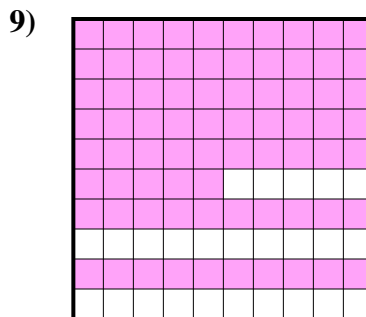
- A. 0,05
- B. 500
- C. 0,5
- D. 5



- A. 8,3
- B. 0,083
- C. 830
- D. 0,83



- A. 520
- B. 0,052
- C. 0,52
- D. 52



- A. 750
- B. 7,5
- C. 0,75
- D. 0,075

1. _____

2. _____

3. _____

4. _____

5. _____

6. _____

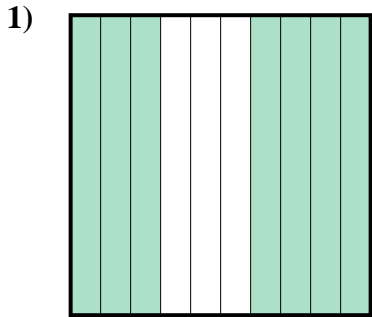
7. _____

8. _____

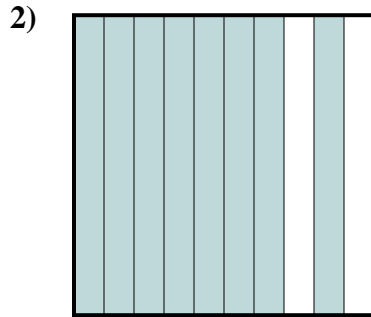
9. _____



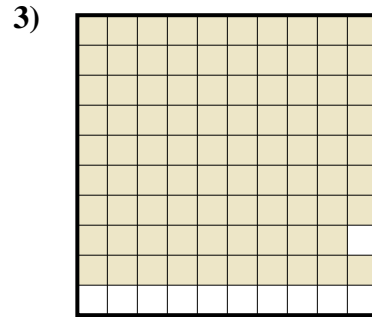
Determina quale lettera rappresenta la quantità colorata del tutto.



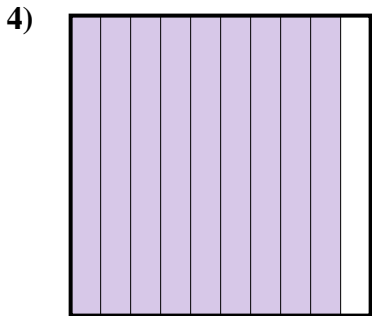
- A. 7
- B. 0,07
- C. 700
- D. 0,7



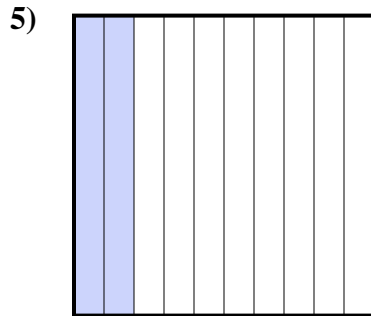
- A. 0,8
- B. 800
- C. 8
- D. 0,08



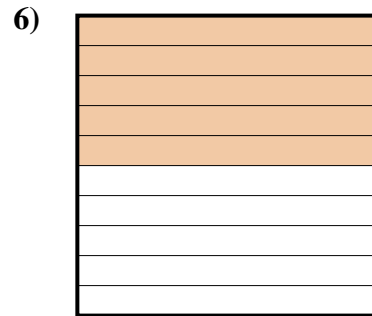
- A. 89
- B. 0,89
- C. 0,089
- D. 8,9



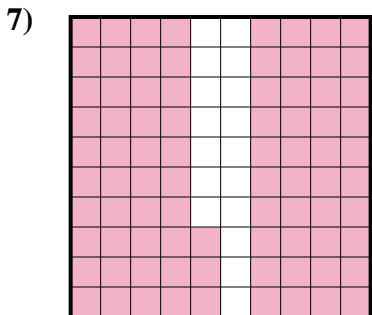
- A. 900
- B. 0,09
- C. 0,9
- D. 9



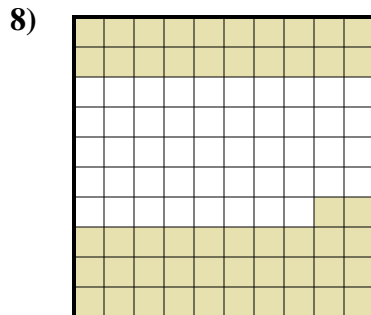
- A. 200
- B. 0,2
- C. 2
- D. 0,02



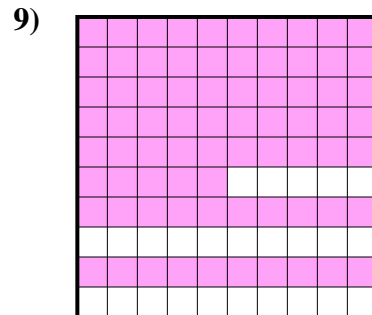
- A. 0,05
- B. 500
- C. 0,5
- D. 5



- A. 8,3
- B. 0,083
- C. 830
- D. 0,83



- A. 520
- B. 0,052
- C. 0,52
- D. 52



- A. 750
- B. 7,5
- C. 0,75
- D. 0,075

Risposte

- 1. **D**
- 2. **A**
- 3. **B**
- 4. **C**
- 5. **B**
- 6. **C**
- 7. **D**
- 8. **C**
- 9. **C**