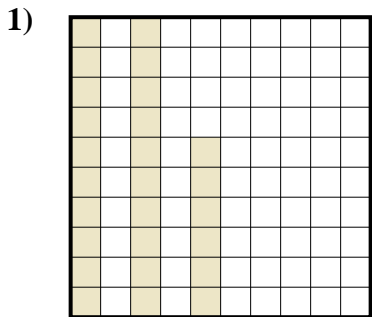


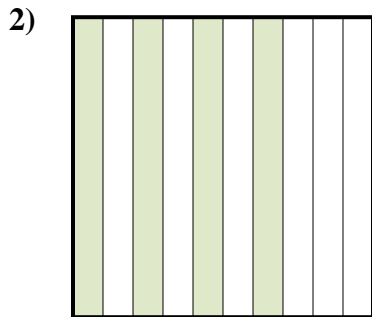


Determina quale lettera rappresenta la quantità colorata del tutto.

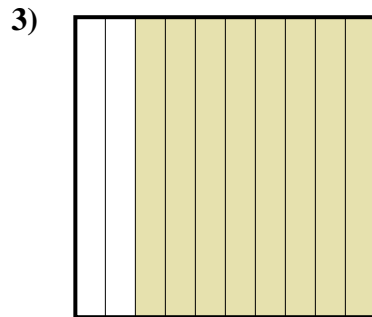
**Risposte**




- A. 0,026
- B. 0,26
- C. 2,6
- D. 260



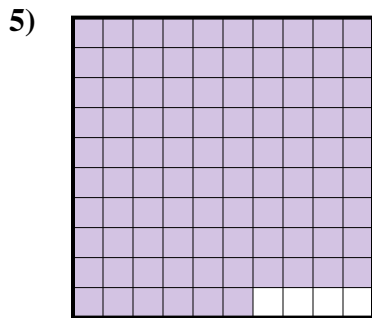
- A. 4
- B. 40
- C. 400
- D. 0,4




- A. 0,08
- B. 8
- C. 0,8
- D. 800



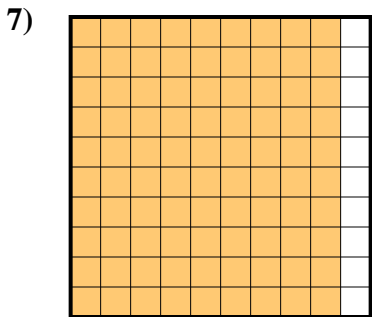
- A. 0,7
- B. 0,07
- C. 70
- D. 700



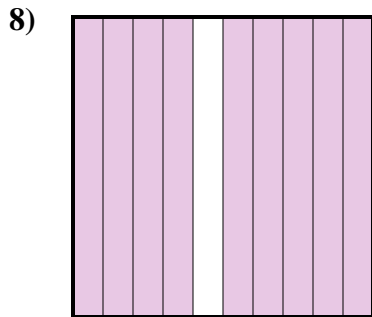
- A. 960
- B. 96
- C. 0,096
- D. 0,96



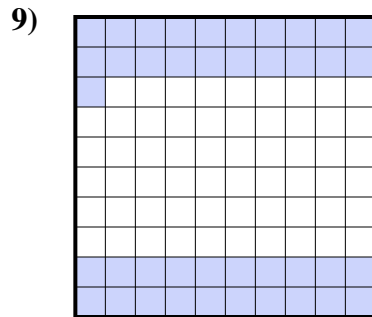
- A. 10
- B. 0,01
- C. 100
- D. 0,1



- A. 0,09
- B. 90
- C. 9
- D. 0,9



- A. 90
- B. 9
- C. 0,9
- D. 0,09



- A. 410
- B. 0,041
- C. 0,41
- D. 4,1

1. \_\_\_\_\_

2. \_\_\_\_\_

3. \_\_\_\_\_

4. \_\_\_\_\_

5. \_\_\_\_\_

6. \_\_\_\_\_

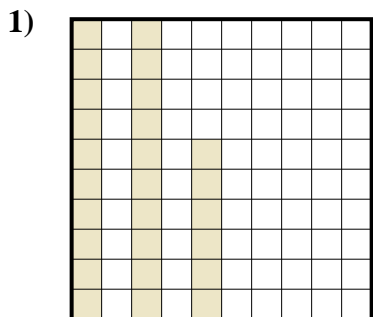
7. \_\_\_\_\_

8. \_\_\_\_\_

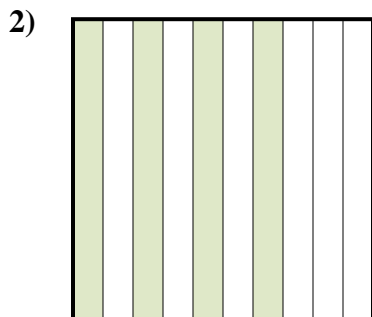
9. \_\_\_\_\_



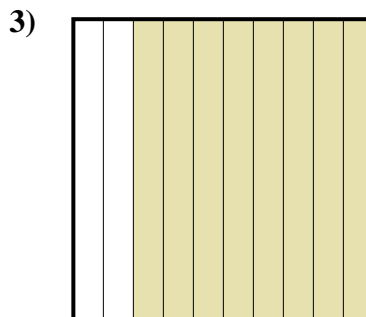
Determina quale lettera rappresenta la quantità colorata del tutto.




- A. 0,026
- B. 0,26
- C. 2,6
- D. 260



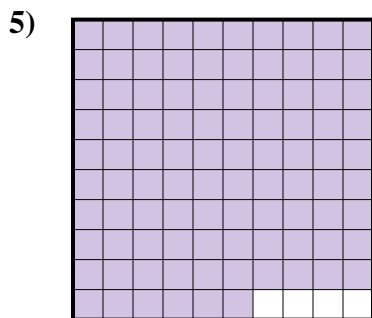
- A. 4
- B. 40
- C. 400
- D. 0,4




- A. 0,08
- B. 8
- C. 0,8
- D. 800



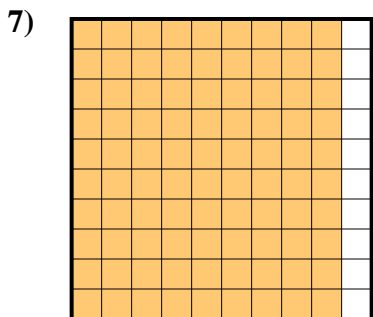
- A. 0,7
- B. 0,07
- C. 70
- D. 700



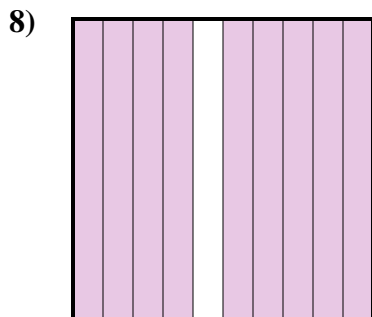
- A. 960
- B. 96
- C. 0,096
- D. 0,96



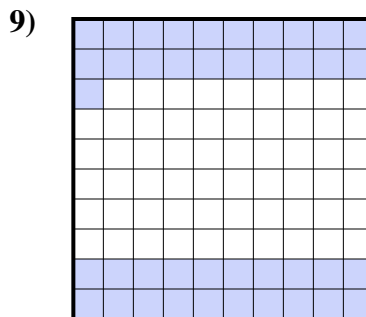
- A. 10
- B. 0,01
- C. 100
- D. 0,1



- A. 0,09
- B. 90
- C. 9
- D. 0,9



- A. 90
- B. 9
- C. 0,9
- D. 0,09



- A. 410
- B. 0,041
- C. 0,41
- D. 4,1

**Risposte**

- 1.     **B**
- 2.     **D**
- 3.     **C**
- 4.     **A**
- 5.     **D**
- 6.     **D**
- 7.     **D**
- 8.     **C**
- 9.     **C**