
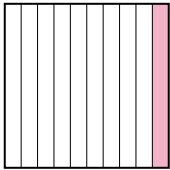
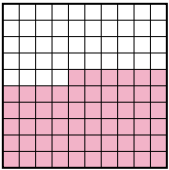
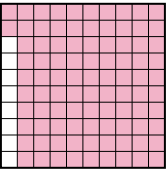




Metti in ordine i seguenti schemi dal più piccolo al più grande, in base alle parti colorate

Risposte

Es) A  B  C  D 

Piccolo 0,1 - B
0,56 - C
0,9 - A
Grande 0,92 - D

Es. **B,C,A,D**

1. _____

2. _____

3. _____

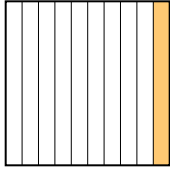

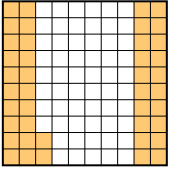
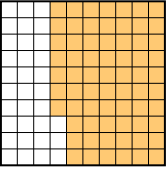
4. _____

5. _____



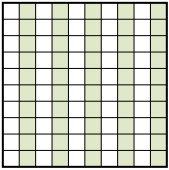
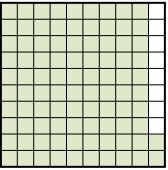
6. _____

7. _____

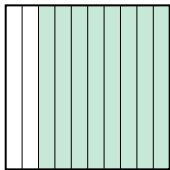


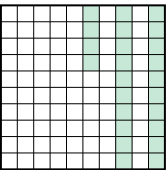
8. _____

1) A  B  C  D 




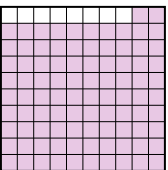
Piccolo _____
Grande _____

2) A  B  C  D 

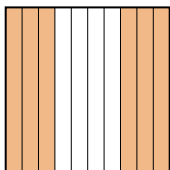
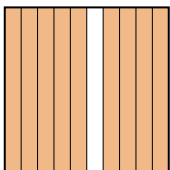
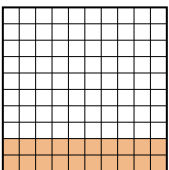
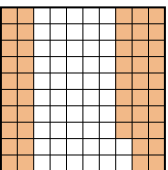
Piccolo _____
Grande _____

3) A  B  C  D 



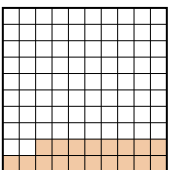
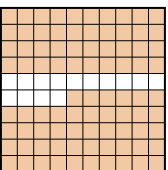
Piccolo _____
Grande _____

4) A  B  C  D 

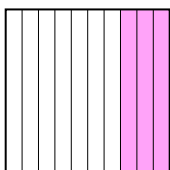

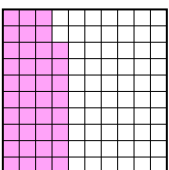
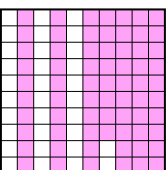
Piccolo _____
Grande _____

5) A  B  C  D 



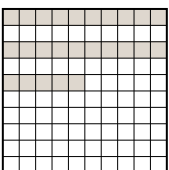

Piccolo _____
Grande _____

6) A  B  C  D 

Piccolo _____
Grande _____

7) A  B  C  D 

Piccolo _____
Grande _____

8) A  B  C  D 

Piccolo _____
Grande _____



Metti in ordine i seguenti schemi dal più piccolo al più grande, in base alle parti colorate

Es)	A	B	C	D	Piccolo $\frac{0,1 - B}{0,56 - C}$ Grande $\frac{0,9 - A}{0,92 - D}$
1)	A	B	C	D	Piccolo $\frac{0,1 - A}{0,4 - B}$ Grande $\frac{0,42 - C}{0,67 - D}$
2)	A	B	C	D	Piccolo $\frac{0,5 - A}{0,50 - C}$ Grande $\frac{0,7 - B}{0,92 - D}$
3)	A	B	C	D	Piccolo $\frac{0,1 - B}{0,24 - D}$ Grande $\frac{0,77 - C}{0,8 - A}$
4)	A	B	C	D	Piccolo $\frac{0,01 - C}{0,4 - A}$ Grande $\frac{0,6 - B}{0,92 - D}$
5)	A	B	C	D	Piccolo $\frac{0,20 - C}{0,48 - D}$ Grande $\frac{0,6 - A}{0,9 - B}$
6)	A	B	C	D	Piccolo $\frac{0,18 - C}{0,2 - A}$ Grande $\frac{0,4 - B}{0,86 - D}$
7)	A	B	C	D	Piccolo $\frac{0,3 - A}{0,38 - C}$ Grande $\frac{0,68 - D}{0,7 - B}$
8)	A	B	C	D	Piccolo $\frac{0,25 - C}{0,5 - B}$ Grande $\frac{0,7 - A}{0,89 - D}$

Risposte

- Es. B,C,A,D
1. A,B,C,D
2. A,C,B,D
3. B,D,C,A
4. C,A,B,D
5. C,D,A,B
6. C,A,B,D
7. A,C,D,B
8. C,B,A,D