
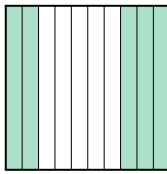
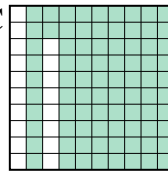
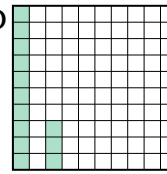




Metti in ordine i seguenti schemi dal più piccolo al più grande, in base alle parti colorate


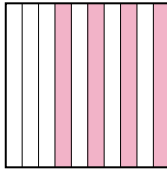
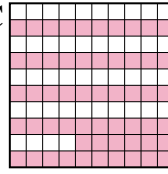
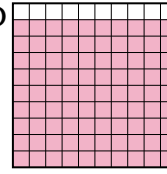
**Risposte**

Es) A  B  C  D 

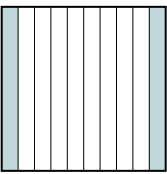
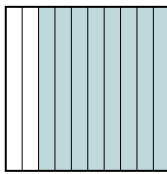

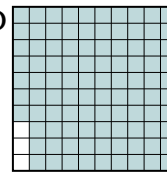
Piccolo 0,13 - D  
0,5 - B  
0,7 - A  
Grande 0,82 - C

Es. D,B,A,C


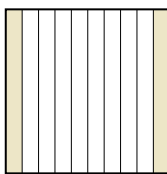
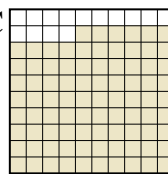
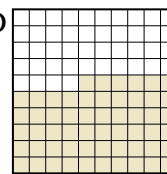
1. \_\_\_\_\_
2. \_\_\_\_\_
3. \_\_\_\_\_
4. \_\_\_\_\_
5. \_\_\_\_\_
6. \_\_\_\_\_
7. \_\_\_\_\_
8. \_\_\_\_\_

1) A  B  C  D 



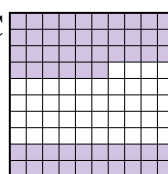
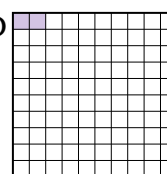
Piccolo \_\_\_\_\_  
Grande \_\_\_\_\_

2) A  B  C  D 



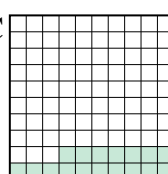
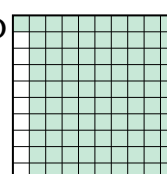
Piccolo \_\_\_\_\_  
Grande \_\_\_\_\_

3) A  B  C  D 

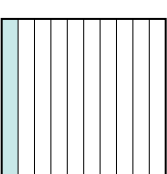
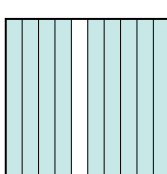


Piccolo \_\_\_\_\_  
Grande \_\_\_\_\_

4) A  B  C  D 



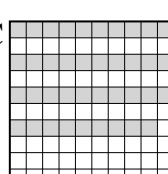
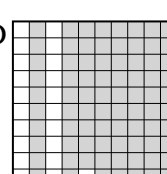
Piccolo \_\_\_\_\_  
Grande \_\_\_\_\_

5) A  B  C  D 

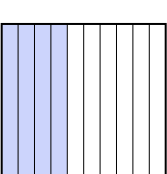
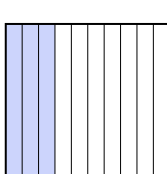
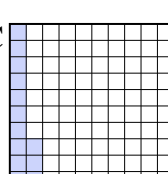
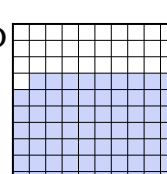
Piccolo \_\_\_\_\_  
Grande \_\_\_\_\_

6) A  B  C  D 

Piccolo \_\_\_\_\_  
Grande \_\_\_\_\_

7) A  B  C  D 

Piccolo \_\_\_\_\_  
Grande \_\_\_\_\_

8) A  B  C  D 

Piccolo \_\_\_\_\_  
Grande \_\_\_\_\_



Metti in ordine i seguenti schemi dal più piccolo al più grande, in base alle parti colorate

|     |   |   |   |   |                                |
|-----|---|---|---|---|--------------------------------|
| Es) | A | B | C | D | Piccolo $\frac{0,13}{0,5}$ - D |
|     |   |   |   |   | $\frac{0,7}{0,82}$ - C         |
| 1)  | A | B | C | D | Piccolo $\frac{0,3}{0,4}$ - B  |
|     |   |   |   |   | $\frac{0,56}{0,90}$ - D        |
| 2)  | A | B | C | D | Piccolo $\frac{0,18}{0,2}$ - A |
|     |   |   |   |   | $\frac{0,8}{0,97}$ - D         |
| 3)  | A | B | C | D | Piccolo $\frac{0,2}{0,5}$ - A  |
|     |   |   |   |   | $\frac{0,56}{0,86}$ - C        |
| 4)  | A | B | C | D | Piccolo $\frac{0,02}{0,5}$ - B |
|     |   |   |   |   | $\frac{0,56}{0,8}$ - A         |
| 5)  | A | B | C | D | Piccolo $\frac{0,17}{0,5}$ - B |
|     |   |   |   |   | $\frac{0,9}{0,91}$ - D         |
| 6)  | A | B | C | D | Piccolo $\frac{0,1}{0,10}$ - A |
|     |   |   |   |   | $\frac{0,9}{0,91}$ - C         |
| 7)  | A | B | C | D | Piccolo $\frac{0,39}{0,6}$ - A |
|     |   |   |   |   | $\frac{0,7}{0,79}$ - D         |
| 8)  | A | B | C | D | Piccolo $\frac{0,13}{0,3}$ - B |
|     |   |   |   |   | $\frac{0,4}{0,69}$ - D         |

**Risposte**

- Es. D,B,A,C
1. A,B,C,D
2. C,A,B,D
3. B,A,D,C
4. D,B,C,A
5. C,B,A,D
6. A,D,B,C
7. C,A,B,D
8. C,B,A,D