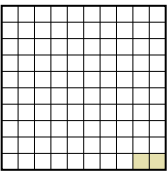
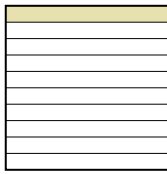
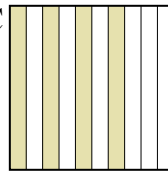
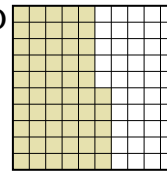




Metti in ordine i seguenti schemi dal più piccolo al più grande, in base alle parti colorate

Risposte

Es) A  B  C  D 

Piccolo 0,02 - A
0,1 - B
0,4 - C
Grande 0,55 - D

Es. A,B,C,D

1. _____

2. _____

3. _____

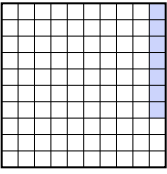


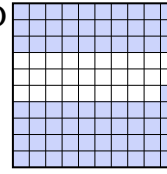
4. _____

5. _____

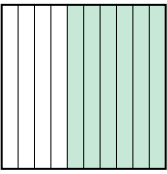
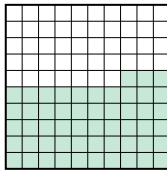

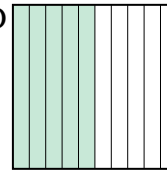
6. _____

7. _____

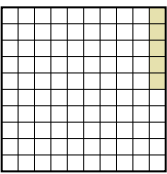
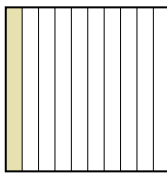
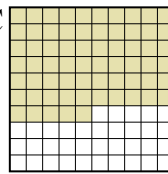
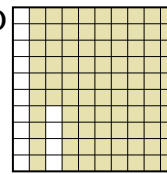
8. _____

1) A  B  C  D 

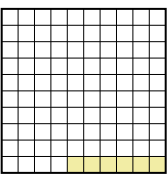
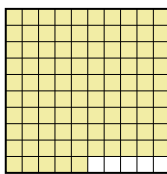
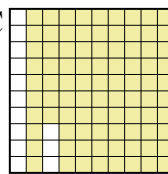

Piccolo _____
Grande _____

2) A  B  C  D 




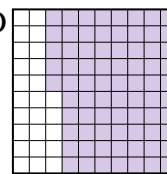
Piccolo _____
Grande _____

3) A  B  C  D 

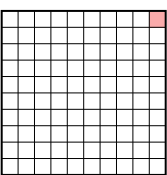
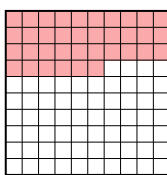
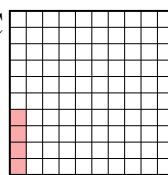
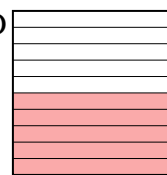
Piccolo _____
Grande _____

4) A  B  C  D 


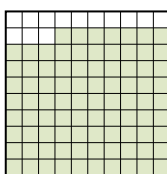
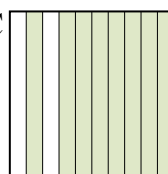
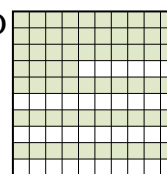
Piccolo _____
Grande _____

5) A  B  C  D 


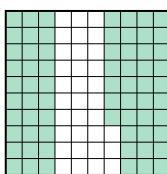

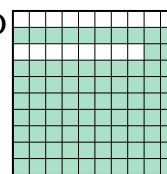
Piccolo _____
Grande _____

6) A  B  C  D 

Piccolo _____
Grande _____

7) A  B  C  D 

Piccolo _____
Grande _____

8) A  B  C  D 

Piccolo _____
Grande _____



Metti in ordine i seguenti schemi dal più piccolo al più grande, in base alle parti colorate

Es)	A	B	C	D	Piccolo $\frac{0,02 - A}{0,1 - B}$	
					Grande $\frac{0,4 - C}{0,55 - D}$	
1)	A	B	C	D	Piccolo $\frac{0,07 - A}{0,6 - C}$	
					Grande $\frac{0,71 - D}{0,92 - B}$	
2)	A	B	C	D	Piccolo $\frac{0,13 - C}{0,5 - D}$	
					Grande $\frac{0,53 - B}{0,6 - A}$	
3)	A	B	C	D	Piccolo $\frac{0,05 - A}{0,1 - B}$	
					Grande $\frac{0,65 - C}{0,86 - D}$	
4)	A	B	C	D	Piccolo $\frac{0,06 - A}{0,2 - D}$	
					Grande $\frac{0,87 - C}{0,95 - B}$	
5)	A	B	C	D	Piccolo $\frac{0,5 - B}{0,7 - C}$	
					Grande $\frac{0,75 - D}{0,8 - A}$	
6)	A	B	C	D	Piccolo $\frac{0,01 - A}{0,04 - C}$	
					Grande $\frac{0,36 - B}{0,5 - D}$	
7)	A	B	C	D	Piccolo $\frac{0,64 - D}{0,8 - C}$	
					Grande $\frac{0,87 - B}{0,9 - A}$	
8)	A	B	C	D	Piccolo $\frac{0,21 - C}{0,5 - A}$	
					Grande $\frac{0,67 - B}{0,82 - D}$	

Risposte

- Es. A,B,C,D
1. A,C,D,B
2. C,D,B,A
3. A,B,C,D
4. A,D,C,B
5. B,C,D,A
6. A,C,B,D
7. D,C,B,A
8. C,A,B,D