


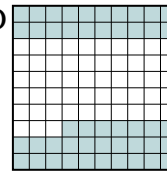




Metti in ordine i seguenti schemi dal più piccolo al più grande, in base alle parti colorate

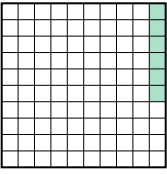
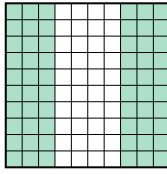

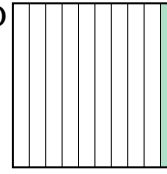
Risposte

Es) A  B  C  D 

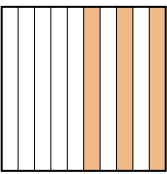
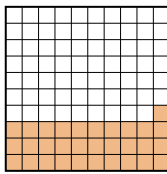
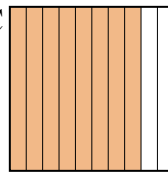
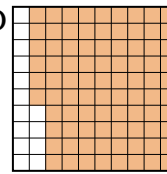
Piccolo 0,4 - A
0,47 - D
0,6 - C
Grande 0,86 - B

Es. A,D,C,B

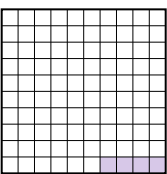
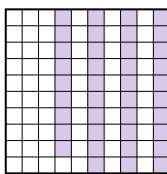

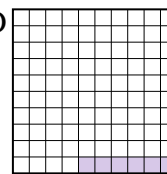
1. _____
2. _____
3. _____
4. _____
5. _____
6. _____
7. _____
8. _____

1) A  B  C  D 

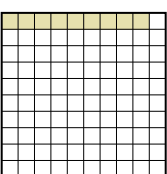
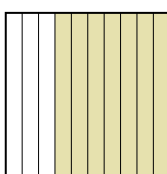

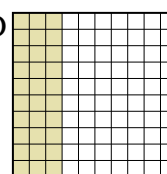
Piccolo _____
Grande _____

2) A  B  C  D 

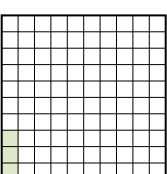
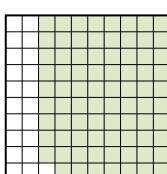
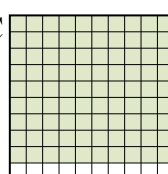
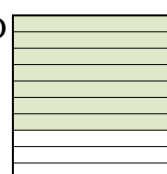
Piccolo _____
Grande _____

3) A  B  C  D 


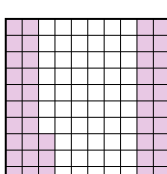
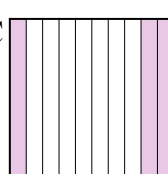
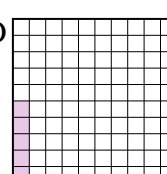
Piccolo _____
Grande _____

4) A  B  C  D 

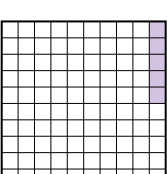

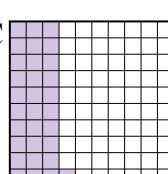
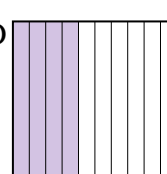
Piccolo _____
Grande _____

5) A  B  C  D 


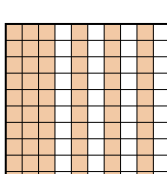


Piccolo _____
Grande _____

6) A  B  C  D 

Piccolo _____
Grande _____

7) A  B  C  D 

Piccolo _____
Grande _____

8) A  B  C  D 

Piccolo _____
Grande _____



Mettili in ordine i seguenti schemi dal più piccolo al più grande, in base alle parti colorate

Es)	A	B	C	D	Piccolo $\frac{0,4 - A}{0,47 - D}$	
					Grande $\frac{0,6 - C}{0,86 - B}$	
1)	A	B	C	D	Piccolo $\frac{0,06 - A}{0,1 - D}$	
					Grande $\frac{0,60 - B}{0,7 - C}$	
2)	A	B	C	D	Piccolo $\frac{0,3 - A}{0,31 - B}$	
					Grande $\frac{0,8 - C}{0,86 - D}$	
3)	A	B	C	D	Piccolo $\frac{0,04 - A}{0,06 - D}$	
					Grande $\frac{0,39 - B}{0,5 - C}$	
4)	A	B	C	D	Piccolo $\frac{0,09 - A}{0,30 - D}$	
					Grande $\frac{0,6 - C}{0,7 - B}$	
5)	A	B	C	D	Piccolo $\frac{0,03 - A}{0,7 - D}$	
					Grande $\frac{0,79 - B}{0,90 - C}$	
6)	A	B	C	D	Piccolo $\frac{0,01 - A}{0,05 - D}$	
					Grande $\frac{0,3 - C}{0,43 - B}$	
7)	A	B	C	D	Piccolo $\frac{0,05 - A}{0,1 - B}$	
					Grande $\frac{0,31 - C}{0,4 - D}$	
8)	A	B	C	D	Piccolo $\frac{0,1 - A}{0,2 - D}$	
					Grande $\frac{0,4 - C}{0,60 - B}$	

Risposte

- Es. A,D,C,B
1. A,D,B,C
2. A,B,C,D
3. A,D,B,C
4. A,D,C,B
5. A,D,B,C
6. A,D,C,B
7. A,B,C,D
8. A,D,C,B