



Metti in ordine i seguenti schemi dal più piccolo al più grande, in base alle parti colorate

Risposte

Es) A B C D

Piccolo 0,03 - A
0,35 - B
0,7 - C
Grande 0,96 - D

Es. A,B,C,D

1. _____
2. _____
3. _____
4. _____
5. _____
6. _____
7. _____
8. _____

1) A B C D

Piccolo _____

 Grande _____

2) A B C D

Piccolo _____

 Grande _____

3) A B C D

Piccolo _____

 Grande _____

4) A B C D

Piccolo _____

 Grande _____

5) A B C D

Piccolo _____

 Grande _____

6) A B C D

Piccolo _____

 Grande _____

7) A B C D

Piccolo _____

 Grande _____

8) A B C D


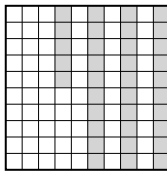
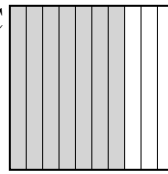

Piccolo _____

 Grande _____



Metti in ordine i seguenti schemi dal più piccolo al più grande, in base alle parti colorate

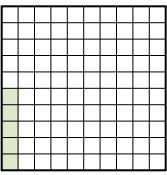
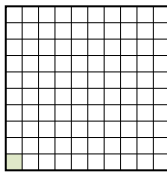
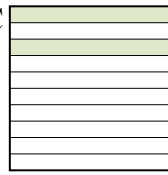
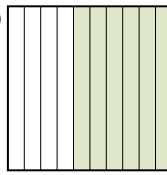
Risposte

Es) A  B  C  D 

Piccolo $\frac{0,03 - A}{0,35 - B}$
 $\frac{0,7 - C}{0,96 - D}$

Grande




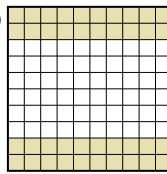
Es. A,B,C,D

1) A  B  C  D 

Piccolo $\frac{0,01 - B}{0,05 - A}$
 $\frac{0,2 - C}{0,6 - D}$

Grande

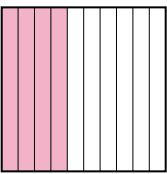
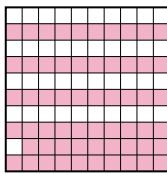
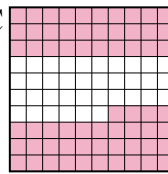
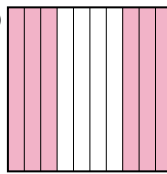
1. B,A,C,D

2) A  B  C  D 

Piccolo $\frac{0,2 - A}{0,40 - D}$
 $\frac{0,6 - B}{0,8 - C}$

Grande


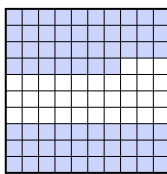
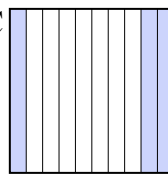
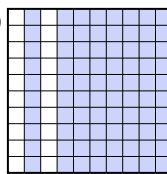
2. A,D,B,C

3) A  B  C  D 

Piccolo $\frac{0,4 - A}{0,59 - B}$
 $\frac{0,6 - D}{0,64 - C}$

Grande

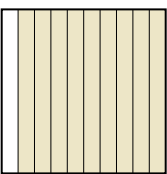

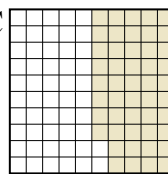
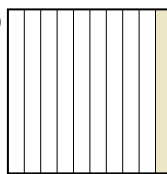
3. A,B,D,C

4) A  B  C  D 

Piccolo $\frac{0,3 - C}{0,67 - B}$
 $\frac{0,7 - A}{0,80 - D}$

Grande

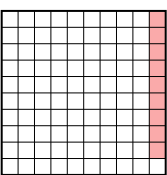
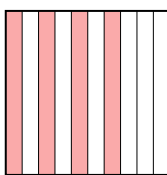
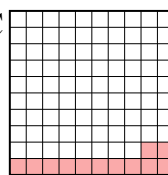

4. C,B,A,D

5) A  B  C  D 

Piccolo $\frac{0,1 - D}{0,3 - B}$
 $\frac{0,48 - C}{0,9 - A}$

Grande


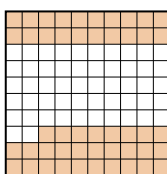
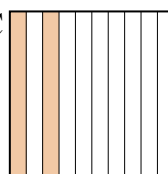
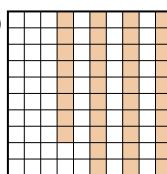
5. D,B,C,A

6) A  B  C  D 

Piccolo $\frac{0,09 - A}{0,12 - C}$
 $\frac{0,4 - B}{0,5 - D}$

Grande

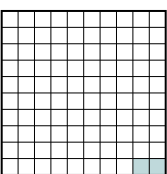
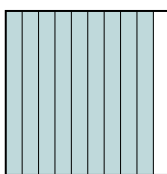
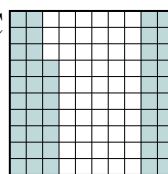

6. A,C,B,D

7) A  B  C  D 

Piccolo $\frac{0,1 - A}{0,2 - C}$
 $\frac{0,38 - D}{0,48 - B}$

Grande

7. A,C,D,B

8) A  B  C  D 

Piccolo $\frac{0,02 - A}{0,47 - C}$
 $\frac{0,6 - D}{0,9 - B}$

Grande

8. A,C,D,B