

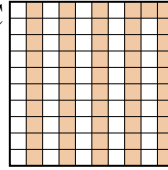
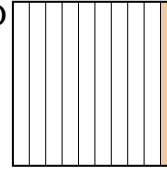




Metti in ordine i seguenti schemi dal più piccolo al più grande, in base alle parti colorate

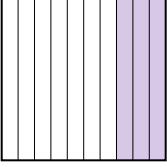

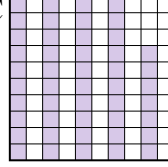
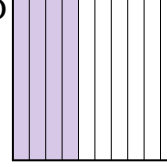
Risposte

Es) A  B  C  D 

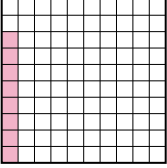
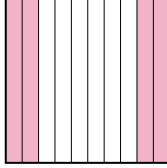
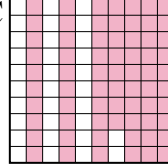
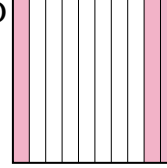
Piccolo 0,1 - D
0,51 - C
0,7 - A
Grande 0,8 - B

Es. D,C,A,B

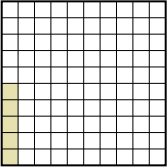
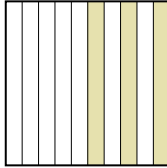
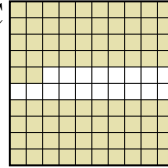
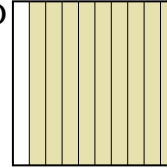
1. _____
2. _____
3. _____
4. _____
5. _____
6. _____
7. _____
8. _____

1) A  B  C  D 

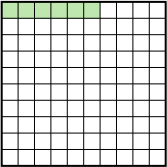
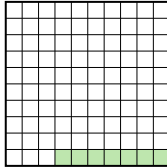
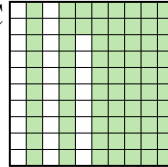
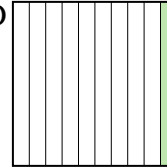
Piccolo _____
Grande _____

2) A  B  C  D 

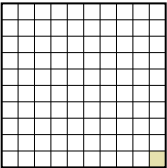
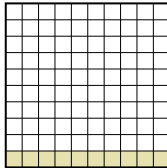
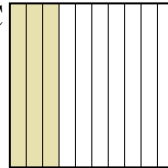

Piccolo _____
Grande _____

3) A  B  C  D 

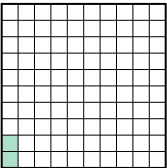

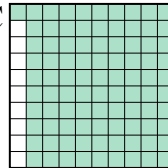
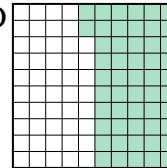
Piccolo _____
Grande _____

4) A  B  C  D 

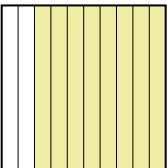
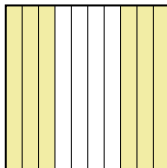
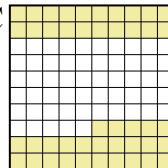

Piccolo _____
Grande _____

5) A  B  C  D 

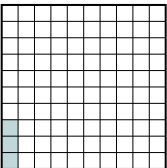


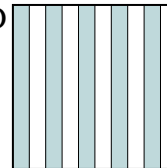
Piccolo _____
Grande _____

6) A  B  C  D 

Piccolo _____
Grande _____

7) A  B  C  D 

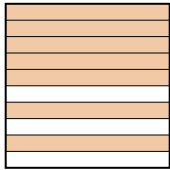

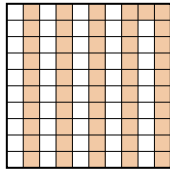
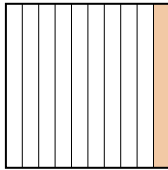
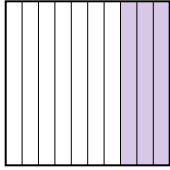

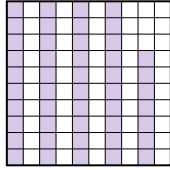
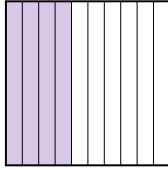
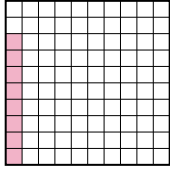
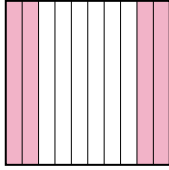
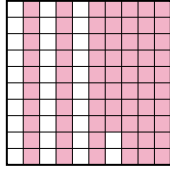
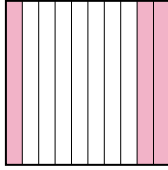
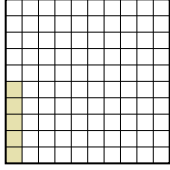
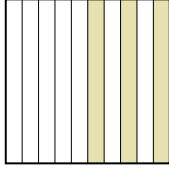
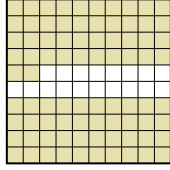

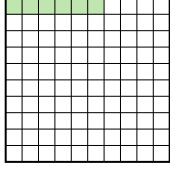
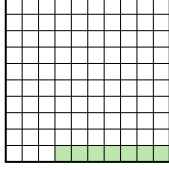
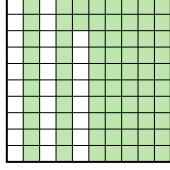



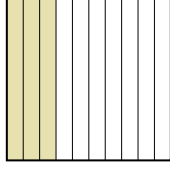






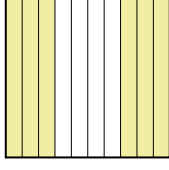
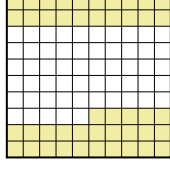


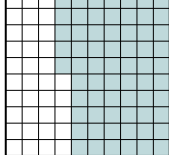


Piccolo _____
Grande _____

8) A  B  C  D 

Piccolo _____
Grande _____



Metti in ordine i seguenti schemi dal più piccolo al più grande, in base alle parti colorate

Es)	A 	B 	C 	D 	Piccolo $\frac{0,1 - D}{0,51 - C}$ $\frac{0,7 - A}{0,8 - B}$
1)	A 	B 	C 	D 	Piccolo $\frac{0,3 - A}{0,4 - D}$ $\frac{0,47 - C}{0,7 - B}$
2)	A 	B 	C 	D 	Piccolo $\frac{0,08 - A}{0,3 - D}$ $\frac{0,4 - B}{0,68 - C}$
3)	A 	B 	C 	D 	Piccolo $\frac{0,05 - A}{0,3 - B}$ $\frac{0,82 - C}{0,9 - D}$
4)	A 	B 	C 	D 	Piccolo $\frac{0,06 - A}{0,07 - B}$ $\frac{0,1 - D}{0,72 - C}$
5)	A 	B 	C 	D 	Piccolo $\frac{0,01 - A}{0,10 - B}$ $\frac{0,3 - C}{0,6 - D}$
6)	A 	B 	C 	D 	Piccolo $\frac{0,02 - A}{0,1 - B}$ $\frac{0,52 - D}{0,91 - C}$
7)	A 	B 	C 	D 	Piccolo $\frac{0,1 - D}{0,45 - C}$ $\frac{0,6 - B}{0,8 - A}$
8)	A 	B 	C 	D 	Piccolo $\frac{0,03 - A}{0,5 - D}$ $\frac{0,6 - C}{0,65 - B}$

Risposte

- Es. D,C,A,B
1. A,D,C,B
2. A,D,B,C
3. A,B,C,D
4. A,B,D,C
5. A,B,C,D
6. A,B,D,C
7. D,C,B,A
8. A,D,C,B