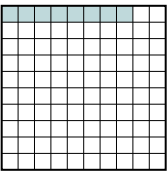

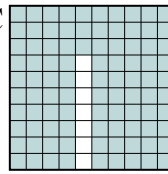
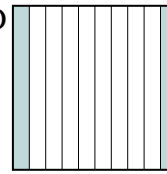




Metti in ordine i seguenti schemi dal più piccolo al più grande, in base alle parti colorate


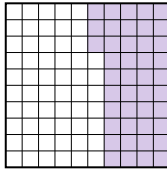

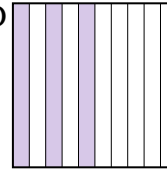
Risposte

Es) A  B  C  D 

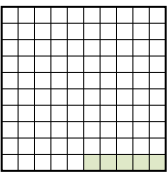
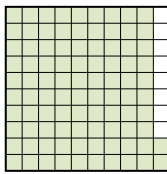

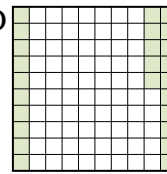
Piccolo $\frac{0,08 - A}{0,2 - D}$
Grande $\frac{0,5 - B}{0,93 - C}$

Es. A,D,B,C



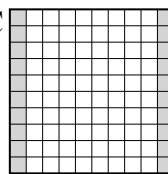

1. _____
2. _____
3. _____
4. _____
5. _____
6. _____
7. _____
8. _____

1) A  B  C  D 

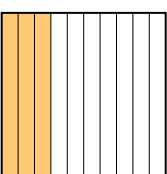
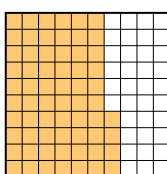
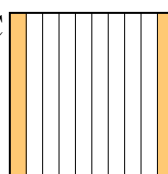
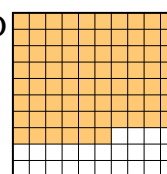
Piccolo _____
Grande _____

2) A  B  C  D 

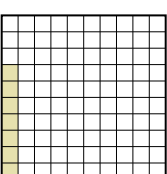
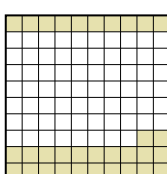

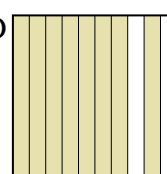
Piccolo _____
Grande _____

3) A  B  C  D 

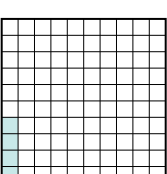
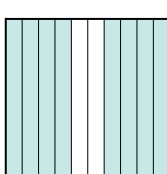
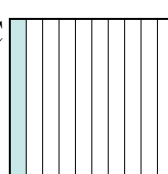
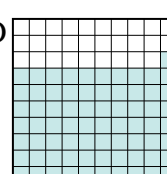
Piccolo _____
Grande _____

4) A  B  C  D 



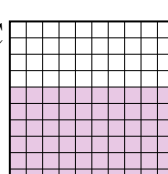
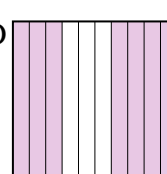
Piccolo _____
Grande _____

5) A  B  C  D 



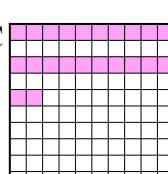
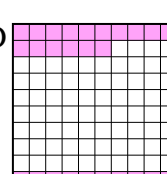
Piccolo _____
Grande _____

6) A  B  C  D 

Piccolo _____
Grande _____

7) A  B  C  D 

Piccolo _____
Grande _____

8) A  B  C  D 

Piccolo _____
Grande _____



Metti in ordine i seguenti schemi dal più piccolo al più grande, in base alle parti colorate

Es)	A	B	C	D	Piccolo $\frac{0,08 - A}{0,2 - D}$ $\frac{0,5 - B}{0,93 - C}$
1)	A	B	C	D	Piccolo $\frac{0,3 - D}{0,43 - B}$ $\frac{0,5 - A}{0,7 - C}$
2)	A	B	C	D	Piccolo $\frac{0,05 - A}{0,25 - D}$ $\frac{0,7 - C}{0,92 - B}$
3)	A	B	C	D	Piccolo $\frac{0,03 - A}{0,20 - C}$ $\frac{0,4 - B}{0,5 - D}$
4)	A	B	C	D	Piccolo $\frac{0,2 - C}{0,3 - A}$ $\frac{0,64 - B}{0,76 - D}$
5)	A	B	C	D	Piccolo $\frac{0,07 - A}{0,32 - B}$ $\frac{0,6 - C}{0,8 - D}$
6)	A	B	C	D	Piccolo $\frac{0,04 - A}{0,1 - C}$ $\frac{0,71 - D}{0,8 - B}$
7)	A	B	C	D	Piccolo $\frac{0,06 - A}{0,2 - B}$ $\frac{0,60 - C}{0,7 - D}$
8)	A	B	C	D	Piccolo $\frac{0,2 - A}{0,22 - C}$ $\frac{0,26 - D}{0,3 - B}$

Risposte

- Es. A,D,B,C
1. D,B,A,C
2. A,D,C,B
3. A,C,B,D
4. C,A,B,D
5. A,B,C,D
6. A,C,D,B
7. A,B,C,D
8. A,C,D,B