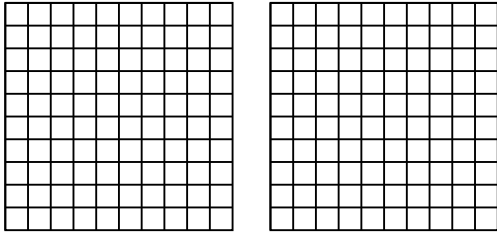


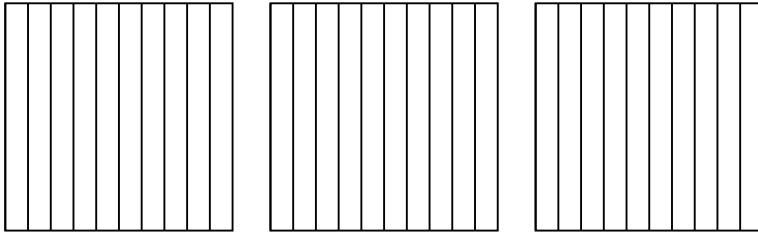


Usa il modello visivo per risolvere ogni problema.

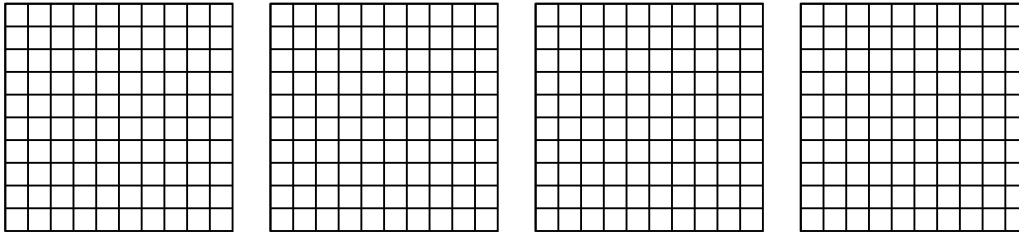
1)  $2 \times 0,89 =$



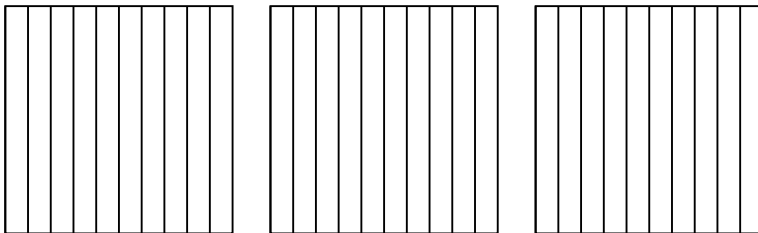
2)  $3 \times 0,1 =$



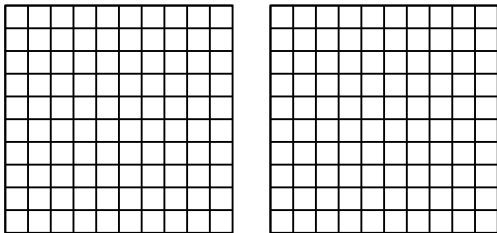
3)  $4 \times 0,74 =$




4)  $3 \times 0,5 =$



5)  $2 \times 0,67 =$



6)  $2 \times 0,43 =$



**Risposte**

1. \_\_\_\_\_

2. \_\_\_\_\_

3. \_\_\_\_\_

4. \_\_\_\_\_

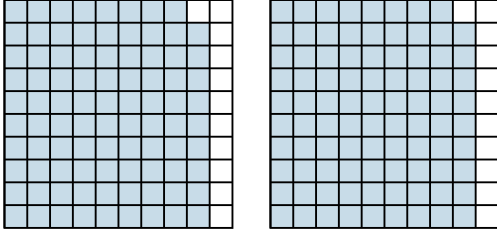
5. \_\_\_\_\_

6. \_\_\_\_\_

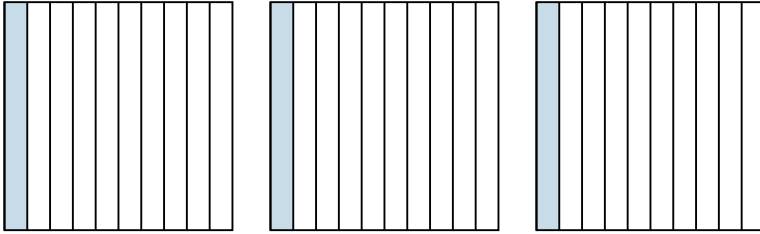


Usa il modello visivo per risolvere ogni problema.

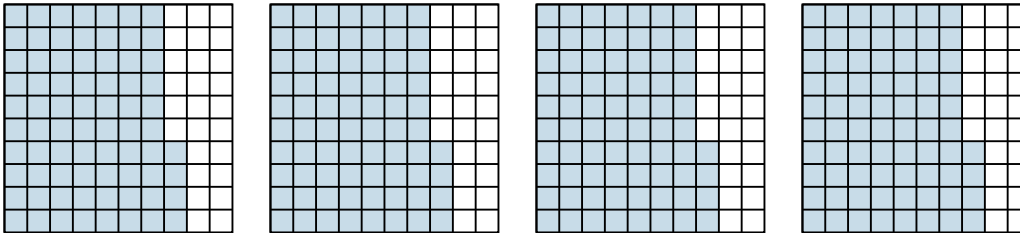
1)  $2 \times 0,89 =$




2)  $3 \times 0,1 =$



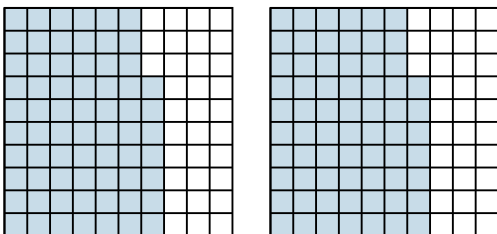
3)  $4 \times 0,74 =$



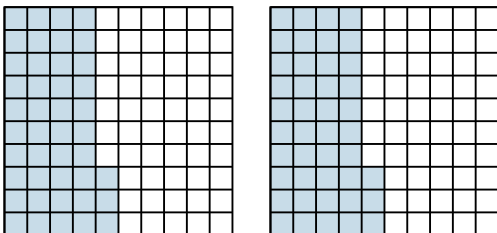
4)  $3 \times 0,5 =$



5)  $2 \times 0,67 =$



6)  $2 \times 0,43 =$



**Risposte**

1.  $\frac{178}{100} = 1,78$

2.  $\frac{3}{10} = 0,3$

3.  $\frac{296}{100} = 2,96$

4.  $\frac{15}{10} = 1,5$

5.  $\frac{134}{100} = 1,34$

6.  $\frac{86}{100} = 0,86$