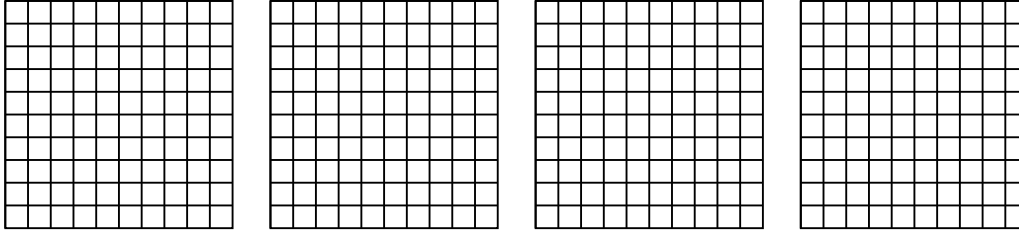


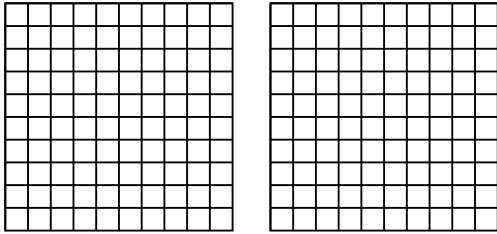


Usa il modello visivo per risolvere ogni problema.

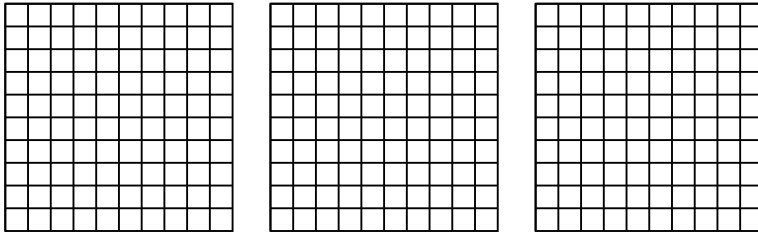
1) $4 \times 0,50 =$



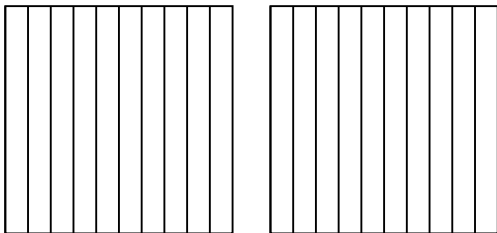
2) $2 \times 0,60 =$



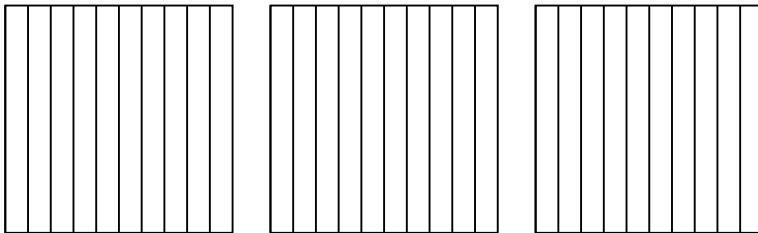
3) $3 \times 0,46 =$




4) $2 \times 0,7 =$



5) $3 \times 0,3 =$



6) $3 \times 0,53 =$



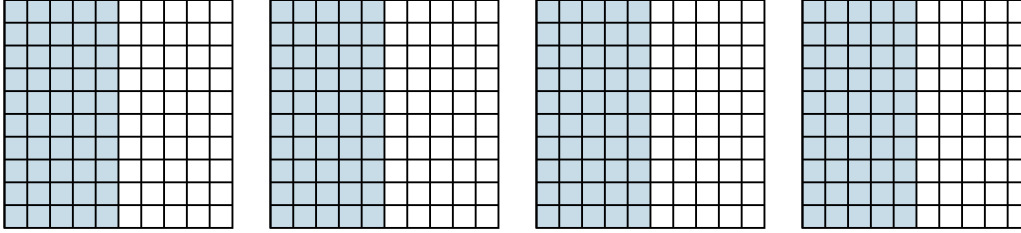
Risposte

- 1. _____
- 2. _____
- 3. _____
- 4. _____
- 5. _____
- 6. _____

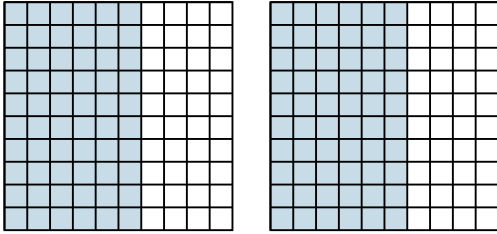


Usa il modello visivo per risolvere ogni problema.

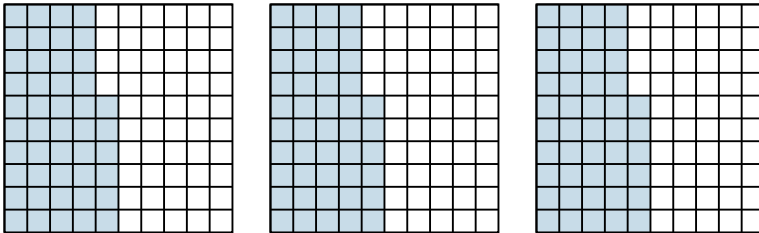
1) $4 \times 0,50 =$



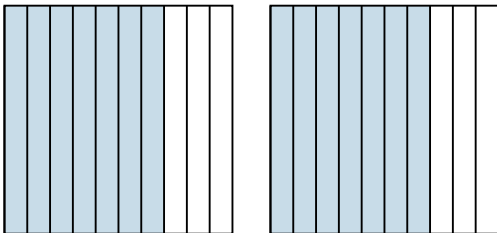
2) $2 \times 0,60 =$




3) $3 \times 0,46 =$



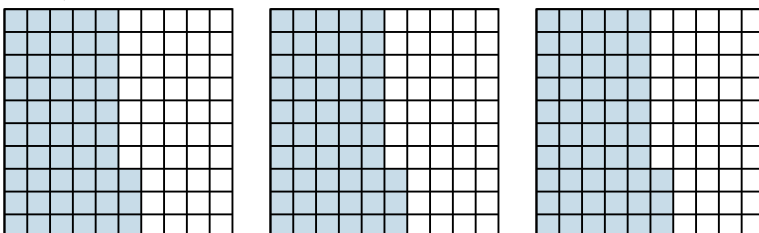
4) $2 \times 0,7 =$



5) $3 \times 0,3 =$



6) $3 \times 0,53 =$



Risposte

1. $\frac{200}{100} = 2$

2. $\frac{120}{100} = 1,2$

3. $\frac{138}{100} = 1,38$

4. $\frac{14}{10} = 1,4$

5. $\frac{9}{10} = 0,9$

6. $\frac{159}{100} = 1,59$