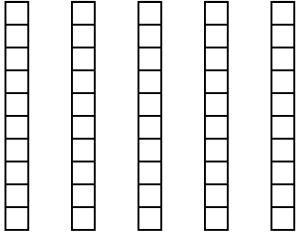


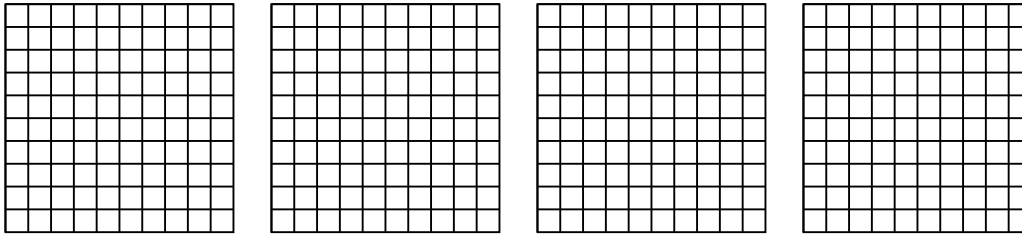


Usa il modello visivo per risolvere ogni problema.

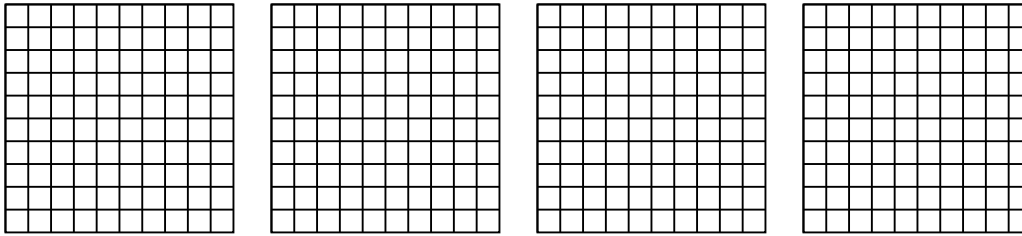
1)  $5 \times 0,4 =$



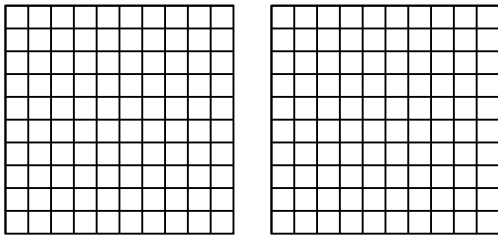
2)  $4 \times 0,56 =$



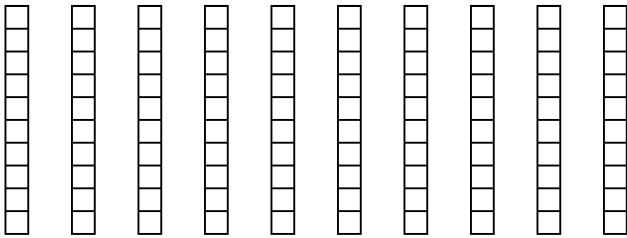
3)  $4 \times 0,61 =$



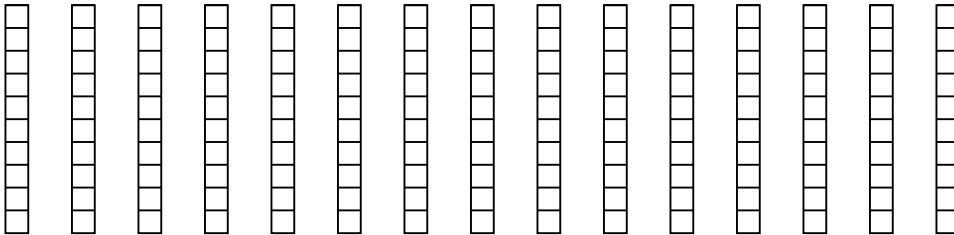
4)  $2 \times 0,65 =$



5)  $10 \times 0,5 =$



6)  $15 \times 0,7 =$

**Risposte**

1. \_\_\_\_\_

2. \_\_\_\_\_

3. \_\_\_\_\_

4. \_\_\_\_\_

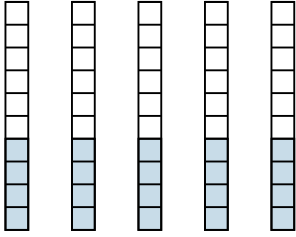
5. \_\_\_\_\_

6. \_\_\_\_\_

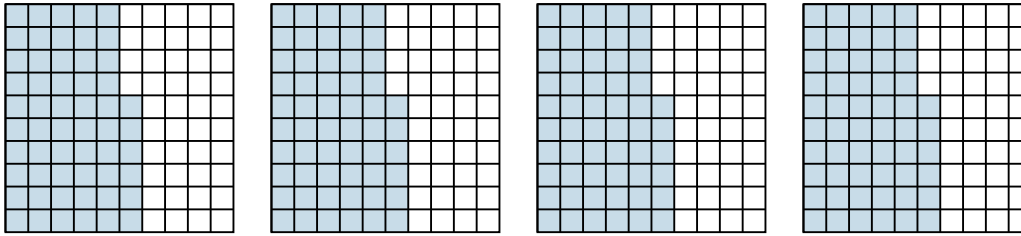


Usa il modello visivo per risolvere ogni problema.

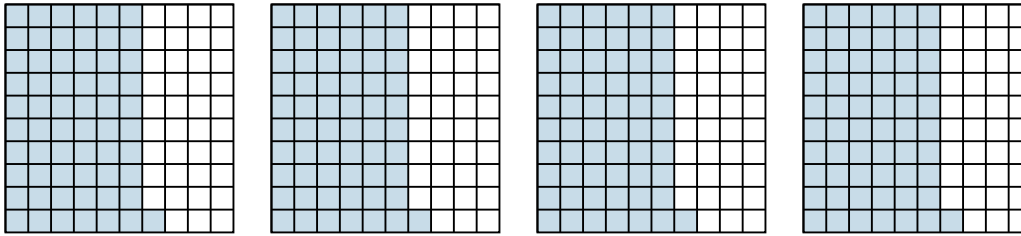
1)  $5 \times 0,4 =$



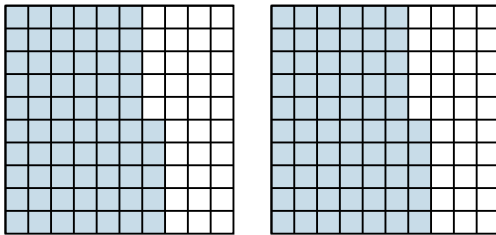
2)  $4 \times 0,56 =$



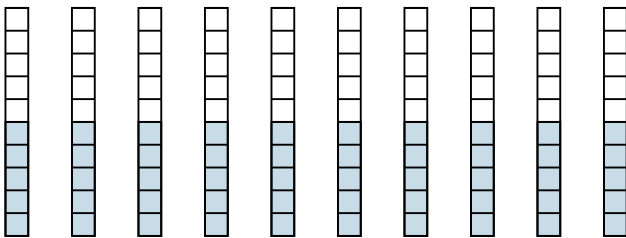
3)  $4 \times 0,61 =$



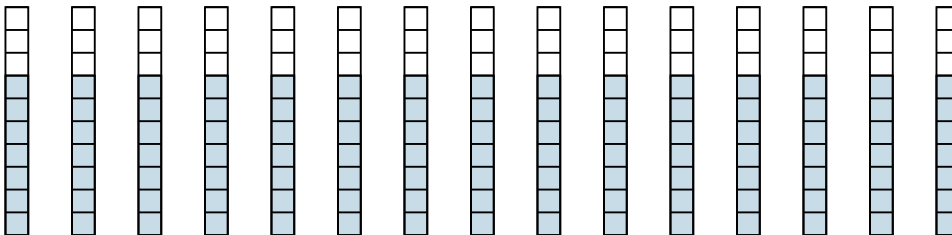
4)  $2 \times 0,65 =$



5)  $10 \times 0,5 =$



6)  $15 \times 0,7 =$



**Risposte**

1.  $\frac{20}{10} = 2$

2.  $\frac{224}{100} = 2,24$

3.  $\frac{244}{100} = 2,44$

4.  $\frac{130}{100} = 1,3$

5.  $\frac{50}{10} = 5$

6.  $\frac{105}{10} = 10,5$