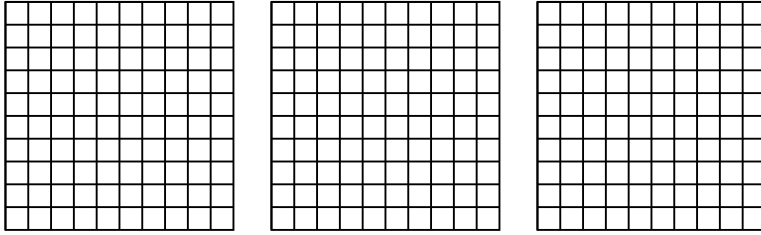


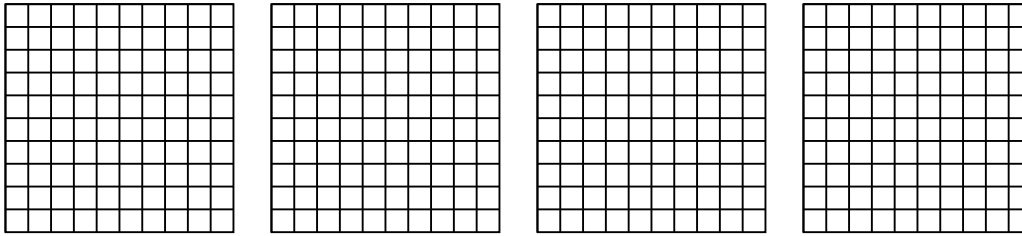


Usa il modello visivo per risolvere ogni problema.

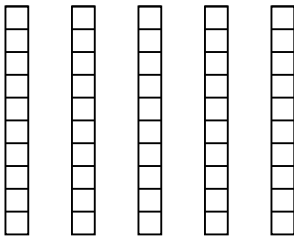
1) $3 \times 0,64 =$



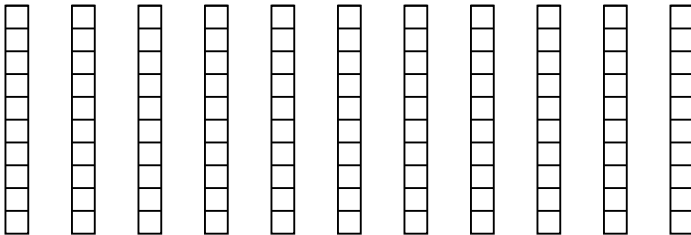
2) $4 \times 0,33 =$



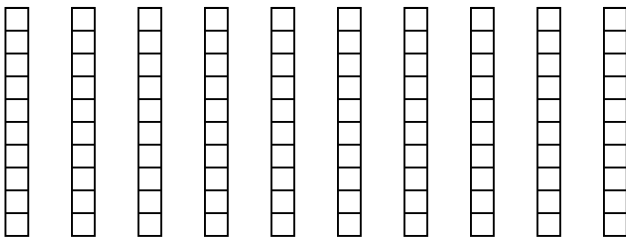
3) $5 \times 0,9 =$



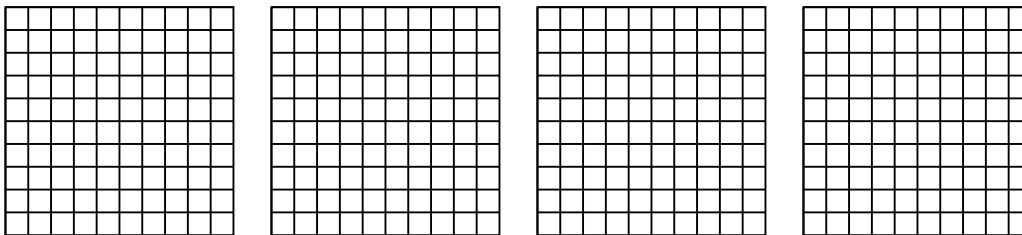
4) $11 \times 0,9 =$



5) $10 \times 0,1 =$



6) $4 \times 0,96 =$



Risposte

1. _____

2. _____

3. _____

4. _____

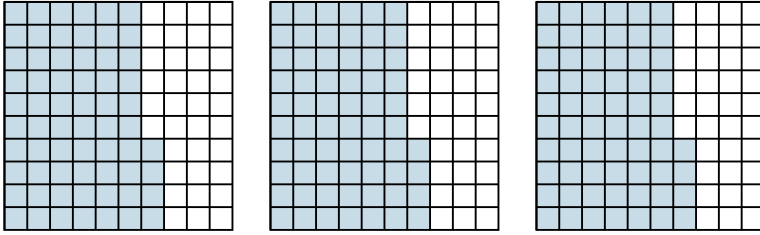
5. _____

6. _____

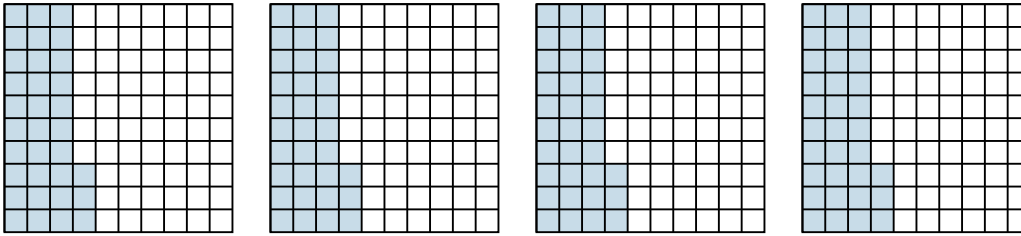


Usa il modello visivo per risolvere ogni problema.

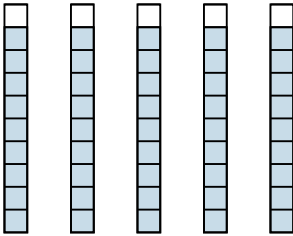
1) $3 \times 0,64 =$



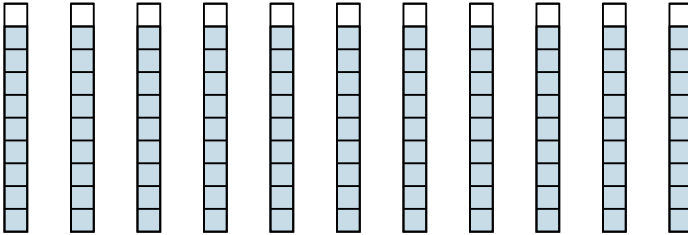
2) $4 \times 0,33 =$



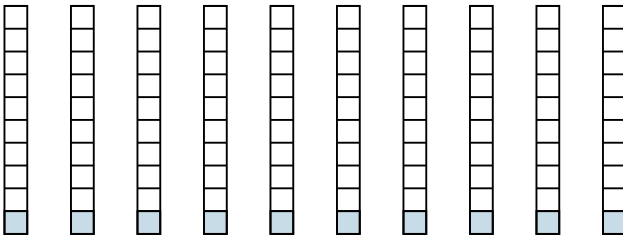
3) $5 \times 0,9 =$



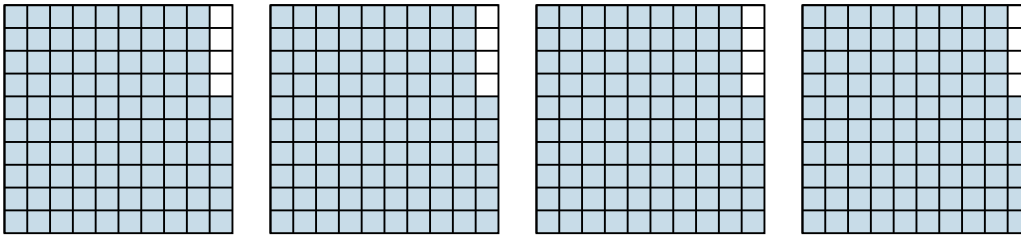
4) $11 \times 0,9 =$



5) $10 \times 0,1 =$



6) $4 \times 0,96 =$



Risposte

1. $\frac{192}{100} = 1,92$

2. $\frac{132}{100} = 1,32$

3. $\frac{45}{10} = 4,5$

4. $\frac{99}{10} = 9,9$

5. $\frac{10}{10} = 1$

6. $\frac{384}{100} = 3,84$