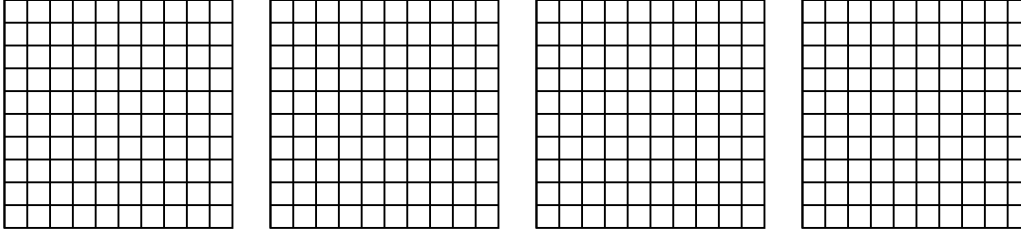


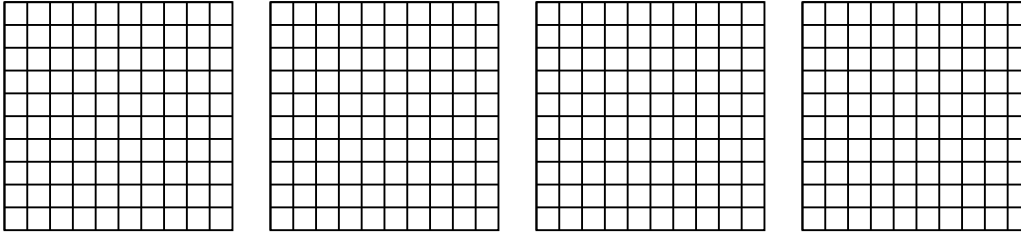


Usa il modello visivo per risolvere ogni problema.

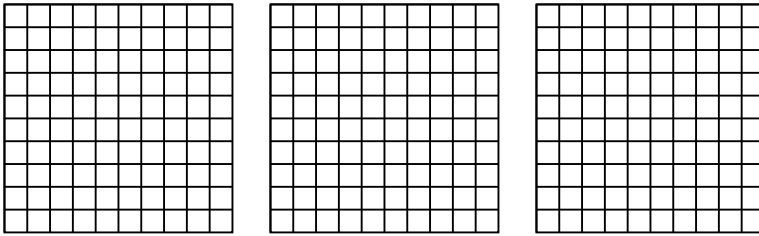
1)  $4 \times 0,36 =$



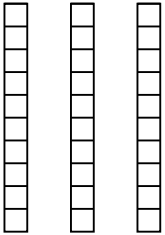
2)  $4 \times 0,90 =$



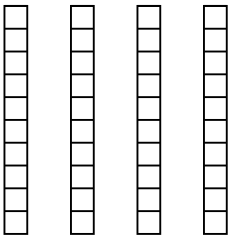
3)  $3 \times 0,95 =$



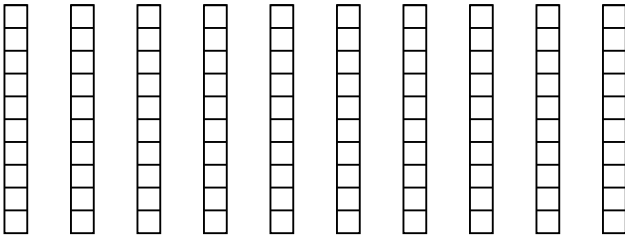
4)  $3 \times 0,1 =$



5)  $4 \times 0,5 =$



6)  $10 \times 0,7 =$



**Risposte**

1. \_\_\_\_\_

2. \_\_\_\_\_

3. \_\_\_\_\_

4. \_\_\_\_\_

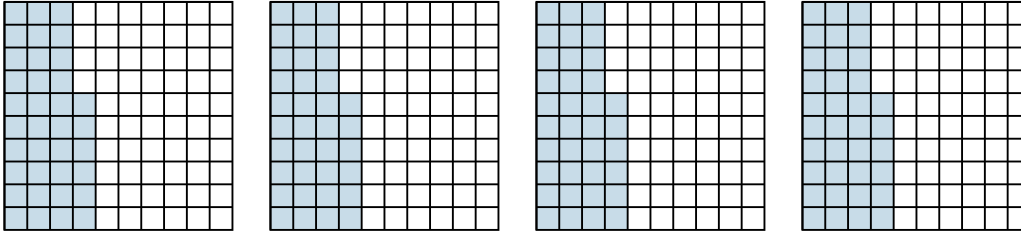
5. \_\_\_\_\_

6. \_\_\_\_\_

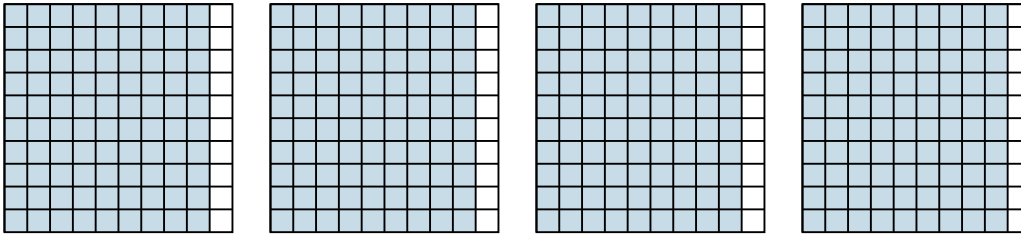


Usa il modello visivo per risolvere ogni problema.

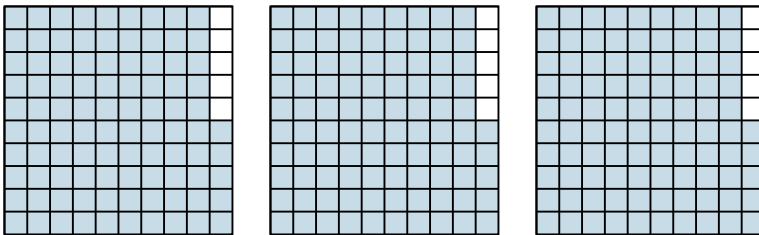
1)  $4 \times 0,36 =$



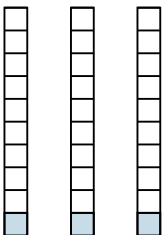
2)  $4 \times 0,90 =$




3)  $3 \times 0,95 =$



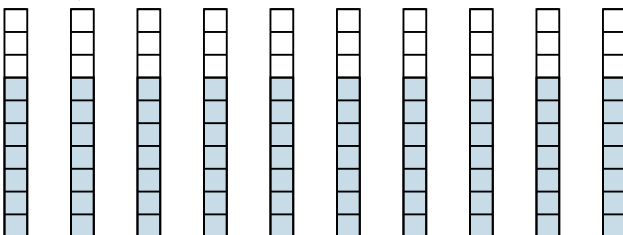
4)  $3 \times 0,1 =$



5)  $4 \times 0,5 =$



6)  $10 \times 0,7 =$



**Risposte**

1.  $\frac{144}{100} = 1,44$

2.  $\frac{360}{100} = 3,6$

3.  $\frac{285}{100} = 2,85$

4.  $\frac{3}{10} = 0,3$

5.  $\frac{20}{10} = 2$

6.  $\frac{70}{10} = 7$