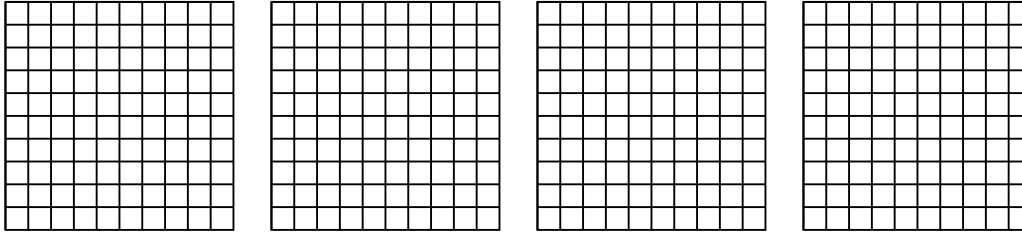


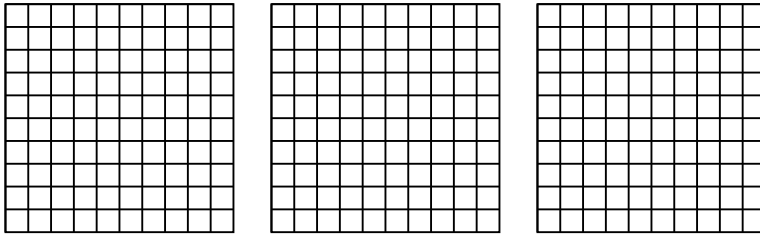


Usa il modello visivo per risolvere ogni problema.

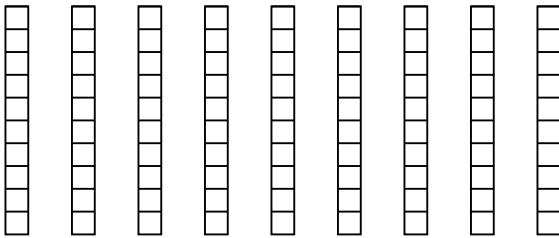
1) $4 \times 0,38 =$



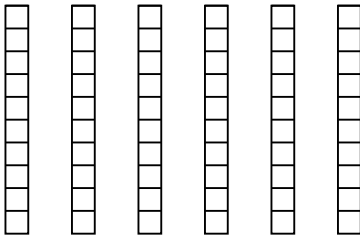
2) $3 \times 0,20 =$



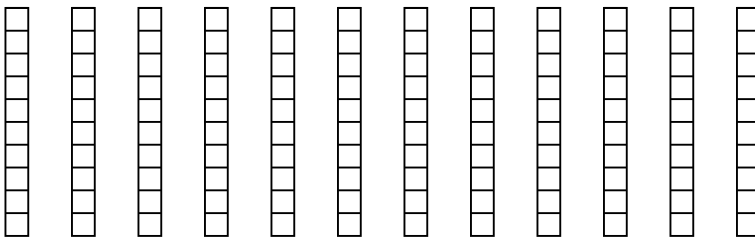
3) $9 \times 0,4 =$



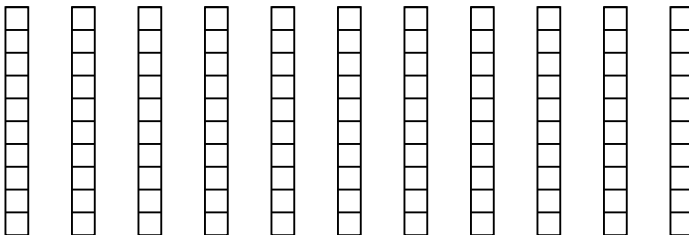
4) $6 \times 0,8 =$



5) $12 \times 0,8 =$



6) $11 \times 0,5 =$



Risposte

1. _____

2. _____

3. _____

4. _____

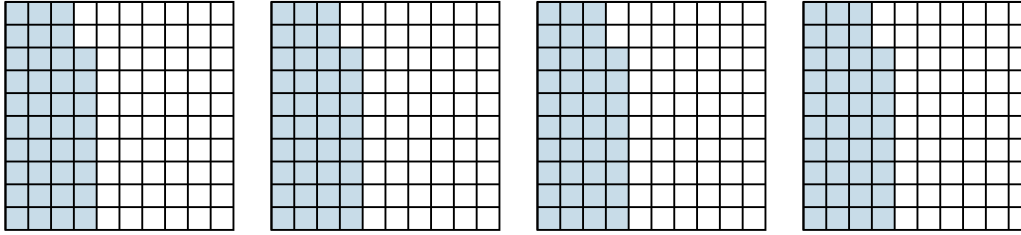
5. _____

6. _____

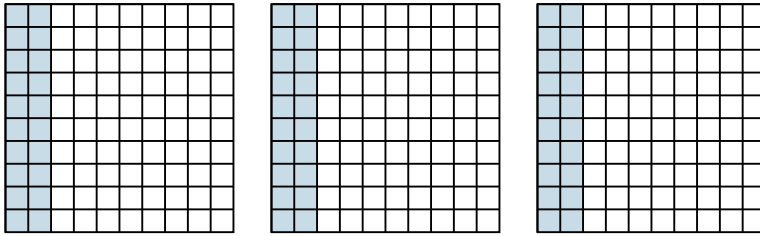


Usa il modello visivo per risolvere ogni problema.

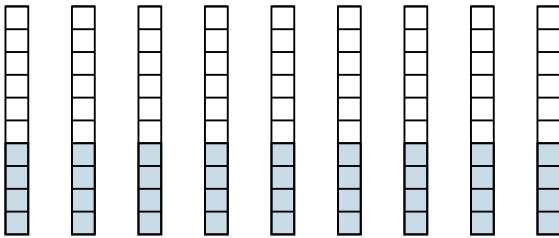
1) $4 \times 0,38 =$



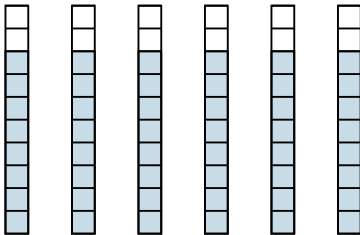
2) $3 \times 0,20 =$



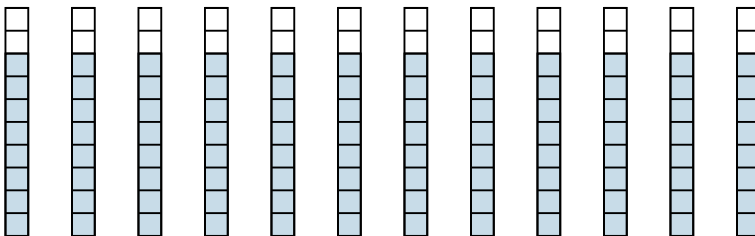
3) $9 \times 0,4 =$



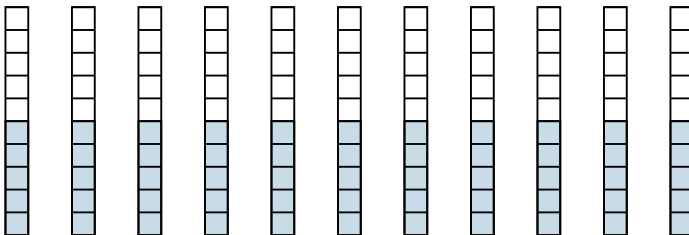
4) $6 \times 0,8 =$



5) $12 \times 0,8 =$



6) $11 \times 0,5 =$



Risposte

1. $\frac{152}{100} = 1,52$

2. $\frac{60}{100} = 0,6$

3. $\frac{36}{10} = 3,6$

4. $\frac{48}{10} = 4,8$

5. $\frac{96}{10} = 9,6$

6. $\frac{55}{10} = 5,5$