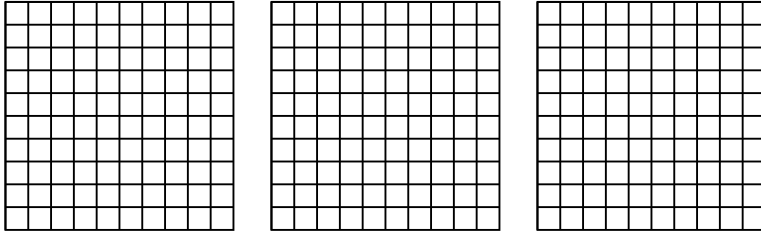


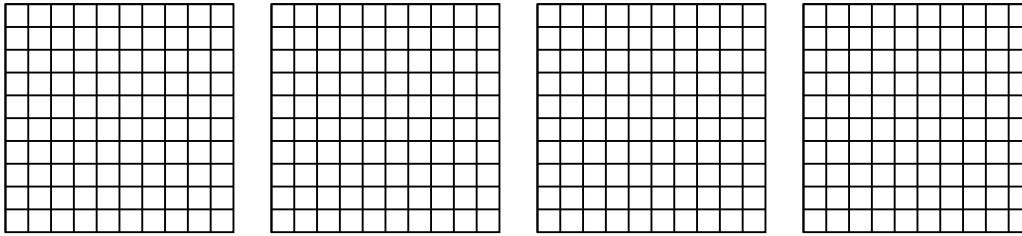


Usa il modello visivo per risolvere ogni problema.

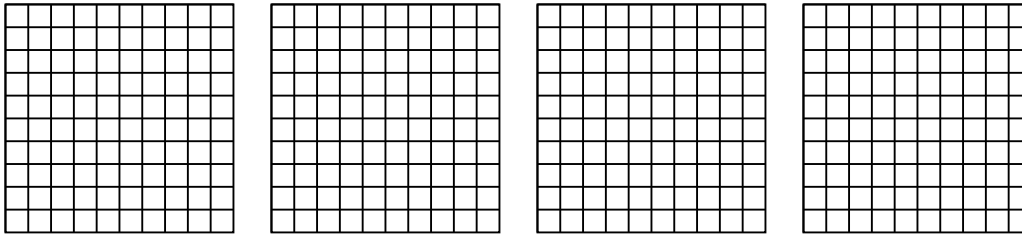
1)  $3 \times 0,61 =$



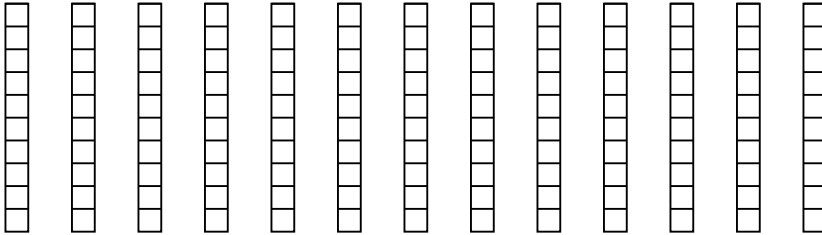
2)  $4 \times 0,86 =$



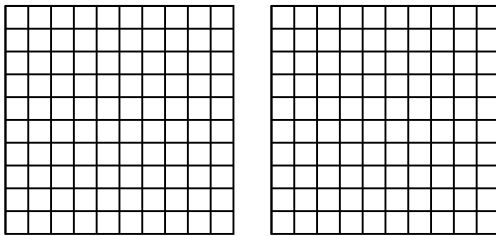
3)  $4 \times 0,51 =$



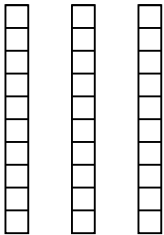
4)  $13 \times 0,8 =$



5)  $2 \times 0,56 =$



6)  $3 \times 0,8 =$



**Risposte**

1. \_\_\_\_\_

2. \_\_\_\_\_

3. \_\_\_\_\_

4. \_\_\_\_\_

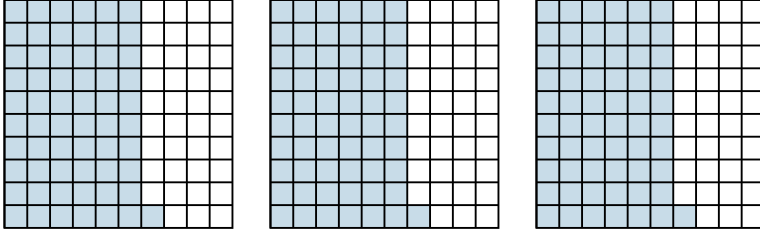
5. \_\_\_\_\_

6. \_\_\_\_\_

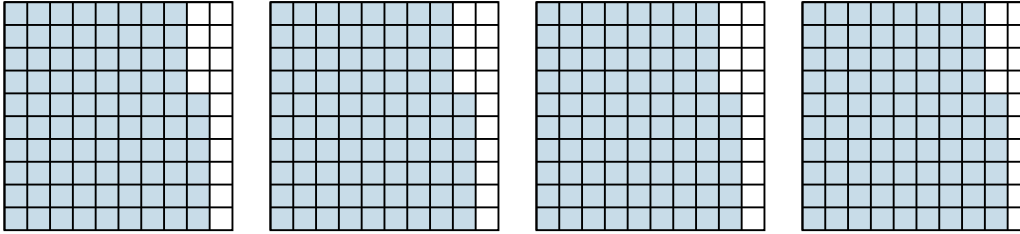


Usa il modello visivo per risolvere ogni problema.

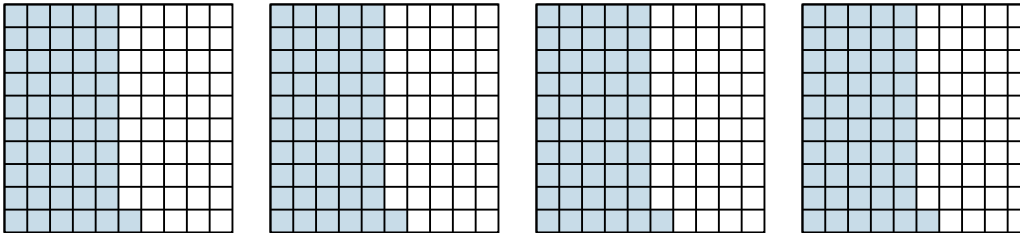
1)  $3 \times 0,61 =$



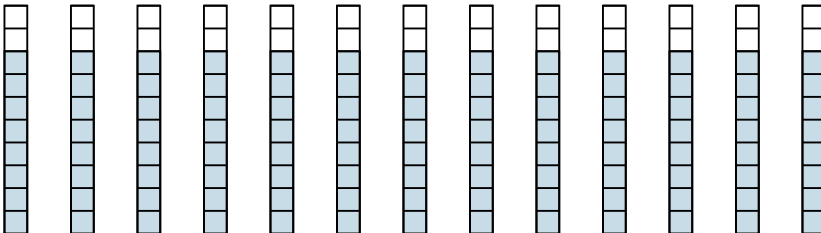
2)  $4 \times 0,86 =$



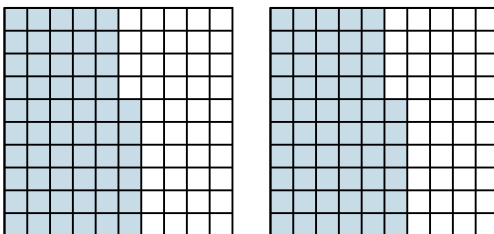
3)  $4 \times 0,51 =$



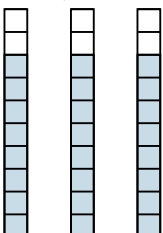
4)  $13 \times 0,8 =$



5)  $2 \times 0,56 =$



6)  $3 \times 0,8 =$



**Risposte**

1.  $\frac{183}{100} = 1,83$

2.  $\frac{344}{100} = 3,44$

3.  $\frac{204}{100} = 2,04$

4.  $\frac{104}{10} = 10,4$

5.  $\frac{112}{100} = 1,12$

6.  $\frac{24}{10} = 2,4$