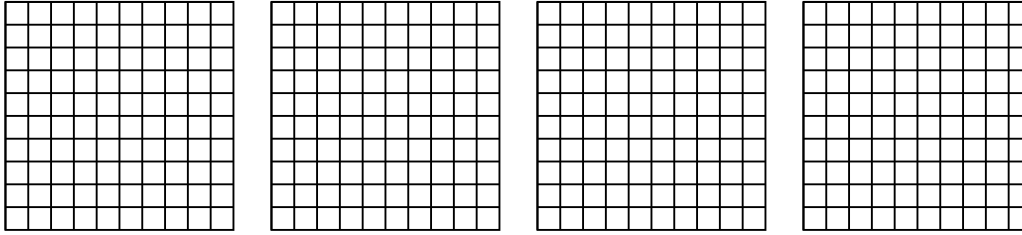


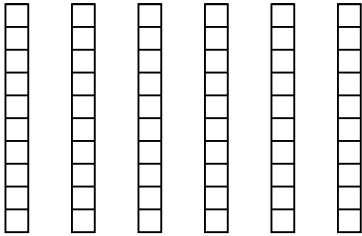


Usa il modello visivo per risolvere ogni problema.

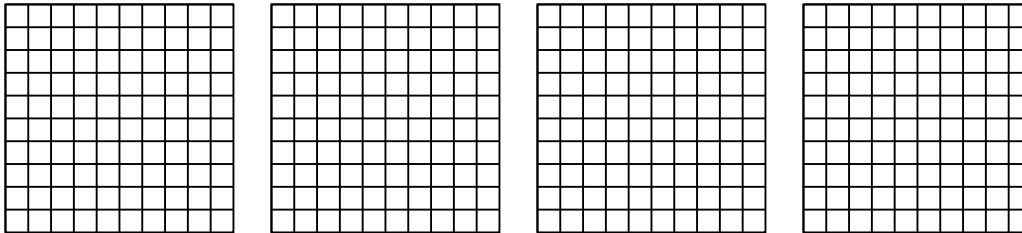
1) $4 \times 0,82 =$



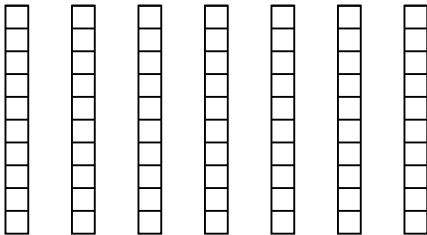
2) $6 \times 0,6 =$



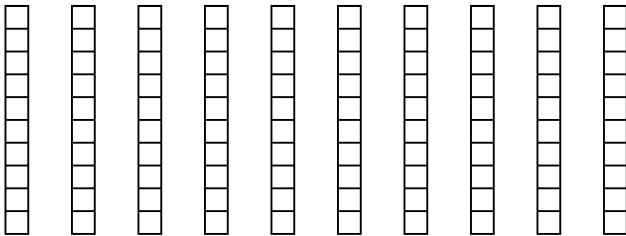
3) $4 \times 0,75 =$




4) $7 \times 0,1 =$



5) $10 \times 0,1 =$



6) $3 \times 0,90 =$



Risposte

1. _____

2. _____

3. _____

4. _____

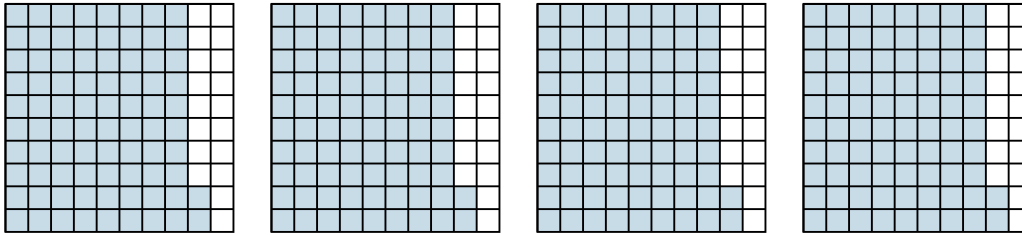
5. _____

6. _____

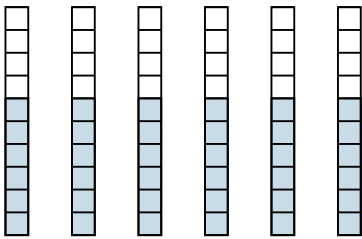


Usa il modello visivo per risolvere ogni problema.

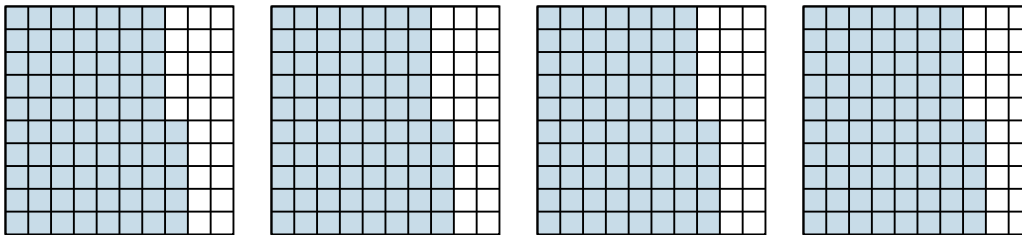
1) $4 \times 0,82 =$



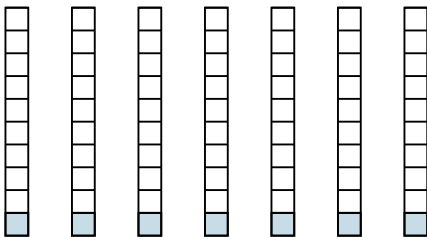
2) $6 \times 0,6 =$



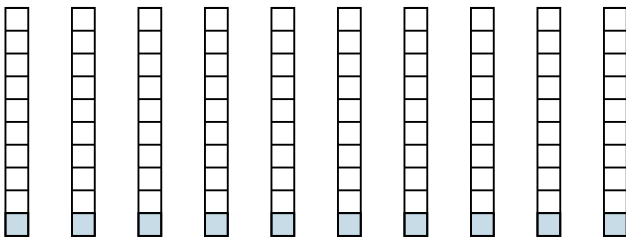
3) $4 \times 0,75 =$



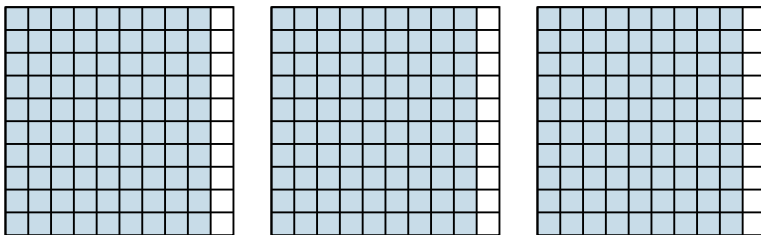
4) $7 \times 0,1 =$



5) $10 \times 0,1 =$



6) $3 \times 0,90 =$



Risposte

1. $\frac{328}{100} = 3,28$

2. $\frac{36}{10} = 3,6$

3. $\frac{300}{100} = 3$

4. $\frac{7}{10} = 0,7$

5. $\frac{10}{10} = 1$

6. $\frac{270}{100} = 2,7$