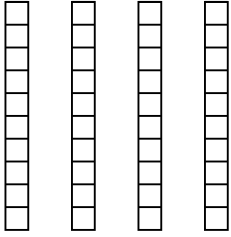


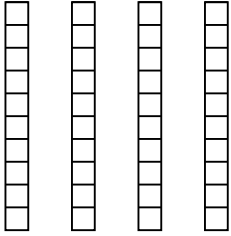


Usa il modello visivo per risolvere ogni problema.

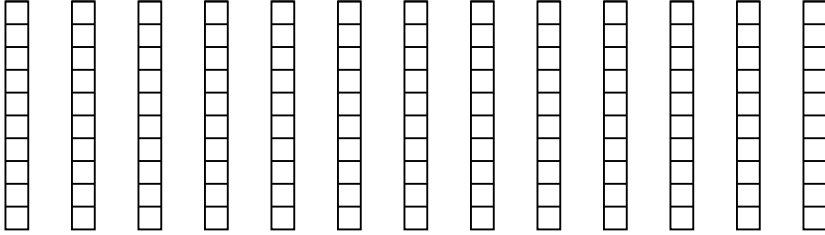
1) $4 \times 0,8 =$



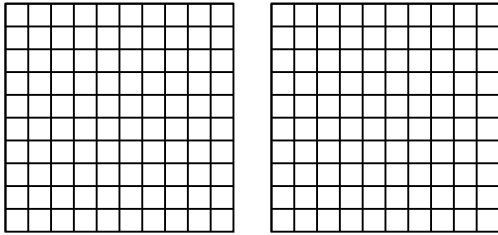
2) $4 \times 0,8 =$



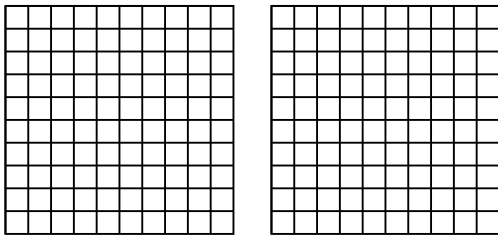
3) $13 \times 0,3 =$



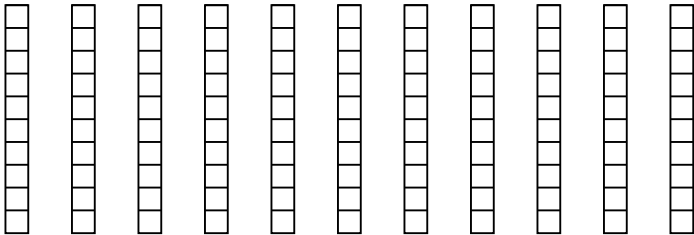
4) $2 \times 0,71 =$



5) $2 \times 0,75 =$



6) $11 \times 0,6 =$



Risposte

1. _____

2. _____

3. _____

4. _____

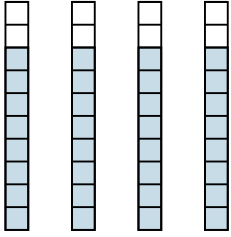
5. _____

6. _____

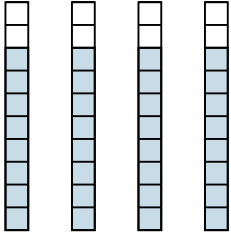


Usa il modello visivo per risolvere ogni problema.

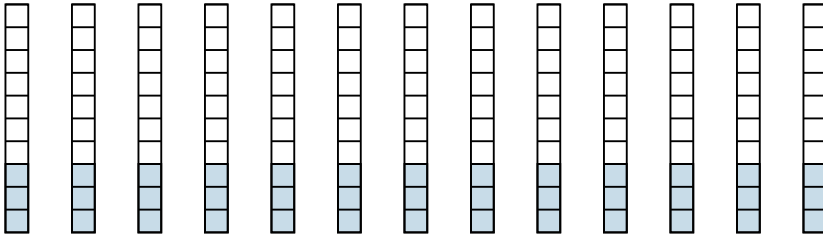
1) $4 \times 0,8 =$



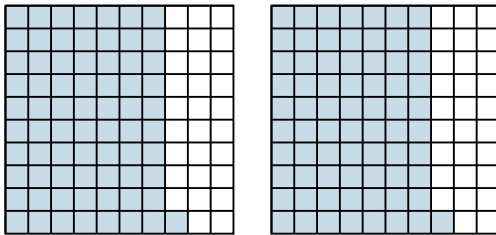
2) $4 \times 0,8 =$



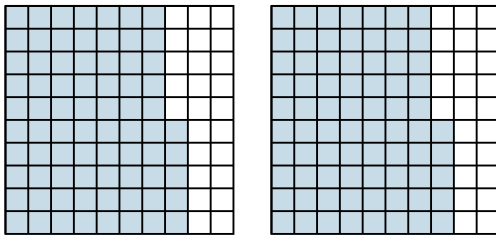
3) $13 \times 0,3 =$



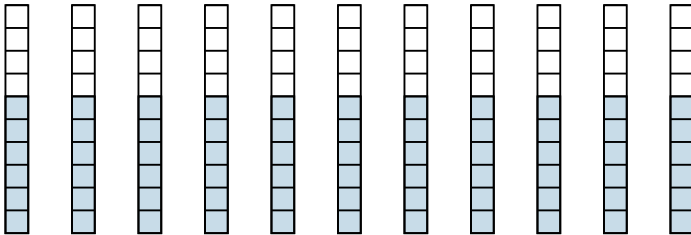
4) $2 \times 0,71 =$



5) $2 \times 0,75 =$



6) $11 \times 0,6 =$



Risposte

1. $\frac{32}{10} = 3,2$

2. $\frac{32}{10} = 3,2$

3. $\frac{39}{10} = 3,9$

4. $\frac{142}{100} = 1,42$

5. $\frac{150}{100} = 1,5$

6. $\frac{66}{10} = 6,6$