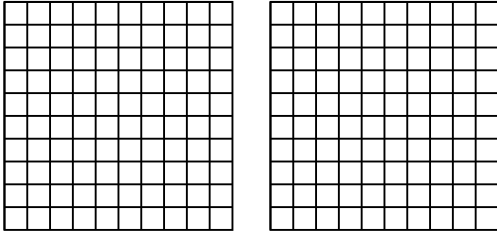


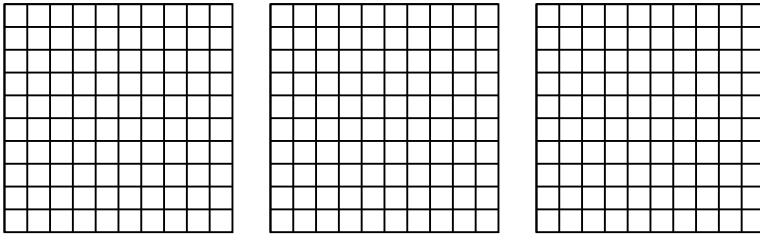


Usa il modello visivo per risolvere ogni problema.


1) $2 \times 0,16 =$



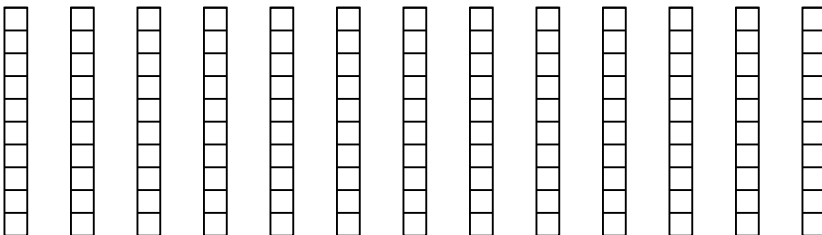
2) $3 \times 0,34 =$



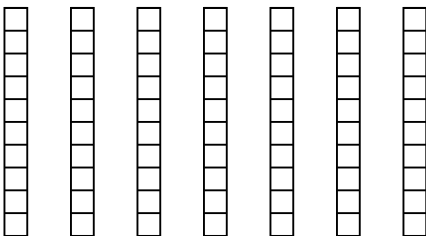
3) $3 \times 0,35 =$



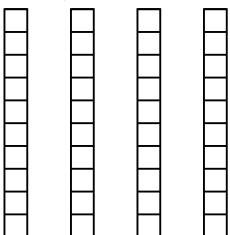
4) $13 \times 0,1 =$



5) $7 \times 0,3 =$



6) $4 \times 0,8 =$



Risposte

1. _____

2. _____

3. _____

4. _____

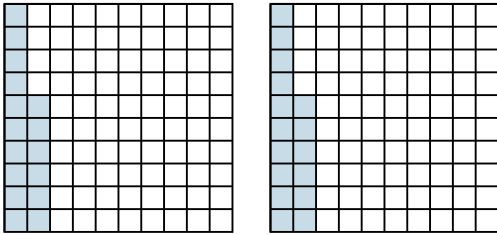
5. _____

6. _____

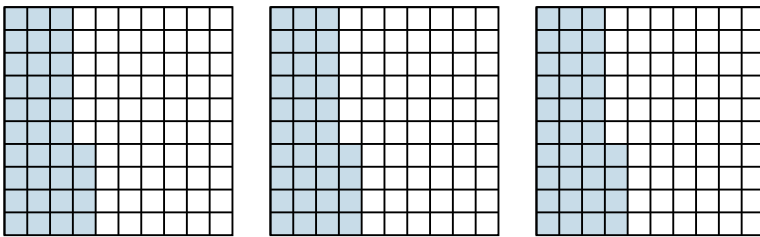


Usa il modello visivo per risolvere ogni problema.

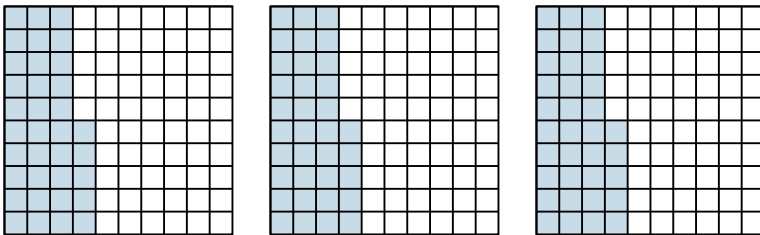
1) $2 \times 0,16 =$



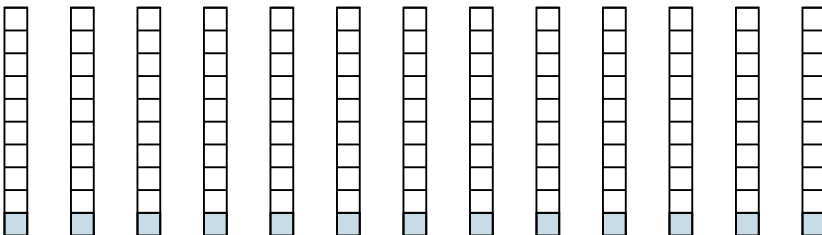
2) $3 \times 0,34 =$



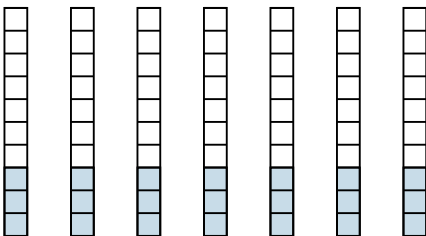
3) $3 \times 0,35 =$



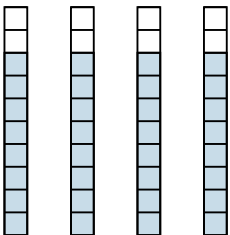
4) $13 \times 0,1 =$



5) $7 \times 0,3 =$



6) $4 \times 0,8 =$



Risposte

1. $\frac{32}{100} = 0,32$

2. $\frac{102}{100} = 1,02$

3. $\frac{105}{100} = 1,05$

4. $\frac{13}{10} = 1,3$

5. $\frac{21}{10} = 2,1$

6. $\frac{32}{10} = 3,2$