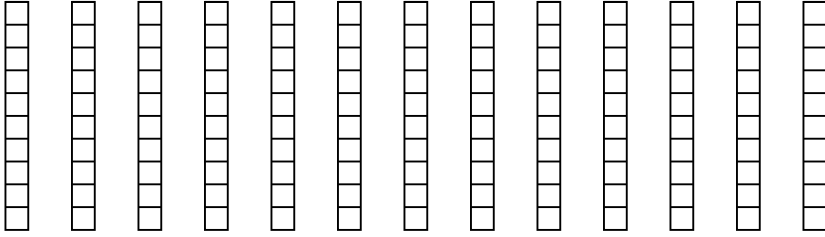


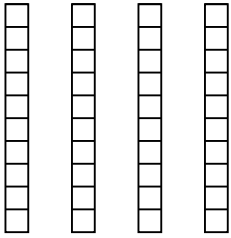


Usa il modello visivo per risolvere ogni problema.

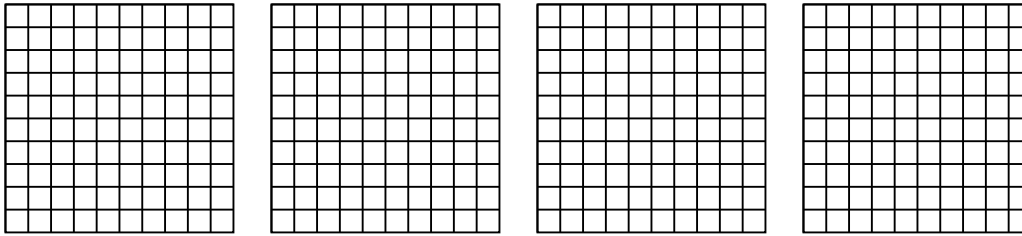
1) $13 \times 0,8 =$



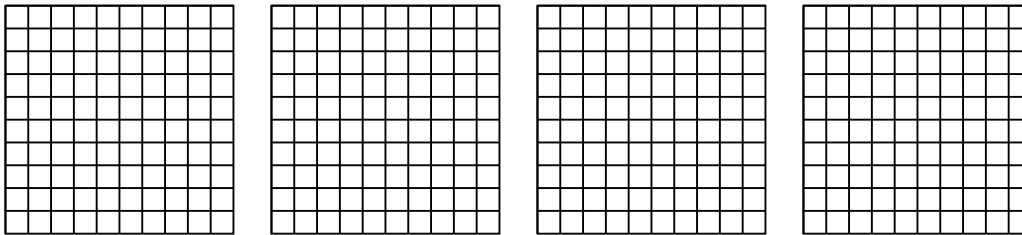
2) $4 \times 0,8 =$



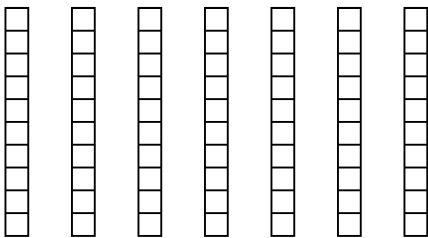
3) $4 \times 0,30 =$



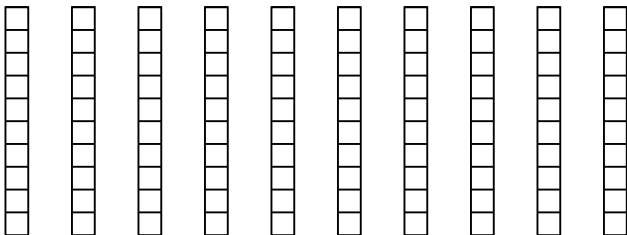
4) $4 \times 0,46 =$



5) $7 \times 0,5 =$



6) $10 \times 0,2 =$



Risposte

1. _____

2. _____

3. _____

4. _____

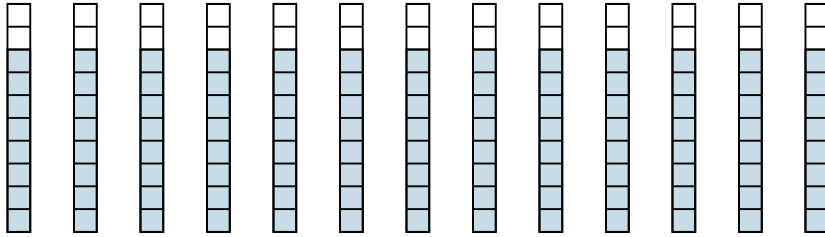
5. _____

6. _____

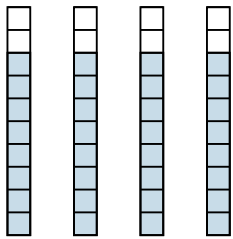


Usa il modello visivo per risolvere ogni problema.

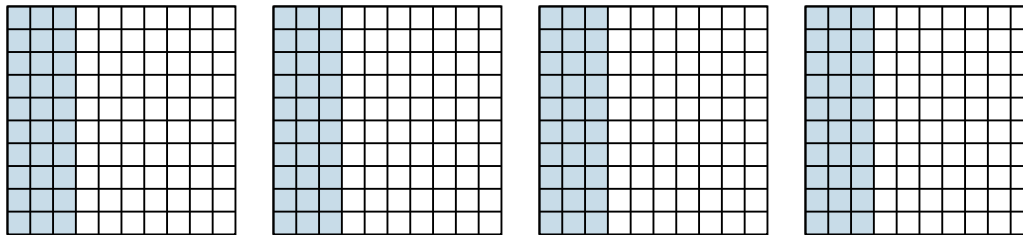
1) $13 \times 0,8 =$



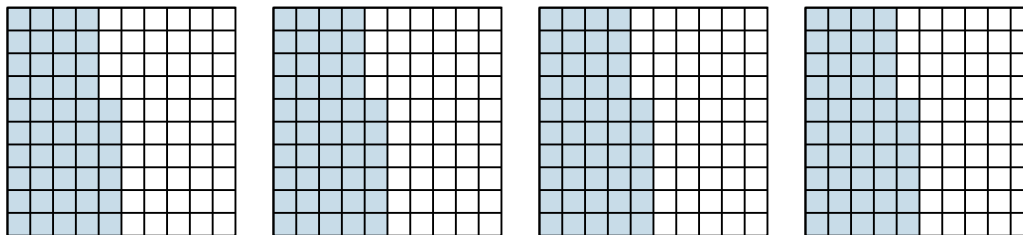
2) $4 \times 0,8 =$



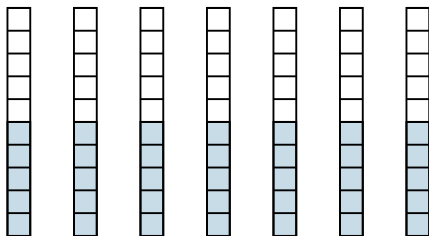
3) $4 \times 0,30 =$



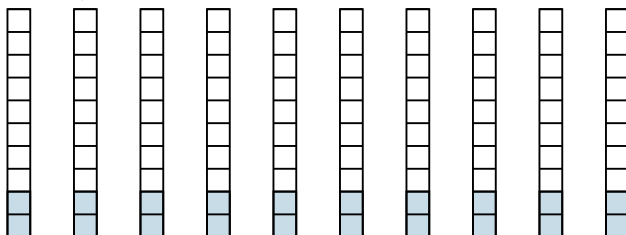
4) $4 \times 0,46 =$



5) $7 \times 0,5 =$



6) $10 \times 0,2 =$



Risposte

1. $\frac{104}{10} = 10,4$

2. $\frac{32}{10} = 3,2$

3. $\frac{120}{100} = 1,2$

4. $\frac{184}{100} = 1,84$

5. $\frac{35}{10} = 3,5$

6. $\frac{20}{10} = 2$