





Usa il modello visivo per risolvere ogni problema.


1)  $0,1 \times 0,4 =$




2)  $0,5 \times 0,1 =$




3)  $0,8 \times 0,1 =$



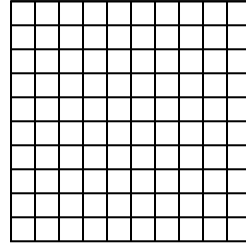
4)  $0,1 \times 0,1 =$




5)  $0,1 \times 0,9 =$




6)  $0,9 \times 0,2 =$



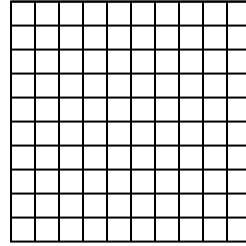
7)  $0,4 \times 0,4 =$




8)  $0,7 \times 0,8 =$



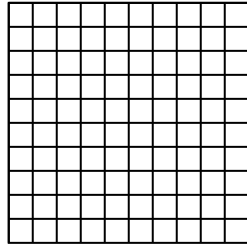
9)  $0,2 \times 0,6 =$



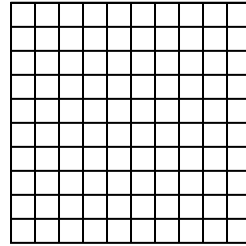
10)  $0,3 \times 0,8 =$




11)  $0,1 \times 0,2 =$



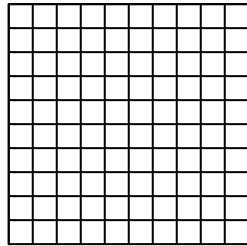
12)  $0,2 \times 0,6 =$



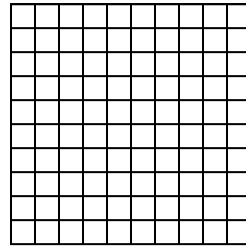
13)  $0,3 \times 0,2 =$



14)  $0,3 \times 0,9 =$



15)  $0,5 \times 0,2 =$



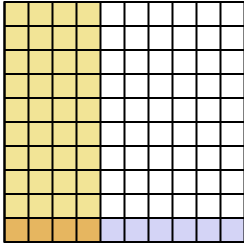
**Risposte**

1. \_\_\_\_\_
2. \_\_\_\_\_
3. \_\_\_\_\_
4. \_\_\_\_\_
5. \_\_\_\_\_
6. \_\_\_\_\_
7. \_\_\_\_\_
8. \_\_\_\_\_
9. \_\_\_\_\_
10. \_\_\_\_\_
11. \_\_\_\_\_
12. \_\_\_\_\_
13. \_\_\_\_\_
14. \_\_\_\_\_
15. \_\_\_\_\_

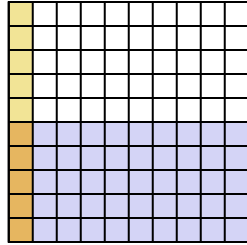


Usa il modello visivo per risolvere ogni problema.

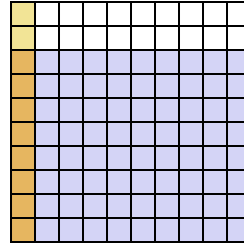
1)  $0,1 \times 0,4 =$



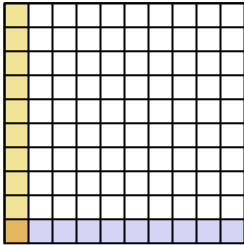
2)  $0,5 \times 0,1 =$



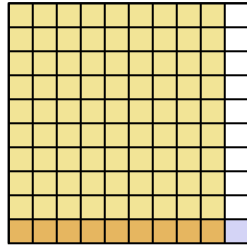
3)  $0,8 \times 0,1 =$



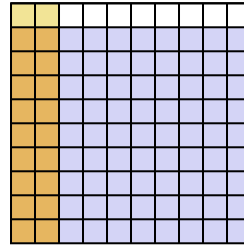
4)  $0,1 \times 0,1 =$



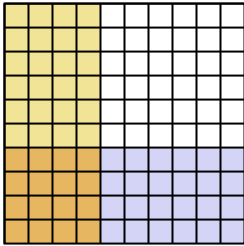
5)  $0,1 \times 0,9 =$



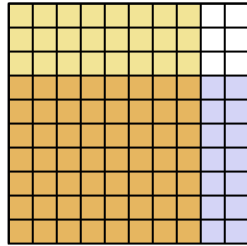
6)  $0,9 \times 0,2 =$



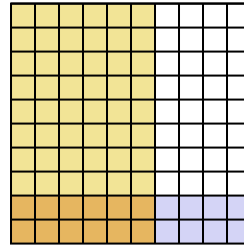
7)  $0,4 \times 0,4 =$



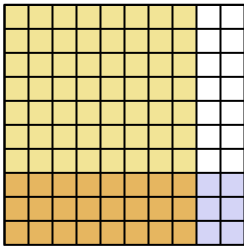
8)  $0,7 \times 0,8 =$



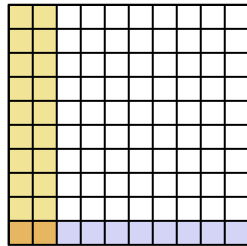
9)  $0,2 \times 0,6 =$



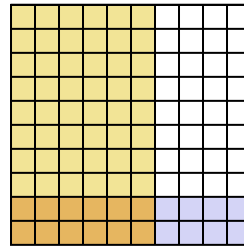
10)  $0,3 \times 0,8 =$



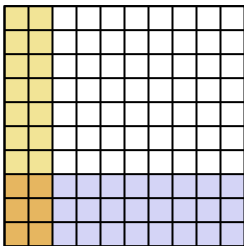
11)  $0,1 \times 0,2 =$



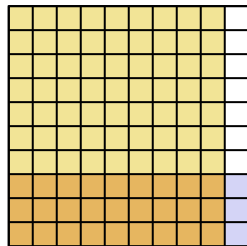
12)  $0,2 \times 0,6 =$



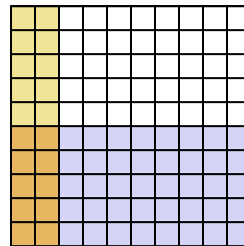
13)  $0,3 \times 0,2 =$



14)  $0,3 \times 0,9 =$



15)  $0,5 \times 0,2 =$



**Risposte**

1.  $\frac{4}{100} = 0,04$

2.  $\frac{5}{100} = 0,05$

3.  $\frac{8}{100} = 0,08$

4.  $\frac{1}{100} = 0,01$

5.  $\frac{9}{100} = 0,09$

6.  $\frac{18}{100} = 0,18$

7.  $\frac{16}{100} = 0,16$

8.  $\frac{56}{100} = 0,56$

9.  $\frac{12}{100} = 0,12$

10.  $\frac{24}{100} = 0,24$

11.  $\frac{2}{100} = 0,02$

12.  $\frac{12}{100} = 0,12$

13.  $\frac{6}{100} = 0,06$

14.  $\frac{27}{100} = 0,27$

15.  $\frac{10}{100} = 0,1$