





Usa il modello visivo per risolvere ogni problema.


1) $0,6 \times 0,3 =$




2) $0,2 \times 0,9 =$




3) $0,9 \times 0,9 =$




4) $0,1 \times 0,7 =$




5) $0,3 \times 0,3 =$




6) $0,8 \times 0,1 =$




7) $0,3 \times 0,6 =$




8) $0,9 \times 0,4 =$




9) $0,1 \times 0,4 =$




10) $0,4 \times 0,7 =$




11) $0,6 \times 0,8 =$




12) $0,6 \times 0,2 =$




13) $0,8 \times 0,4 =$



14) $0,5 \times 0,7 =$



15) $0,7 \times 0,4 =$

**Risposte**

1. _____

2. _____

3. _____

4. _____

5. _____

6. _____

7. _____

8. _____

9. _____

10. _____

11. _____

12. _____

13. _____

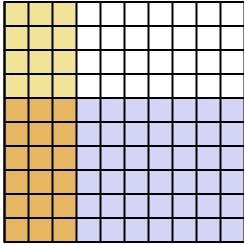
14. _____

15. _____

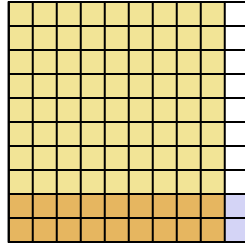


Usa il modello visivo per risolvere ogni problema.

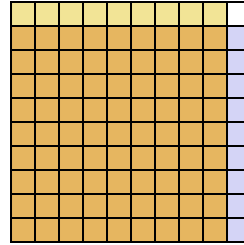
1) $0,6 \times 0,3 =$



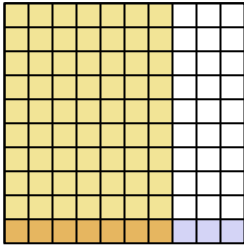
2) $0,2 \times 0,9 =$



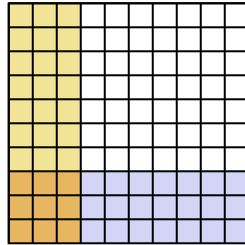
3) $0,9 \times 0,9 =$



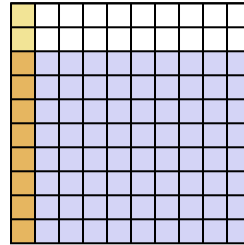
4) $0,1 \times 0,7 =$



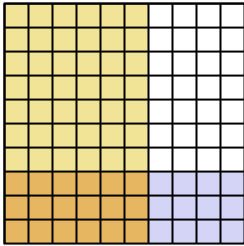
5) $0,3 \times 0,3 =$



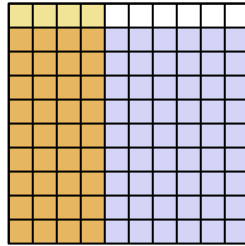
6) $0,8 \times 0,1 =$



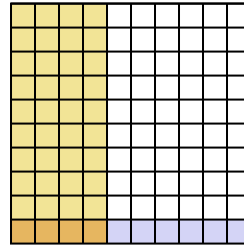
7) $0,3 \times 0,6 =$



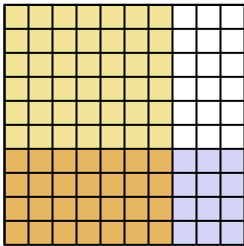
8) $0,9 \times 0,4 =$



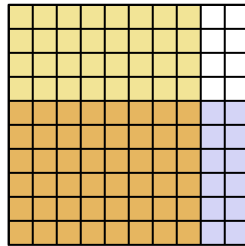
9) $0,1 \times 0,4 =$



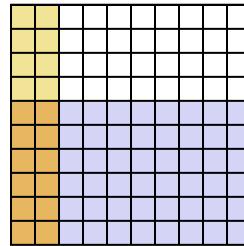
10) $0,4 \times 0,7 =$



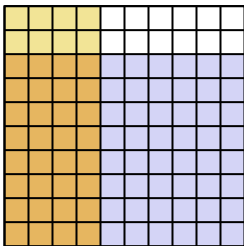
11) $0,6 \times 0,8 =$



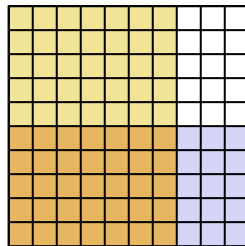
12) $0,6 \times 0,2 =$



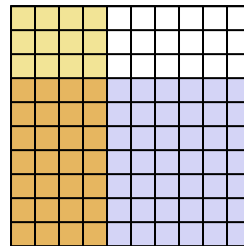
13) $0,8 \times 0,4 =$



14) $0,5 \times 0,7 =$



15) $0,7 \times 0,4 =$



Risposte

1. $\frac{18}{100} = 0,18$

2. $\frac{18}{100} = 0,18$

3. $\frac{81}{100} = 0,81$

4. $\frac{7}{100} = 0,07$

5. $\frac{9}{100} = 0,09$

6. $\frac{8}{100} = 0,08$

7. $\frac{18}{100} = 0,18$

8. $\frac{36}{100} = 0,36$

9. $\frac{4}{100} = 0,04$

10. $\frac{28}{100} = 0,28$

11. $\frac{48}{100} = 0,48$

12. $\frac{12}{100} = 0,12$

13. $\frac{32}{100} = 0,32$

14. $\frac{35}{100} = 0,35$

15. $\frac{28}{100} = 0,28$