





Usa il modello visivo per risolvere ogni problema.


1) $0,7 \times 0,7 =$




2) $0,4 \times 0,5 =$




3) $0,6 \times 0,4 =$




4) $0,6 \times 0,8 =$




5) $0,1 \times 0,1 =$




6) $0,2 \times 0,4 =$




7) $0,6 \times 0,5 =$




8) $0,6 \times 0,5 =$



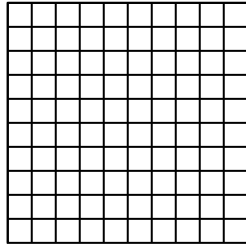
9) $0,5 \times 0,6 =$




10) $0,9 \times 0,1 =$




11) $0,6 \times 0,2 =$



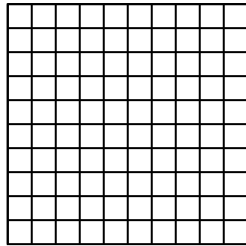
12) $0,5 \times 0,2 =$




13) $0,1 \times 0,1 =$



14) $0,3 \times 0,9 =$



15) $0,4 \times 0,1 =$



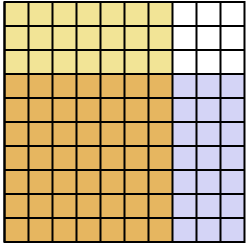
Risposte

- 1. _____
- 2. _____
- 3. _____
- 4. _____
- 5. _____
- 6. _____
- 7. _____
- 8. _____
- 9. _____
- 10. _____
- 11. _____
- 12. _____
- 13. _____
- 14. _____
- 15. _____

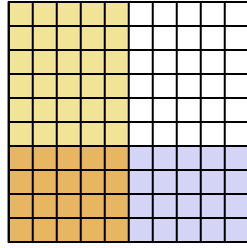


Usa il modello visivo per risolvere ogni problema.

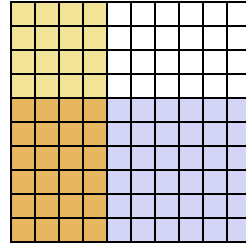
1) $0,7 \times 0,7 =$



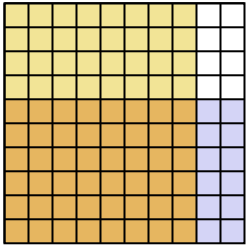
2) $0,4 \times 0,5 =$



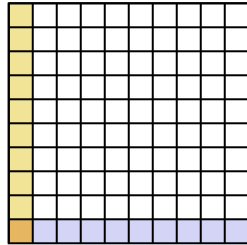
3) $0,6 \times 0,4 =$



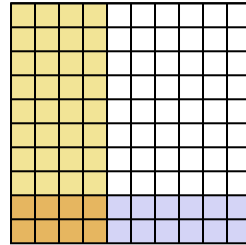
4) $0,6 \times 0,8 =$



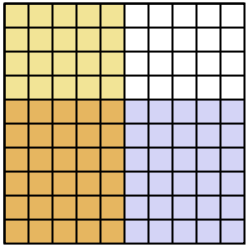
5) $0,1 \times 0,1 =$



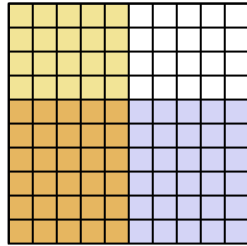
6) $0,2 \times 0,4 =$



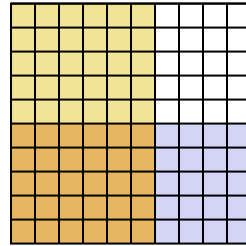
7) $0,6 \times 0,5 =$



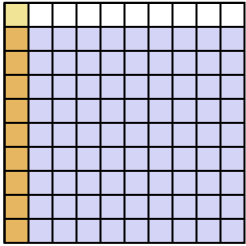
8) $0,6 \times 0,5 =$



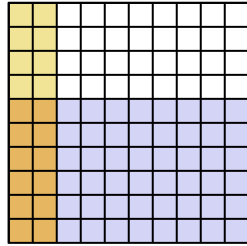
9) $0,5 \times 0,6 =$



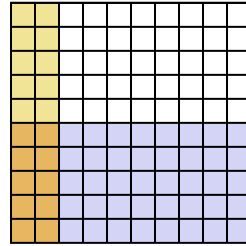
10) $0,9 \times 0,1 =$



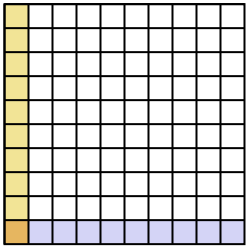
11) $0,6 \times 0,2 =$



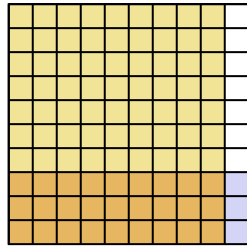
12) $0,5 \times 0,2 =$



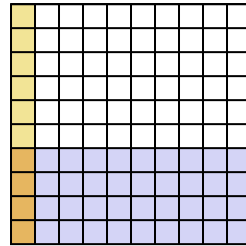
13) $0,1 \times 0,1 =$



14) $0,3 \times 0,9 =$



15) $0,4 \times 0,1 =$



Risposte

1. $\frac{49}{100} = 0,49$

2. $\frac{20}{100} = 0,2$

3. $\frac{24}{100} = 0,24$

4. $\frac{48}{100} = 0,48$

5. $\frac{1}{100} = 0,01$

6. $\frac{8}{100} = 0,08$

7. $\frac{30}{100} = 0,3$

8. $\frac{30}{100} = 0,3$

9. $\frac{30}{100} = 0,3$

10. $\frac{9}{100} = 0,09$

11. $\frac{12}{100} = 0,12$

12. $\frac{10}{100} = 0,1$

13. $\frac{1}{100} = 0,01$

14. $\frac{27}{100} = 0,27$

15. $\frac{4}{100} = 0,04$