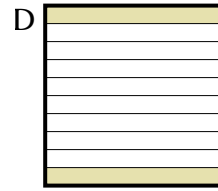
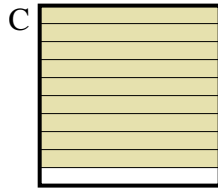
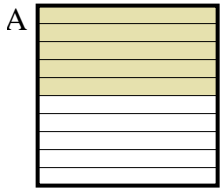




Determina quale lettera risponde correttamente alla domanda.

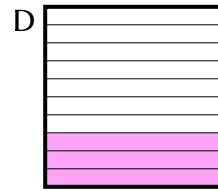
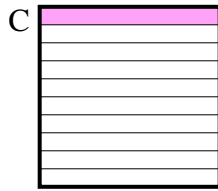
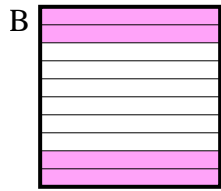
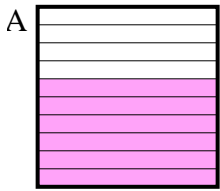
Risposte

1) Quale griglia 10×1 è colorata in modo da rappresentare un numero decimale, che sommato a 0,1 fa 1,00?



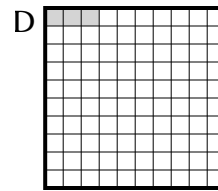
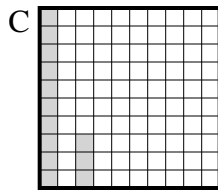
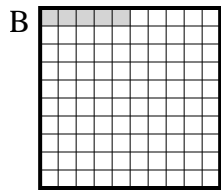
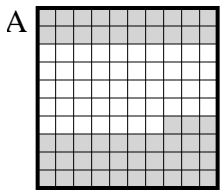
1. _____

2) Quale griglia 10×1 è colorata in modo da rappresentare un numero decimale, che sommato a 0,4 fa 1,00?



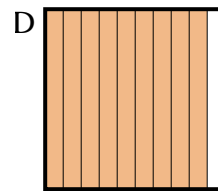
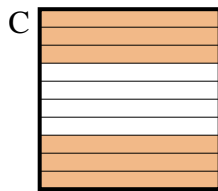
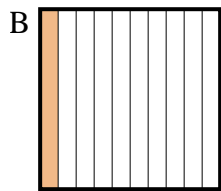
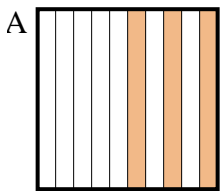
2. _____

3) Quale griglia 10×10 è colorata in modo da rappresentare un numero decimale, che sommato a 0,97 fa 1,00?



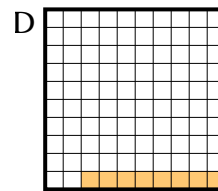
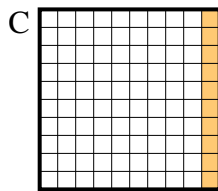
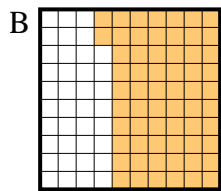
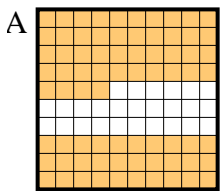
3. _____

4) Quale griglia 10×1 è colorata in modo da rappresentare un numero decimale, che sommato a 0,9 fa 1,00?



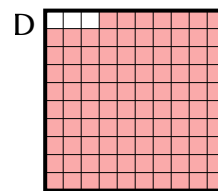
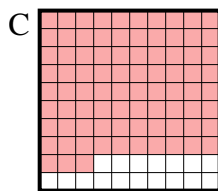
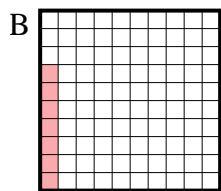
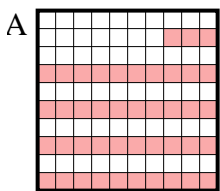
4. _____

5) Quale griglia 10×10 è colorata in modo da rappresentare un numero decimale, che sommato a 0,92 fa 1,00?



5. _____

6) Quale griglia 10×10 è colorata in modo da rappresentare un numero decimale, che sommato a 0,93 fa 1,00?

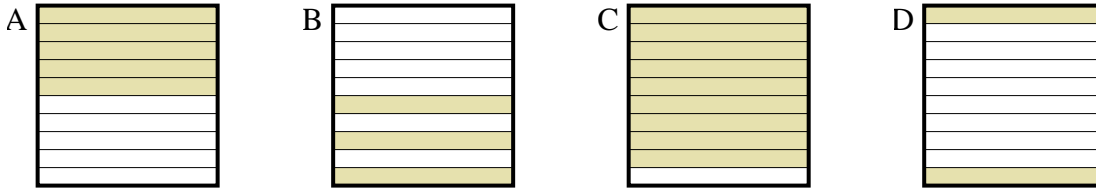


6. _____

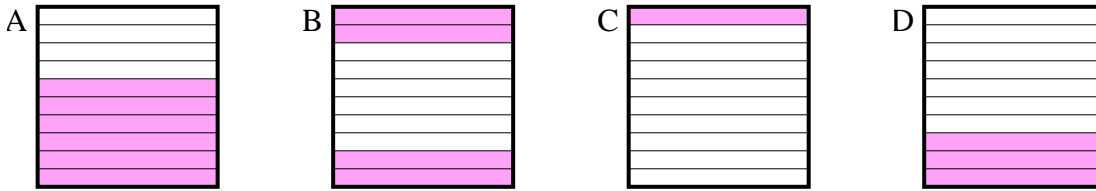


Determina quale lettera risponde correttamente alla domanda.

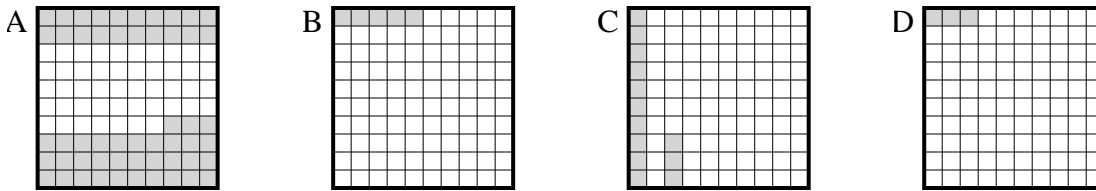
1) Quale griglia 10×1 è colorata in modo da rappresentare un numero decimale, che sommato a 0,1 fa 1,00?



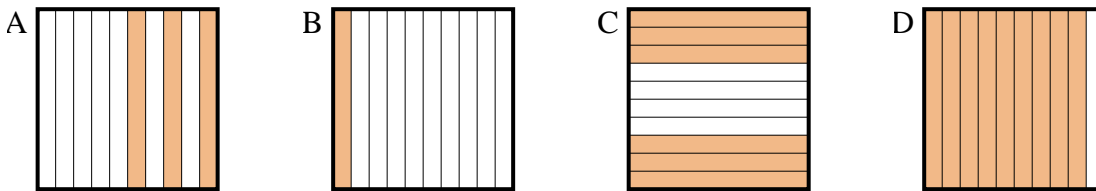
2) Quale griglia 10×1 è colorata in modo da rappresentare un numero decimale, che sommato a 0,4 fa 1,00?



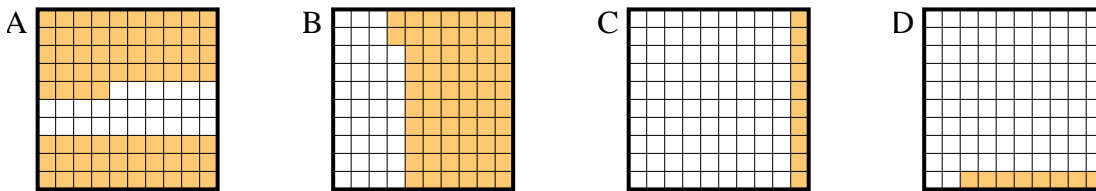
3) Quale griglia 10×10 è colorata in modo da rappresentare un numero decimale, che sommato a 0,97 fa 1,00?



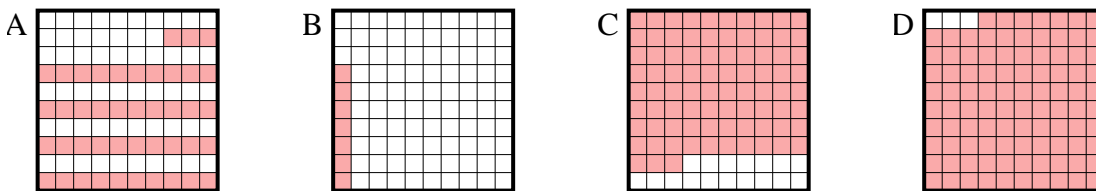
4) Quale griglia 10×1 è colorata in modo da rappresentare un numero decimale, che sommato a 0,9 fa 1,00?



5) Quale griglia 10×10 è colorata in modo da rappresentare un numero decimale, che sommato a 0,92 fa 1,00?



6) Quale griglia 10×10 è colorata in modo da rappresentare un numero decimale, che sommato a 0,93 fa 1,00?



Risposte

1. **C**
2. **A**
3. **D**
4. **B**
5. **D**
6. **B**