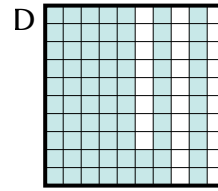
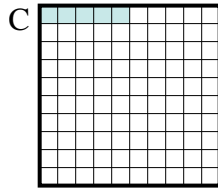
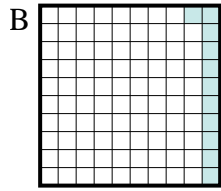
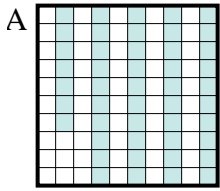




Determina quale lettera risponde correttamente alla domanda.

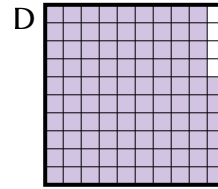
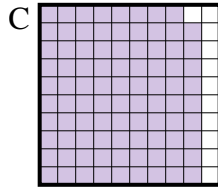
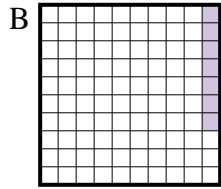
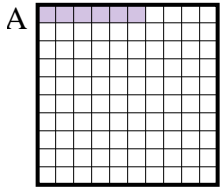
Risposte

1) Quale griglia 10×10 è colorata in modo da rappresentare un numero decimale, che sommato a 0,95 fa 1,00?



1. _____

2) Quale griglia 10×10 è colorata in modo da rappresentare un numero decimale, che sommato a 0,93 fa 1,00?



2. _____


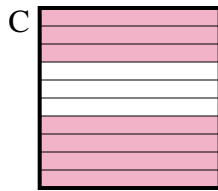
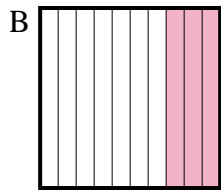
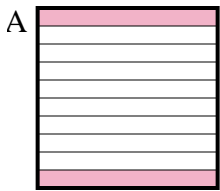
3. _____

4. _____

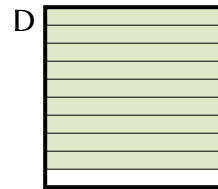
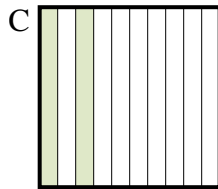

5. _____

6. _____

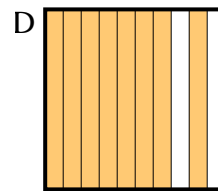
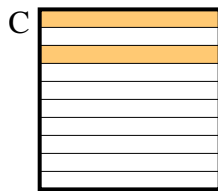
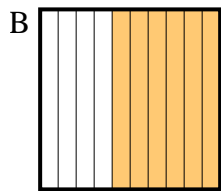
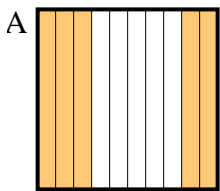
3) Quale griglia 10×1 è colorata in modo da rappresentare un numero decimale, che sommato a 0,3 fa 1,00?



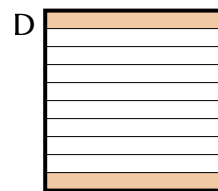
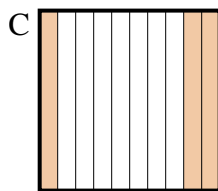
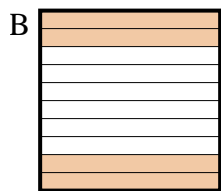
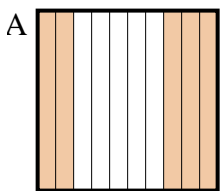
4) Quale griglia 10×1 è colorata in modo da rappresentare un numero decimale, che sommato a 0,9 fa 1,00?



5) Quale griglia 10×1 è colorata in modo da rappresentare un numero decimale, che sommato a 0,5 fa 1,00?



6) Quale griglia 10×1 è colorata in modo da rappresentare un numero decimale, che sommato a 0,7 fa 1,00?

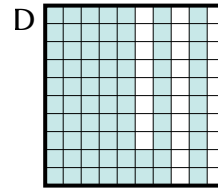
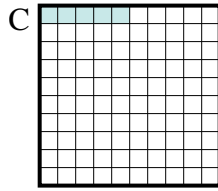
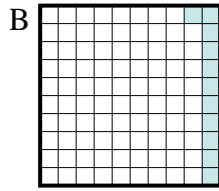
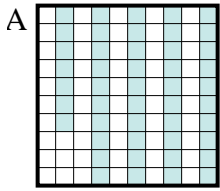




Determina quale lettera risponde correttamente alla domanda.

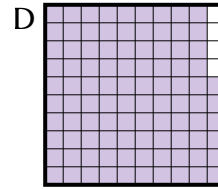
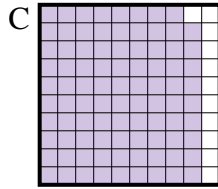
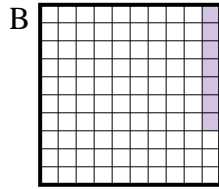
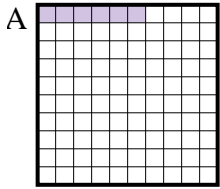
Risposte

1) Quale griglia 10×10 è colorata in modo da rappresentare un numero decimale, che sommato a 0,95 fa 1,00?




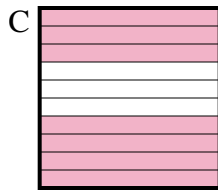
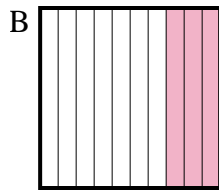
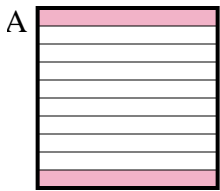
1. **C**

2) Quale griglia 10×10 è colorata in modo da rappresentare un numero decimale, che sommato a 0,93 fa 1,00?



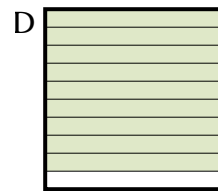
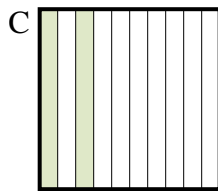

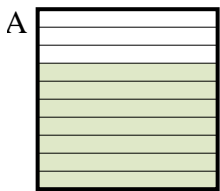
2. **B**

3) Quale griglia 10×1 è colorata in modo da rappresentare un numero decimale, che sommato a 0,3 fa 1,00?



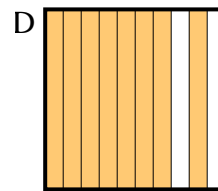
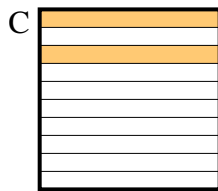
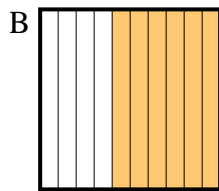
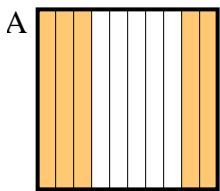
3. **C**

4) Quale griglia 10×1 è colorata in modo da rappresentare un numero decimale, che sommato a 0,9 fa 1,00?



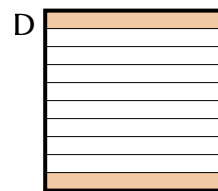
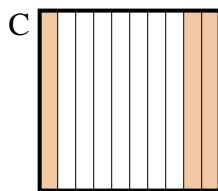
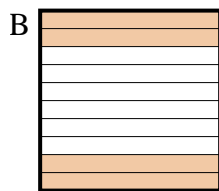
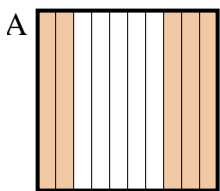
4. **B**

5) Quale griglia 10×1 è colorata in modo da rappresentare un numero decimale, che sommato a 0,5 fa 1,00?



5. **A**

6) Quale griglia 10×1 è colorata in modo da rappresentare un numero decimale, che sommato a 0,7 fa 1,00?



6. **C**