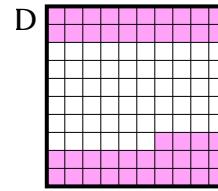
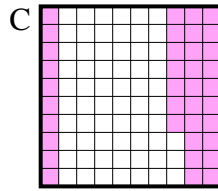
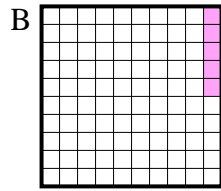
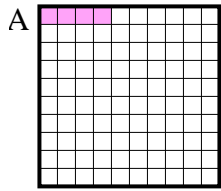




**Determina quale lettera risponde correttamente alla domanda.**

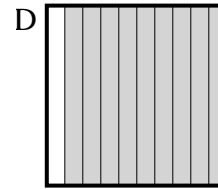
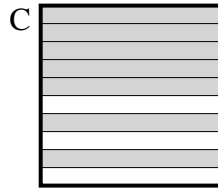
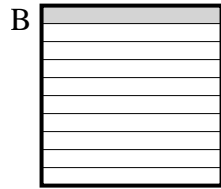
**Risposte**

1) Quale griglia  $10 \times 10$  è colorata in modo da rappresentare un numero decimale, che sommato a 0,96 fa 1,00?



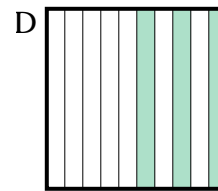
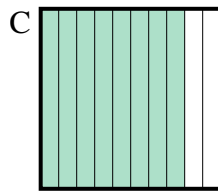
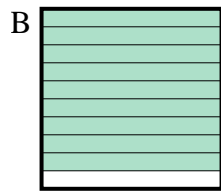
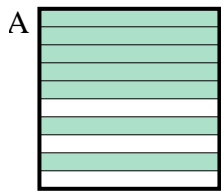
1. \_\_\_\_\_

2) Quale griglia  $10 \times 1$  è colorata in modo da rappresentare un numero decimale, che sommato a 0,4 fa 1,00?



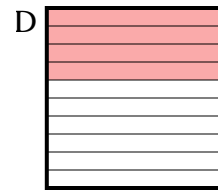
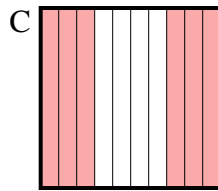

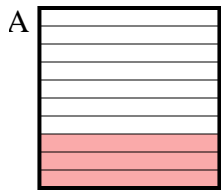
2. \_\_\_\_\_

3) Quale griglia  $10 \times 1$  è colorata in modo da rappresentare un numero decimale, che sommato a 0,2 fa 1,00?



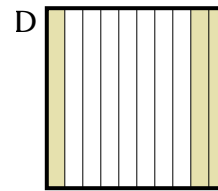
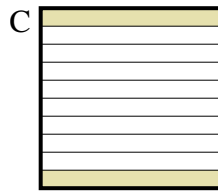
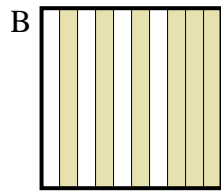
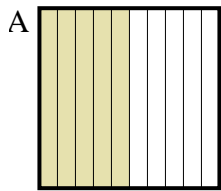
3. \_\_\_\_\_

4) Quale griglia  $10 \times 1$  è colorata in modo da rappresentare un numero decimale, che sommato a 0,6 fa 1,00?



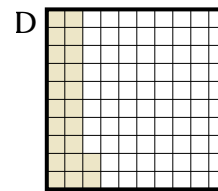
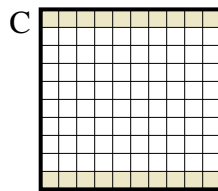
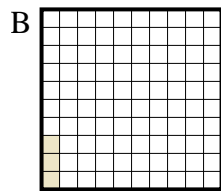
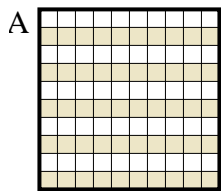
4. \_\_\_\_\_

5) Quale griglia  $10 \times 1$  è colorata in modo da rappresentare un numero decimale, che sommato a 0,5 fa 1,00?



5. \_\_\_\_\_

6) Quale griglia  $10 \times 10$  è colorata in modo da rappresentare un numero decimale, che sommato a 0,97 fa 1,00?

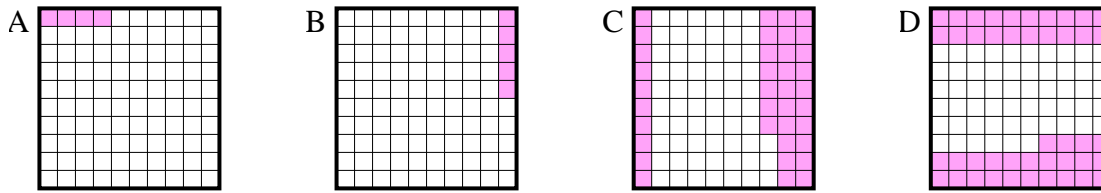


6. \_\_\_\_\_

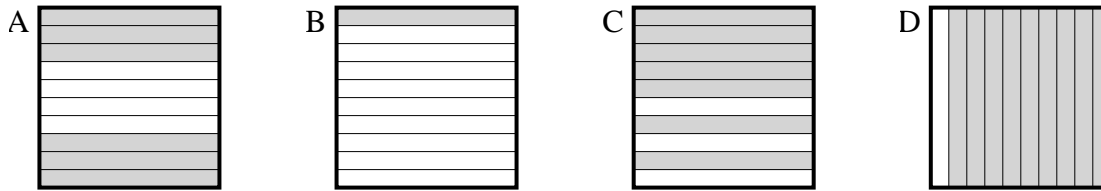


**Determina quale lettera risponde correttamente alla domanda.**

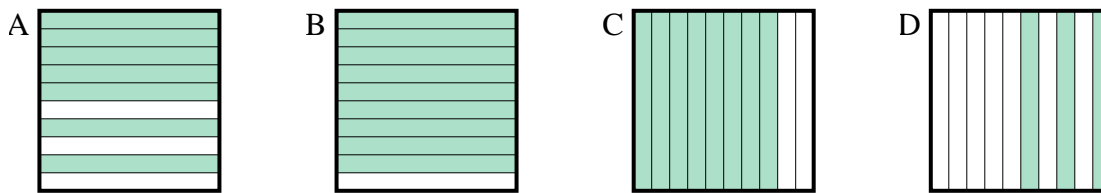
1) Quale griglia  $10 \times 10$  è colorata in modo da rappresentare un numero decimale, che sommato a 0,96 fa 1,00?



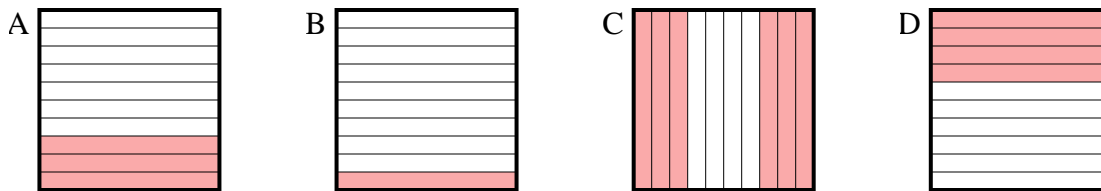
2) Quale griglia  $10 \times 1$  è colorata in modo da rappresentare un numero decimale, che sommato a 0,4 fa 1,00?



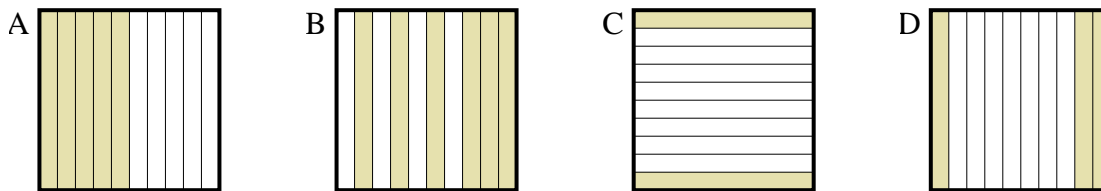
3) Quale griglia  $10 \times 1$  è colorata in modo da rappresentare un numero decimale, che sommato a 0,2 fa 1,00?



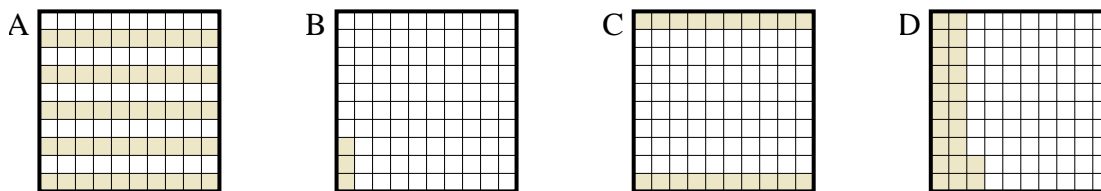
4) Quale griglia  $10 \times 1$  è colorata in modo da rappresentare un numero decimale, che sommato a 0,6 fa 1,00?



5) Quale griglia  $10 \times 1$  è colorata in modo da rappresentare un numero decimale, che sommato a 0,5 fa 1,00?



6) Quale griglia  $10 \times 10$  è colorata in modo da rappresentare un numero decimale, che sommato a 0,97 fa 1,00?



**Risposte**

1.     **A**    

2.     **A**    

3.     **C**    

4.     **D**    

5.     **A**    

6.     **B**