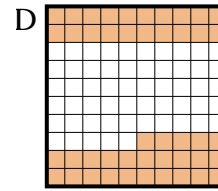
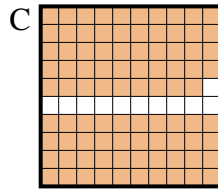
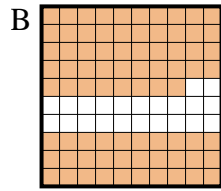
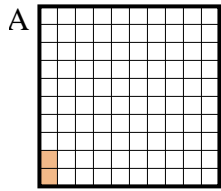




Determina quale lettera risponde correttamente alla domanda.

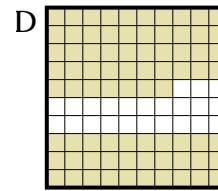
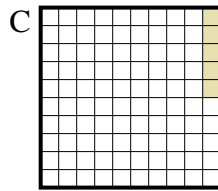
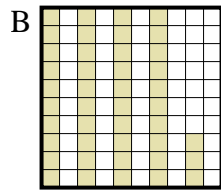
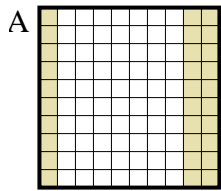
Risposte

1) Quale griglia 10×10 è colorata in modo da rappresentare un numero decimale, che sommato a 0,98 fa 1,00?



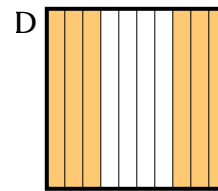
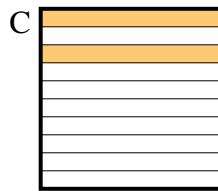
1. _____

2) Quale griglia 10×10 è colorata in modo da rappresentare un numero decimale, che sommato a 0,95 fa 1,00?



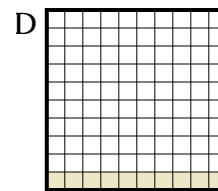
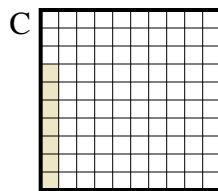
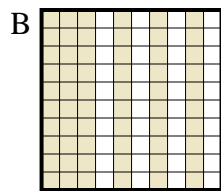
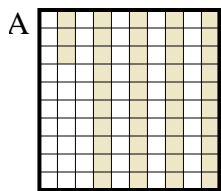
2. _____

3) Quale griglia 10×1 è colorata in modo da rappresentare un numero decimale, che sommato a 0,8 fa 1,00?



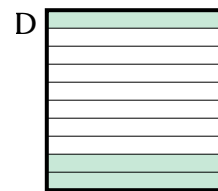

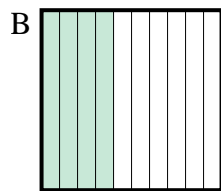
3. _____

4) Quale griglia 10×10 è colorata in modo da rappresentare un numero decimale, che sommato a 0,93 fa 1,00?




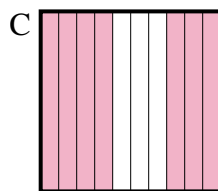
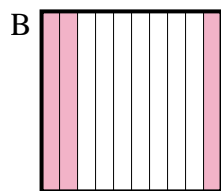
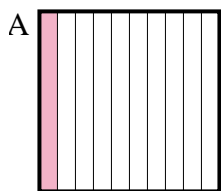
4. _____

5) Quale griglia 10×1 è colorata in modo da rappresentare un numero decimale, che sommato a 0,6 fa 1,00?



5. _____

6) Quale griglia 10×1 è colorata in modo da rappresentare un numero decimale, che sommato a 0,7 fa 1,00?

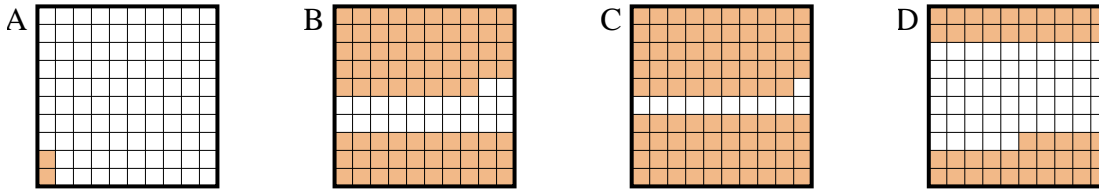


6. _____

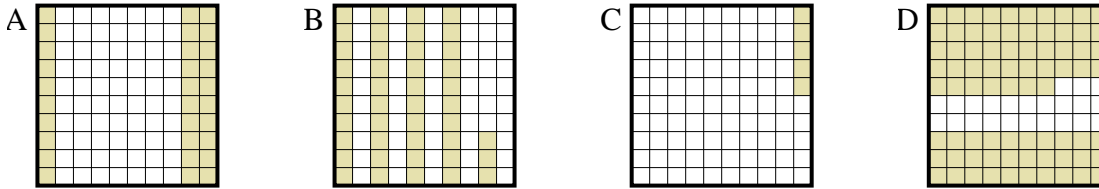


Determina quale lettera risponde correttamente alla domanda.

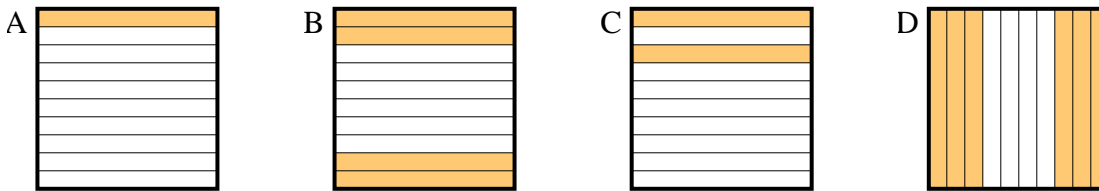
1) Quale griglia 10×10 è colorata in modo da rappresentare un numero decimale, che sommato a 0,98 fa 1,00?



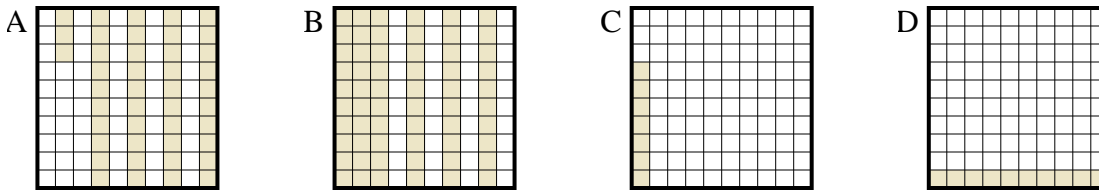
2) Quale griglia 10×10 è colorata in modo da rappresentare un numero decimale, che sommato a 0,95 fa 1,00?



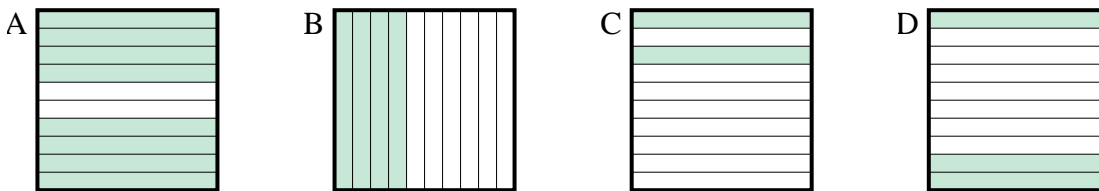
3) Quale griglia 10×1 è colorata in modo da rappresentare un numero decimale, che sommato a 0,8 fa 1,00?



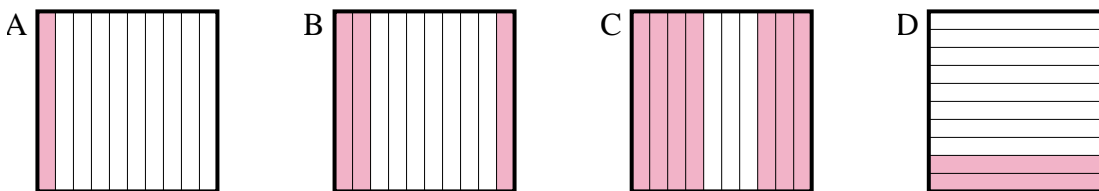
4) Quale griglia 10×10 è colorata in modo da rappresentare un numero decimale, che sommato a 0,93 fa 1,00?



5) Quale griglia 10×1 è colorata in modo da rappresentare un numero decimale, che sommato a 0,6 fa 1,00?



6) Quale griglia 10×1 è colorata in modo da rappresentare un numero decimale, che sommato a 0,7 fa 1,00?



Risposte

1. **A**
2. **C**
3. **C**
4. **C**
5. **B**
6. **B**