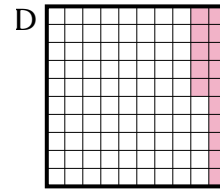
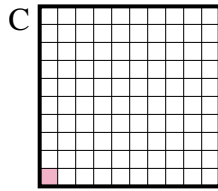
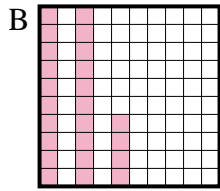
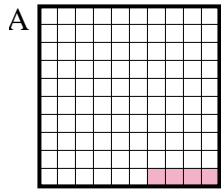




Determina quale lettera risponde correttamente alla domanda.

Risposte

1) Quale griglia 10×10 è colorata in modo da rappresentare un numero decimale, che sommato a 0,96 fa 1,00?

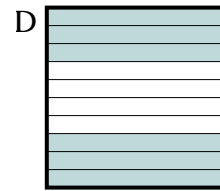
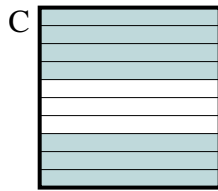
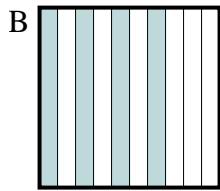
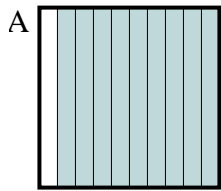


1. _____

2. _____

3. _____

2) Quale griglia 10×1 è colorata in modo da rappresentare un numero decimale, che sommato a 0,3 fa 1,00?

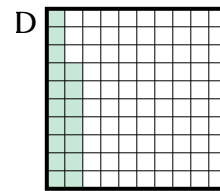
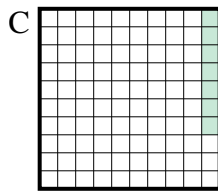
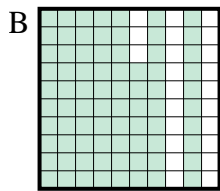
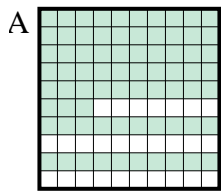


4. _____


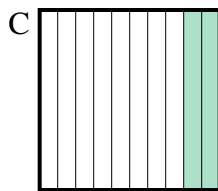
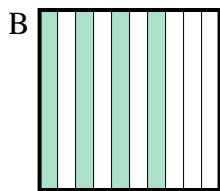
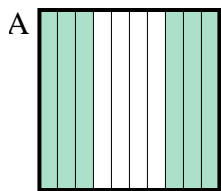
5. _____

6. _____

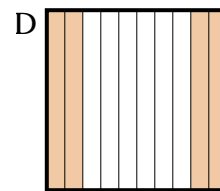
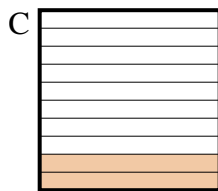
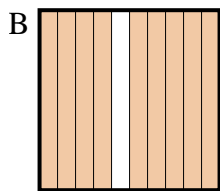
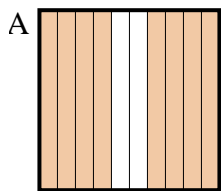
3) Quale griglia 10×10 è colorata in modo da rappresentare un numero decimale, che sommato a 0,93 fa 1,00?



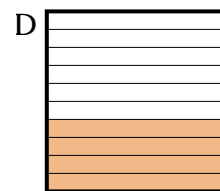
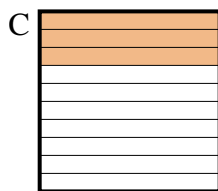

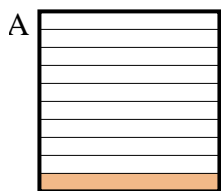
4) Quale griglia 10×1 è colorata in modo da rappresentare un numero decimale, che sommato a 0,9 fa 1,00?



5) Quale griglia 10×1 è colorata in modo da rappresentare un numero decimale, che sommato a 0,1 fa 1,00?



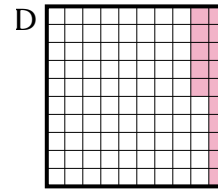
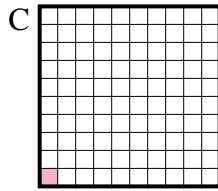
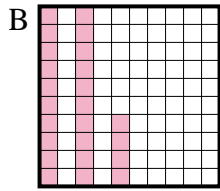
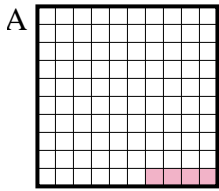
6) Quale griglia 10×1 è colorata in modo da rappresentare un numero decimale, che sommato a 0,6 fa 1,00?



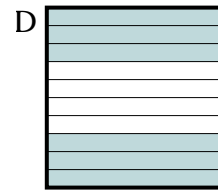
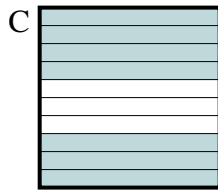
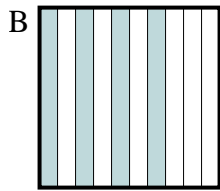
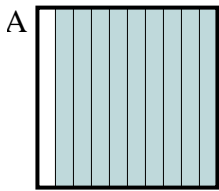


Determina quale lettera risponde correttamente alla domanda.

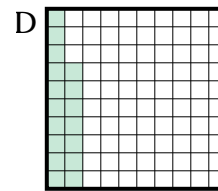
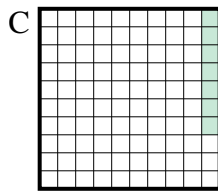
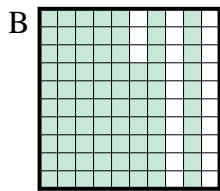
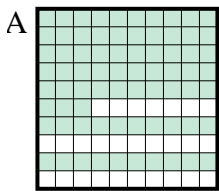
1) Quale griglia 10×10 è colorata in modo da rappresentare un numero decimale, che sommato a 0,96 fa 1,00?




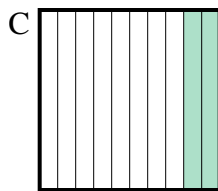
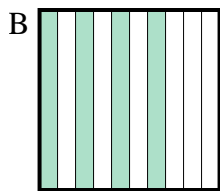
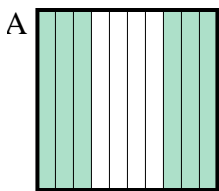
2) Quale griglia 10×1 è colorata in modo da rappresentare un numero decimale, che sommato a 0,3 fa 1,00?



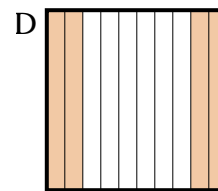
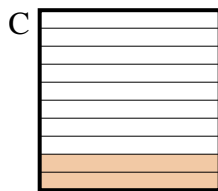
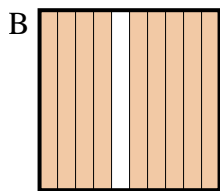
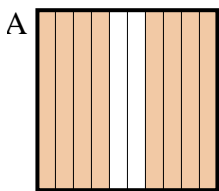
3) Quale griglia 10×10 è colorata in modo da rappresentare un numero decimale, che sommato a 0,93 fa 1,00?



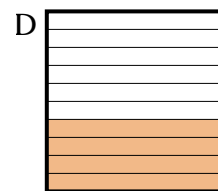
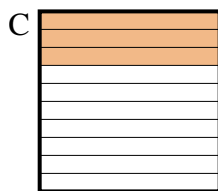

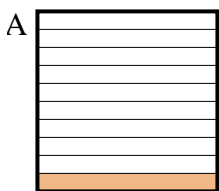
4) Quale griglia 10×1 è colorata in modo da rappresentare un numero decimale, che sommato a 0,9 fa 1,00?



5) Quale griglia 10×1 è colorata in modo da rappresentare un numero decimale, che sommato a 0,1 fa 1,00?



6) Quale griglia 10×1 è colorata in modo da rappresentare un numero decimale, che sommato a 0,6 fa 1,00?



Risposte

1. **A**

2. **C**

3. **C**

4. **D**

5. **B**

6. **D**