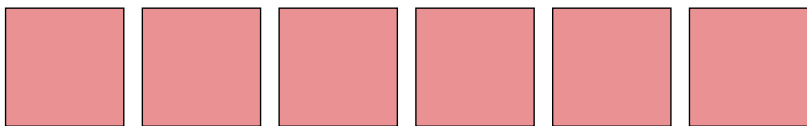





Conta la quantità dei diversi oggetti.

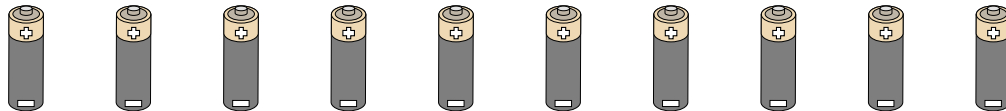
1)



2)



3)



4)



5)



6)



Risposte

1. _____

2. _____

3. _____

4. _____

5. _____

6. _____


7. _____

8. _____

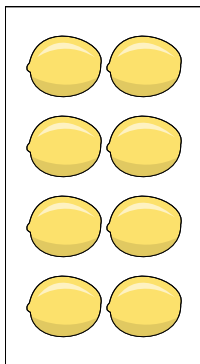
9. _____

10. _____


7)



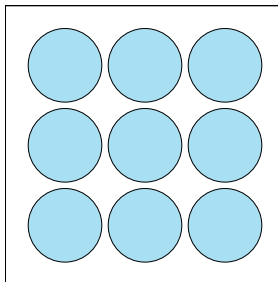
8)



9)



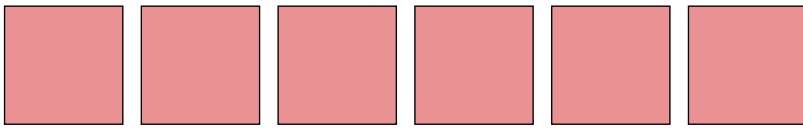
10)





Conta la quantità dei diversi oggetti.

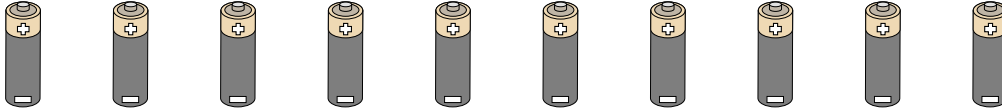
1)



2)



3)



4)



5)



6)



Risposte

1. 6

2. 4

3. 10

4. 13

5. 15

6. 18


7. 6

8. 8

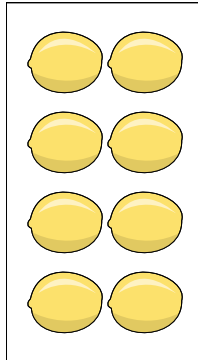
9. 12

10. 9


7)



8)



9)



10)

