




Conta la quantità dei diversi oggetti.

1)



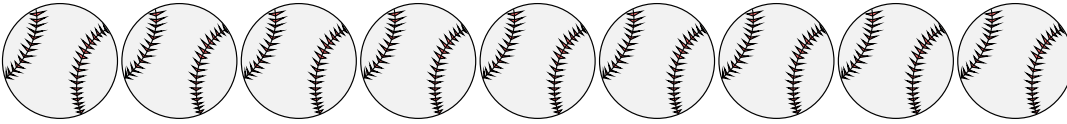
2)



3)



4)



5)



6)



Risposte

1. _____

2. _____

3. _____

4. _____

5. _____

6. _____

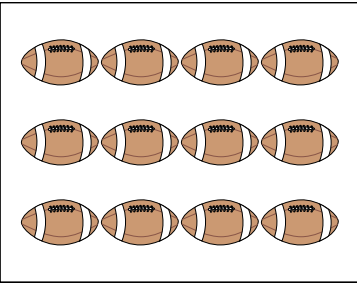
7. _____

8. _____


9. _____

10. _____


7)



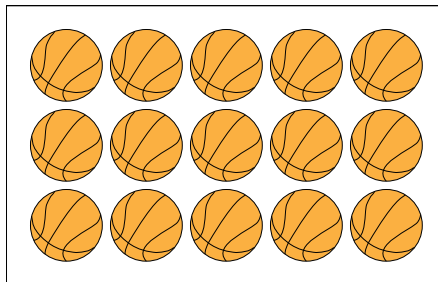
8)



9)




10)





Conta la quantità dei diversi oggetti.

1)



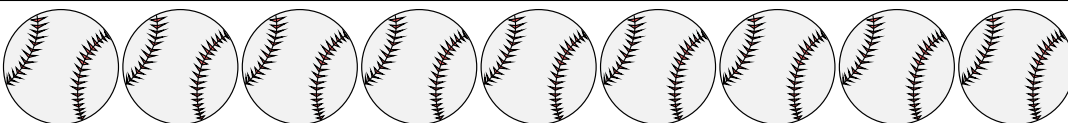
2)



3)



4)



5)



6)



Risposte

1. 2

2. 14

3. 19

4. 9

5. 17

6. 2

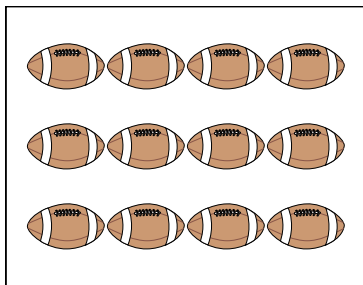
7. 12

8. 12


9. 15

10. 15


7)



8)



9)



10)

