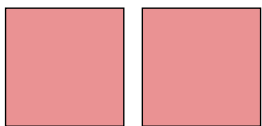


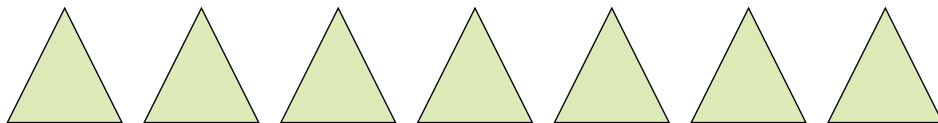


Conta la quantità dei diversi oggetti.

1)




2)



3)



4)




5)




6)




7)




8)



9)



10)



Risposte

1. _____

2. _____

3. _____

4. _____

5. _____

6. _____

7. _____

8. _____

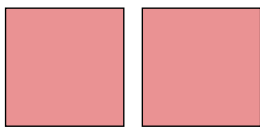
9. _____

10. _____

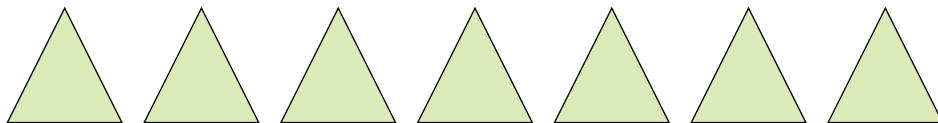


Conta la quantità dei diversi oggetti.

1)




2)



3)



4)




5)



6)




7)




8)



9)



10)



Risposte

1. 2

2. 7

3. 13

4. 3

5. 11

6. 16

7. 6

8. 4

9. 15

10. 6