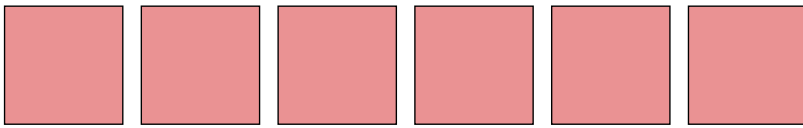




Conta la quantità dei diversi oggetti.

1)



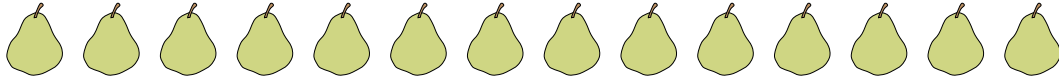
2)



3)



4)



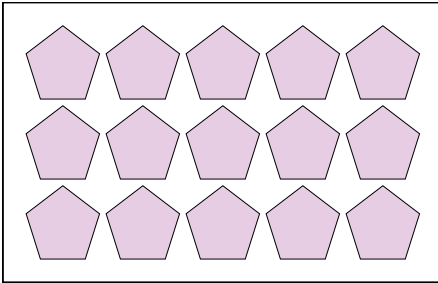
5)



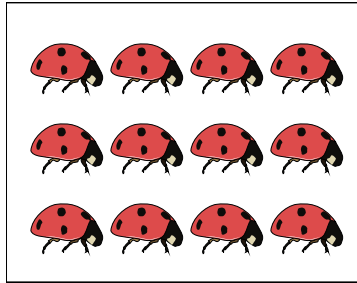
6)



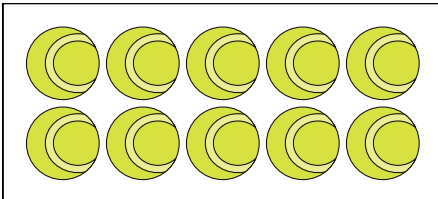
7)



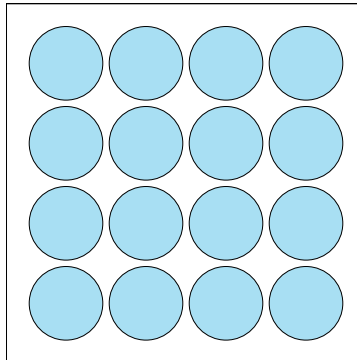
8)



9)



10)



**Risposte**

1. \_\_\_\_\_

2. \_\_\_\_\_

3. \_\_\_\_\_

4. \_\_\_\_\_

5. \_\_\_\_\_

6. \_\_\_\_\_

7. \_\_\_\_\_

8. \_\_\_\_\_

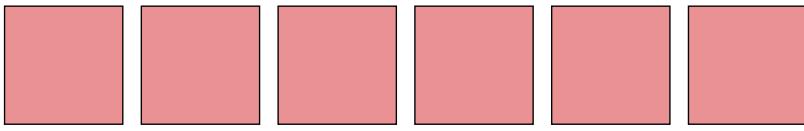
9. \_\_\_\_\_

10. \_\_\_\_\_



Conta la quantità dei diversi oggetti.

1)



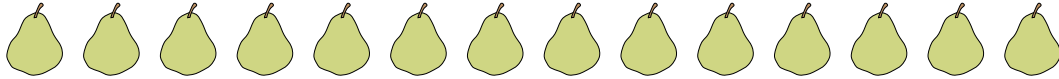
2)



3)



4)



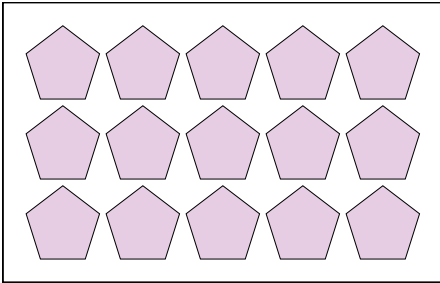
5)



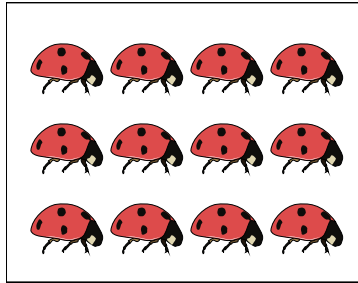
6)



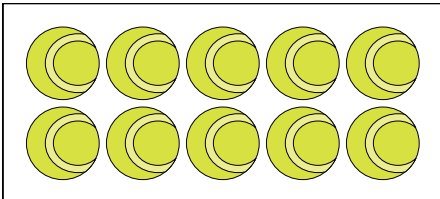
7)



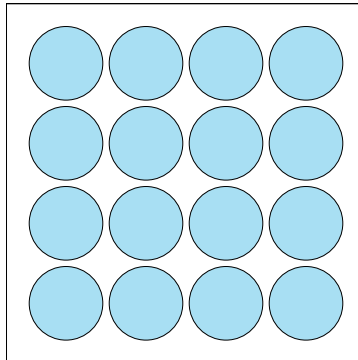
8)



9)



10)



**Risposte**

1. 6

2. 10

3. 16

4. 14

5. 11

6. 20

7. 15

8. 12

9. 10

10. 16