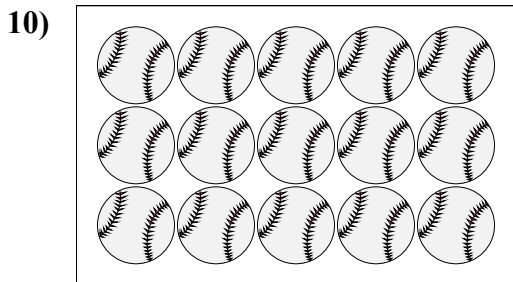
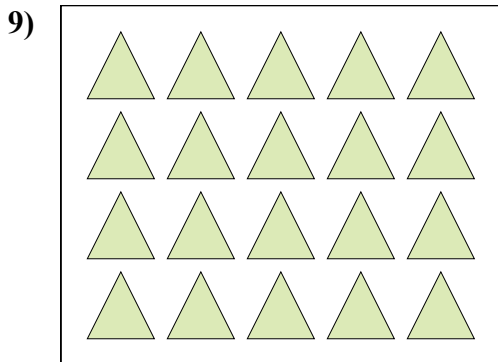
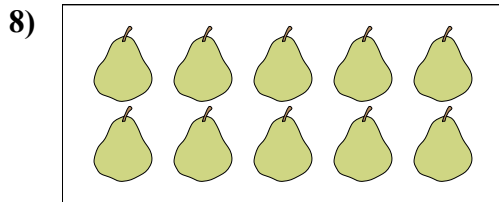


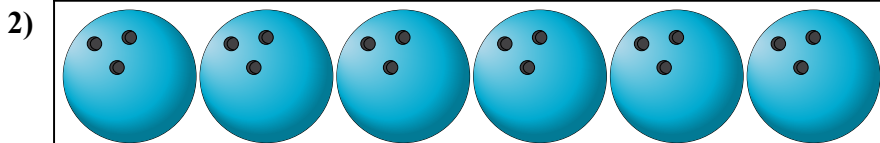




Conta la quantità dei diversi oggetti.



Risposte

1. _____

2. _____

3. _____

4. _____

5. _____

6. _____

7. _____

8. _____

9. _____

10. _____



Conta la quantità dei diversi oggetti.

1)

2)

3)

4)

5)

6)

Risposte

- 1. 19
- 2. 6
- 3. 18
- 4. 18
- 5. 4
- 6. 16
- 7. 6
- 8. 10
- 9. 20
- 10. 15

7)

8)

9)

10)