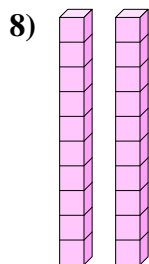
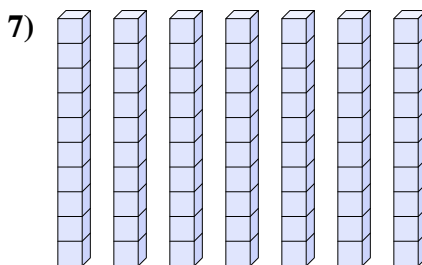
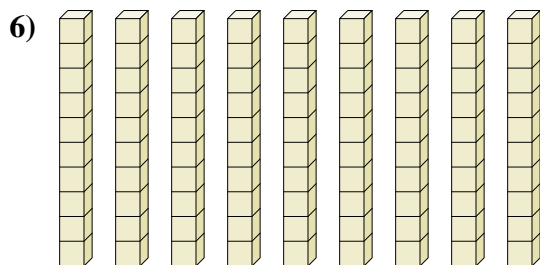
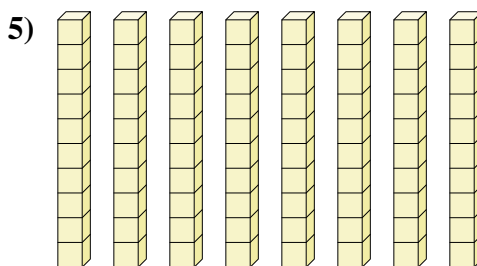
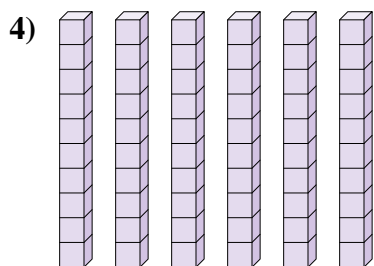
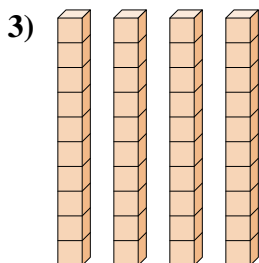
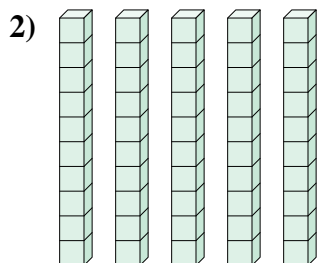
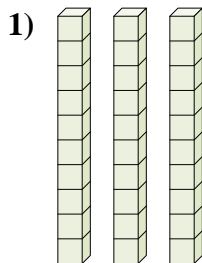
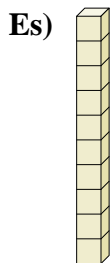




Determina la quantità dei gruppi di dieci. Poi trova la quantità dei quadrati più piccoli



**Risposte**

Es. 1 10

1. \_\_\_\_\_

2. \_\_\_\_\_

3. \_\_\_\_\_

4. \_\_\_\_\_

5. \_\_\_\_\_

6. \_\_\_\_\_

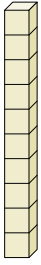
7. \_\_\_\_\_

8. \_\_\_\_\_

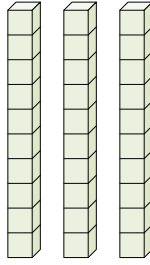


Determina la quantità dei gruppi di dieci. Poi trova la quantità dei quadrati più piccoli

Es)



1)



Risposte

Es. 1    10

1. 3    30

2. 5    50

3. 4    40

4. 6    60


5. 8    80

6. 9    90

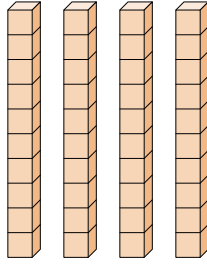
7. 7    70

8. 2    20

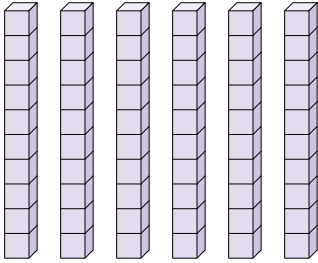
2)



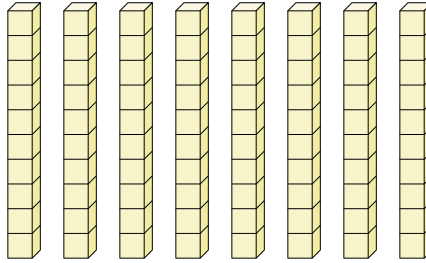
3)



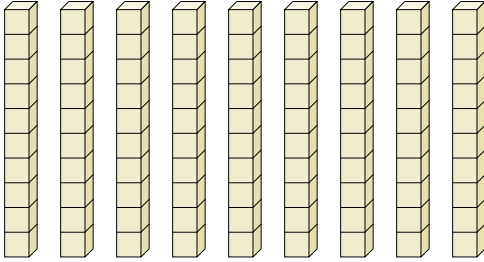
4)



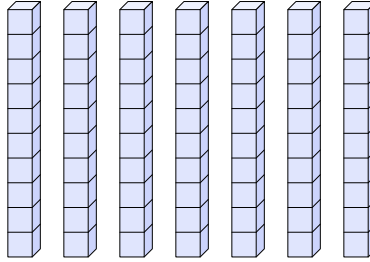
5)



6)



7)



8)

