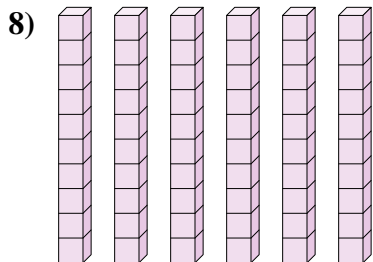
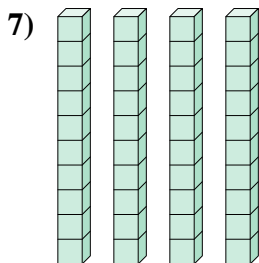
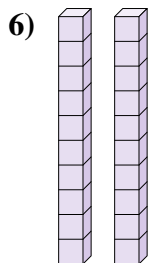
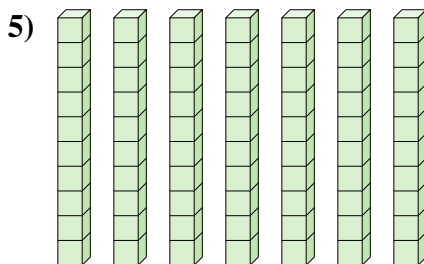
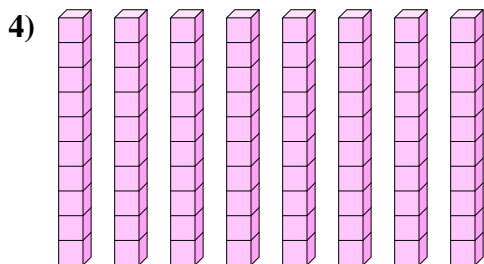
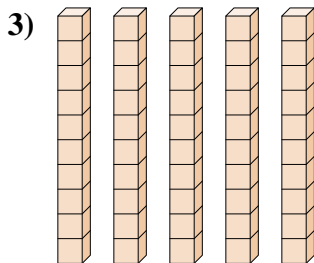
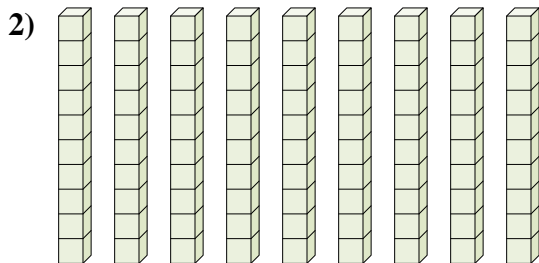
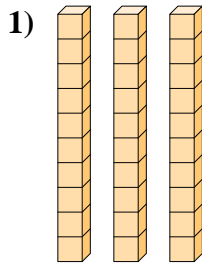
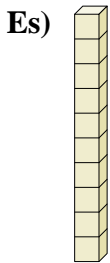




Determina la quantità dei gruppi di dieci. Poi trova la quantità dei quadrati più piccoli



Risposte

Es. 1 10

1. _____

2. _____

3. _____

4. _____

5. _____

6. _____

7. _____

8. _____

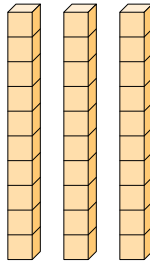


Determina la quantità dei gruppi di dieci. Poi trova la quantità dei quadrati più piccoli

Es)



1)



Risposte

Es. 1 10

1. 3 30

2. 9 90

3. 5 50

4. 8 80

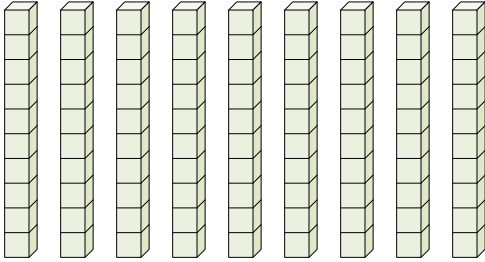
5. 7 70

6. 2 20

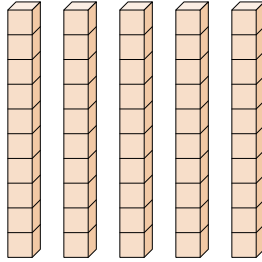
7. 4 40

8. 6 60

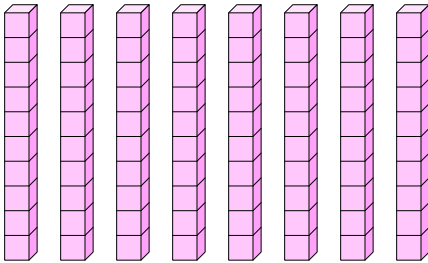
2)



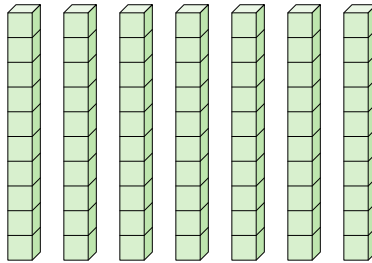
3)



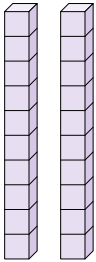
4)




5)



6)



7)



8)

