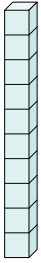


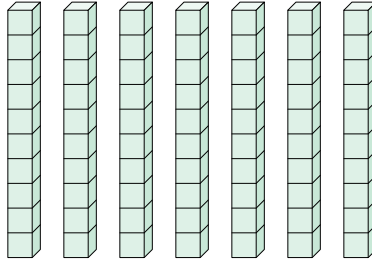


Determina la quantità dei gruppi di dieci. Poi trova la quantità dei quadrati più piccoli

Es)



1)



Risposte

Es. 1 10

1. _____

2. _____

3. _____

4. _____

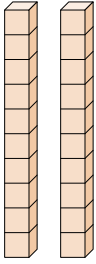
5. _____

6. _____

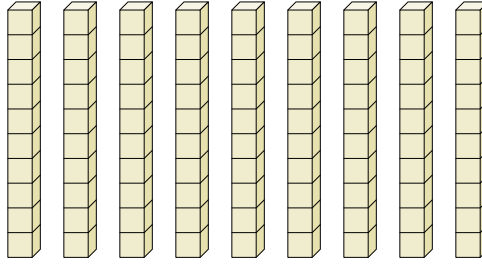
7. _____

8. _____

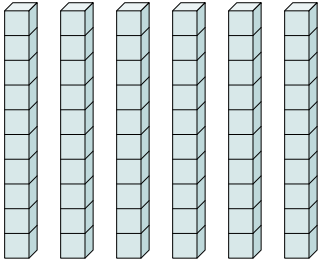
2)



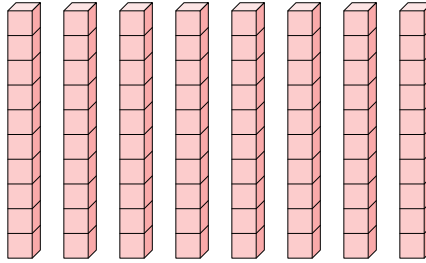
3)



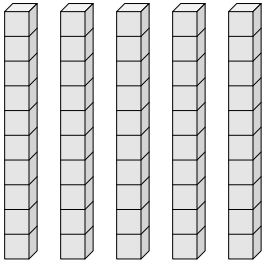
4)



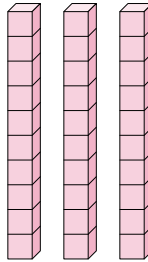
5)



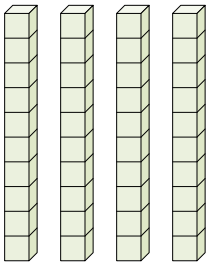
6)



7)



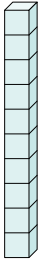
8)



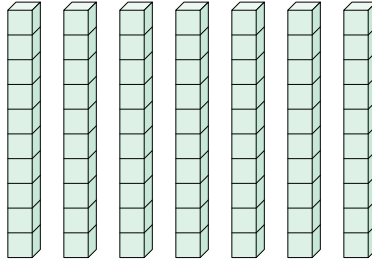


Determina la quantità dei gruppi di dieci. Poi trova la quantità dei quadrati più piccoli

Es)



1)



Risposte

Es. 1 10

1. 7 70

2. 2 20

3. 9 90

4. 6 60

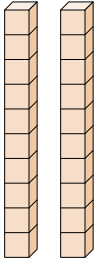
5. 8 80

6. 5 50

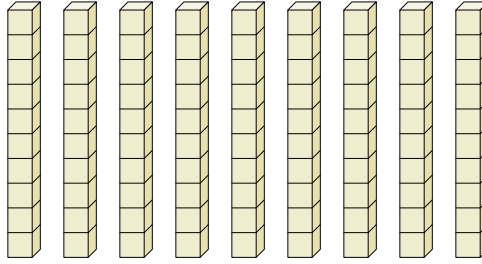
7. 3 30

8. 4 40

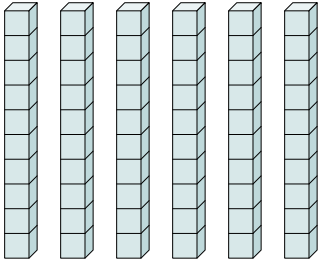
2)



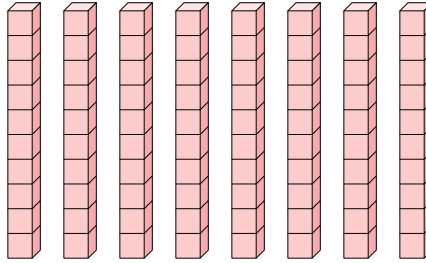
3)



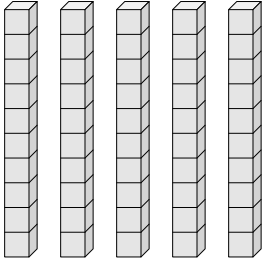
4)



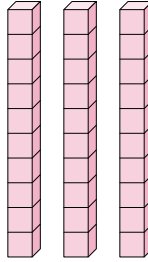
5)



6)



7)



8)

