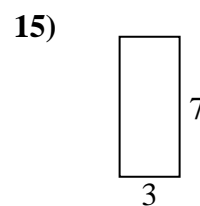
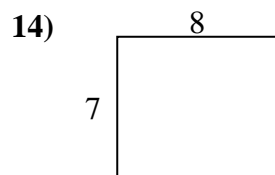
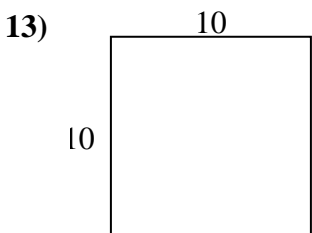
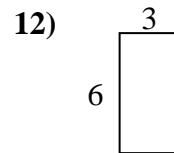
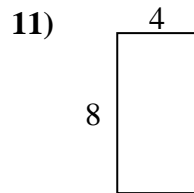
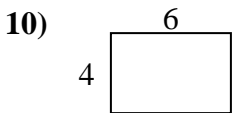
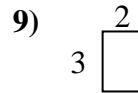
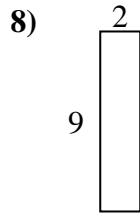
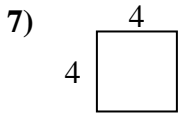
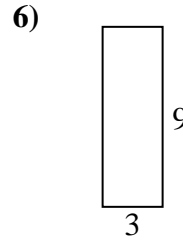
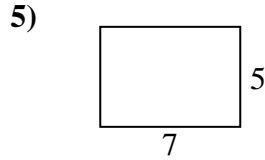
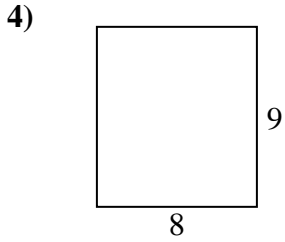
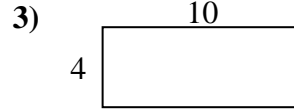
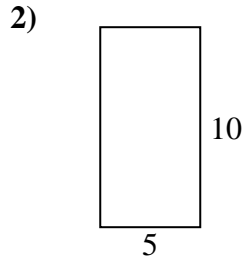
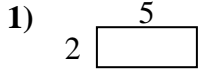




Calcola il perimetro e l'area di ogni figura, Ogni misura è in pollici (in).

Non vanno fatte le equivalenze.



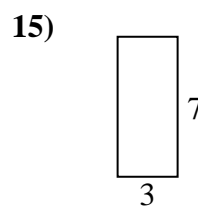
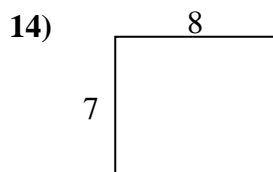
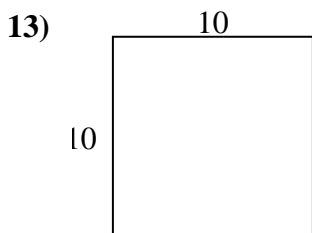
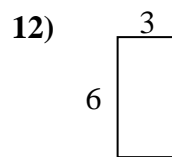
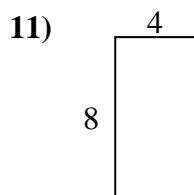
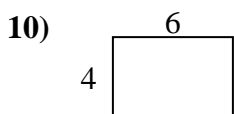
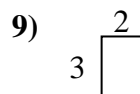
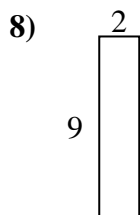
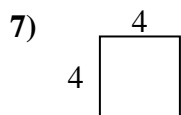
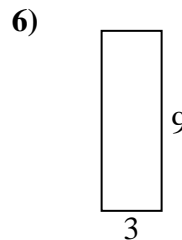
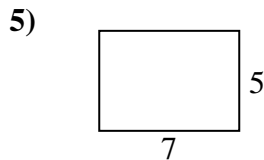
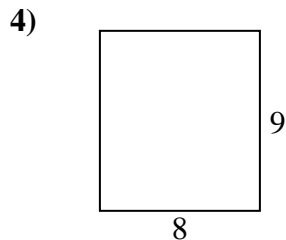
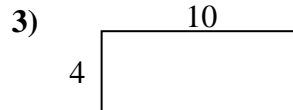
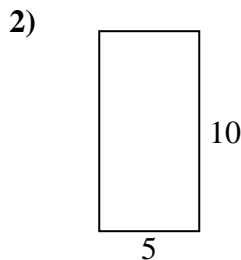
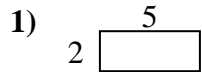
Risposte

1. _____
2. _____
3. _____
4. _____
5. _____
6. _____
7. _____
8. _____
9. _____
10. _____
11. _____
12. _____
13. _____
14. _____
15. _____



Calcola il perimetro e l'area di ogni figura, Ogni misura è in pollici (in).

Non vanno fatte le equivalenze.



Risposte

1. 14 cm 10 cm²
2. 30 cm 50 cm²
3. 28 cm 40 cm²
4. 34 cm 72 cm²
5. 24 cm 35 cm²
6. 24 cm 27 cm²
7. 16 cm 16 cm²
8. 22 cm 18 cm²
9. 10 cm 6 cm²
10. 20 cm 24 cm²
11. 24 cm 32 cm²
12. 18 cm 18 cm²
13. 40 cm 100 cm²
14. 30 cm 56 cm²
15. 20 cm 21 cm²