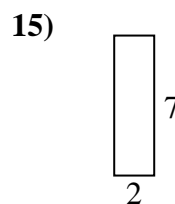
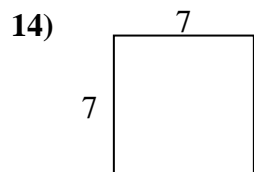
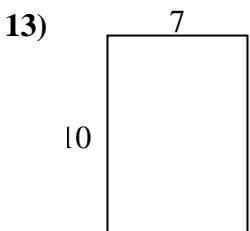
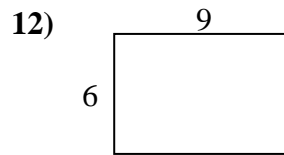
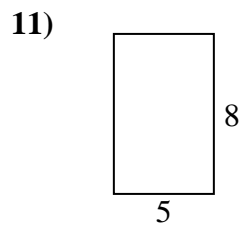
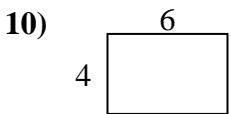
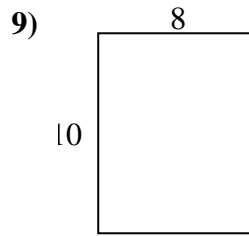
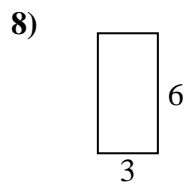
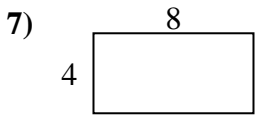
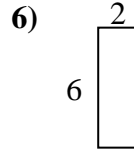
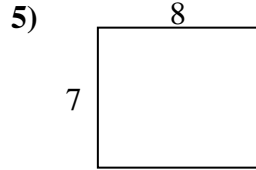
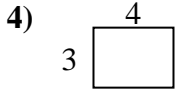
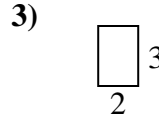
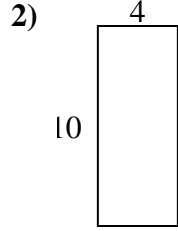
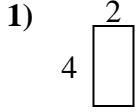




Calcola il perimetro e l'area di ogni figura, Ogni misura è in pollici (in).

Non vanno fatte le equivalenze.



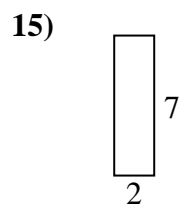
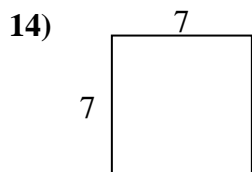
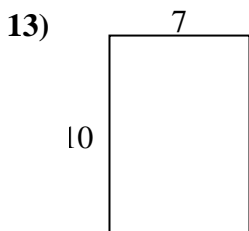
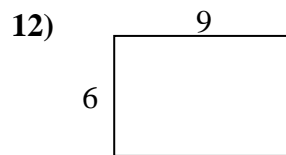
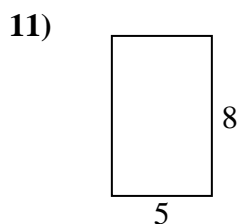
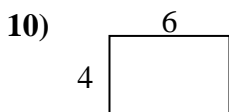
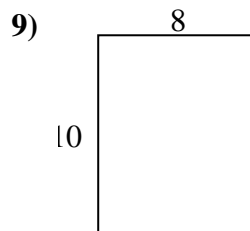
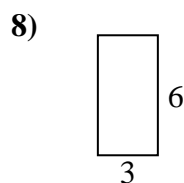
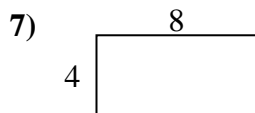
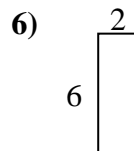
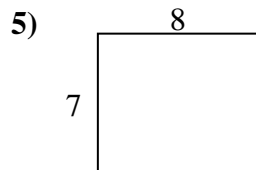
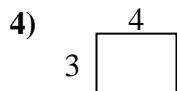
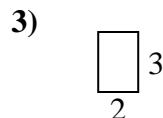
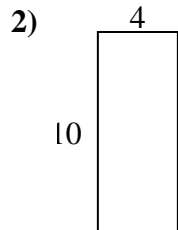
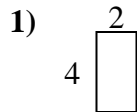
Risposte

1. _____
2. _____
3. _____
4. _____
5. _____
6. _____
7. _____
8. _____
9. _____
10. _____
11. _____
12. _____
13. _____
14. _____
15. _____



Calcola il perimetro e l'area di ogni figura, Ogni misura è in pollici (in).

Non vanno fatte le equivalenze.



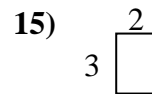
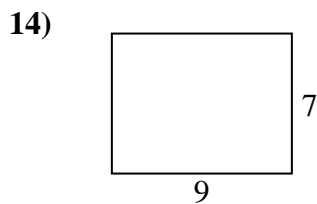
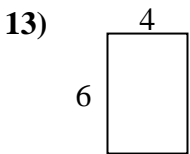
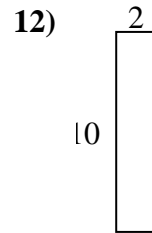
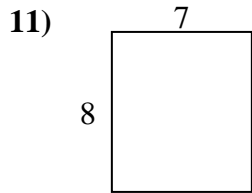
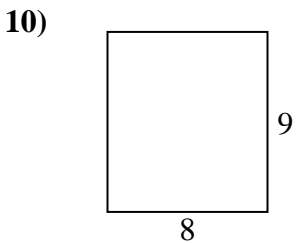
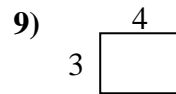
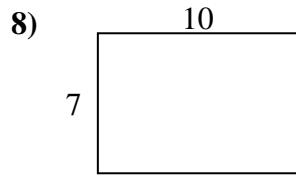
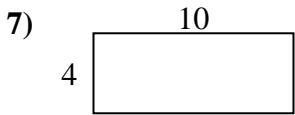
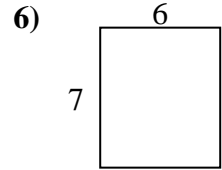
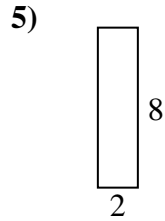
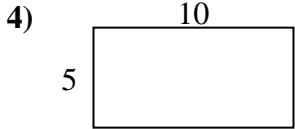
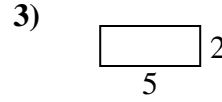
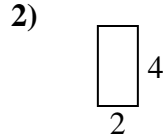
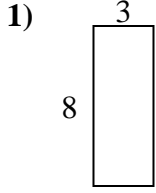
Risposte

1. 12 in 8 in²
2. 28 in 40 in²
3. 10 in 6 in²
4. 14 in 12 in²
5. 30 in 56 in²
6. 16 in 12 in²
7. 24 in 32 in²
8. 18 in 18 in²
9. 36 in 80 in²
10. 20 in 24 in²
11. 26 in 40 in²
12. 30 in 54 in²
13. 34 in 70 in²
14. 28 in 49 in²
15. 18 in 14 in²



Calcola il perimetro e l'area di ogni figura, Ogni misura è in pollici (in).

Non vanno fatte le equivalenze.



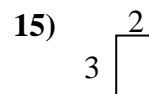
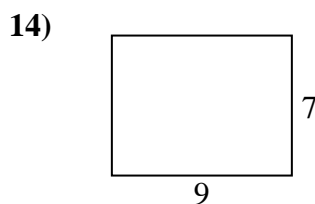
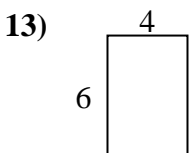
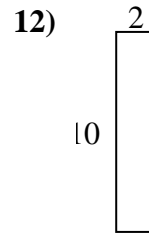
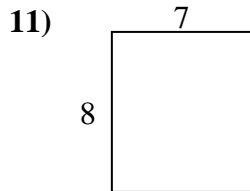
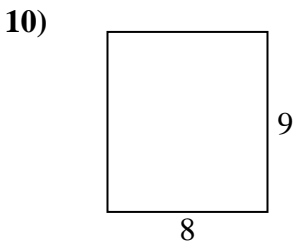
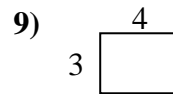
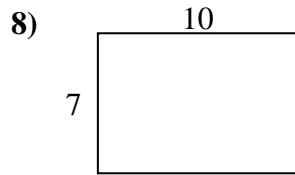
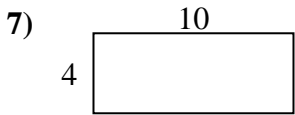
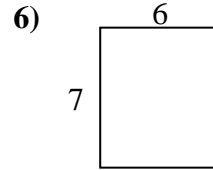
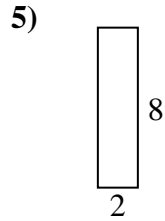
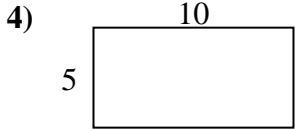
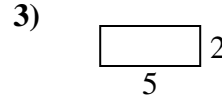
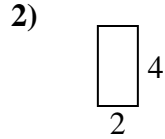
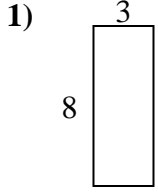
Risposte

1. _____
2. _____
3. _____
4. _____
5. _____
6. _____
7. _____
8. _____
9. _____
10. _____
11. _____
12. _____
13. _____
14. _____
15. _____



Calcola il perimetro e l'area di ogni figura, Ogni misura è in pollici (in).

Non vanno fatte le equivalenze.



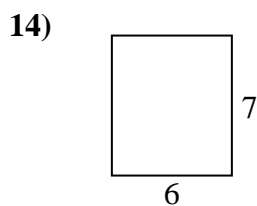
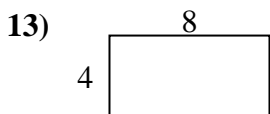
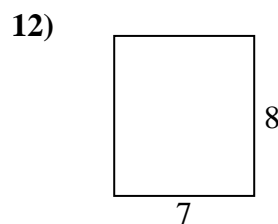
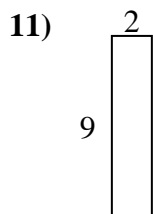
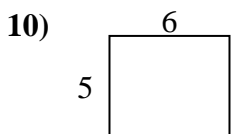
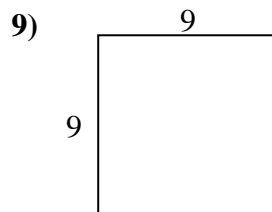
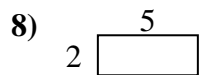
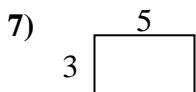
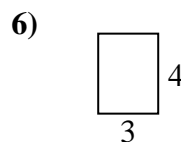
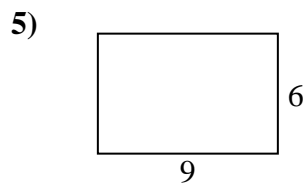
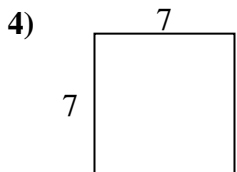
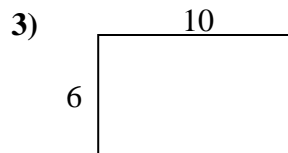
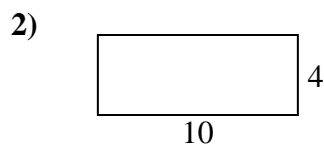

Risposte

1. 22 in 24 in²
2. 12 in 8 in²
3. 14 in 10 in²
4. 30 in 50 in²
5. 20 in 16 in²
6. 26 in 42 in²
7. 28 in 40 in²
8. 34 in 70 in²
9. 14 in 12 in²
10. 34 in 72 in²
11. 30 in 56 in²
12. 24 in 20 in²
13. 20 in 24 in²
14. 32 in 63 in²
15. 10 in 6 in²



Calcola il perimetro e l'area di ogni figura, Ogni misura è in pollici (in).

Non vanno fatte le equivalenze.



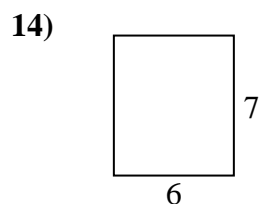
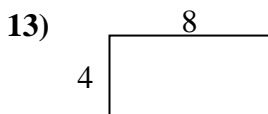
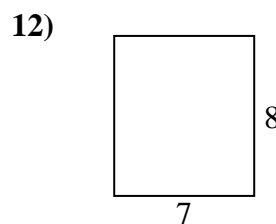
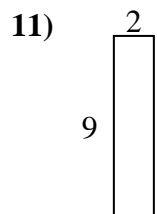
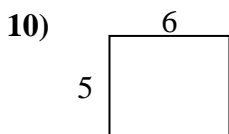
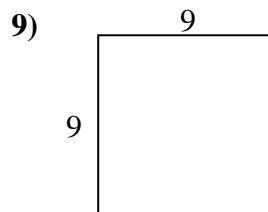
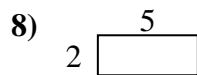
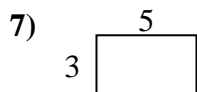
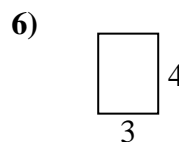
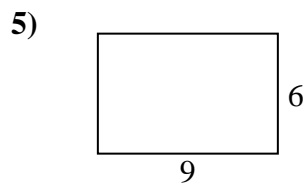
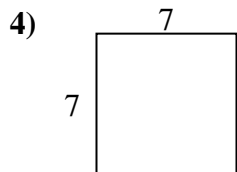
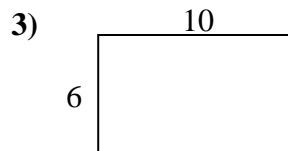
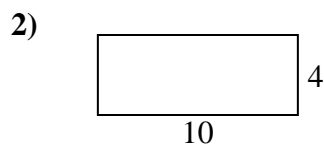
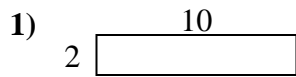
Risposte

1. _____
2. _____
3. _____
4. _____
5. _____
6. _____
7. _____
8. _____
9. _____
10. _____
11. _____
12. _____
13. _____
14. _____
15. _____



Calcola il perimetro e l'area di ogni figura, Ogni misura è in pollici (in).

Non vanno fatte le equivalenze.



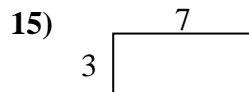
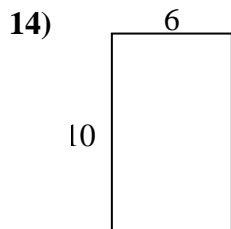
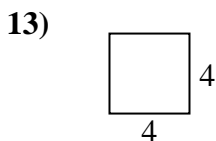
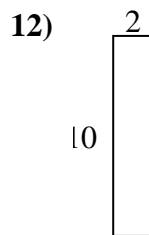
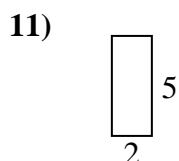
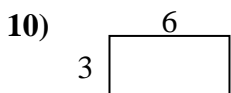
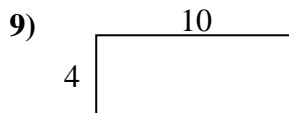
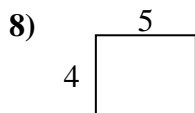
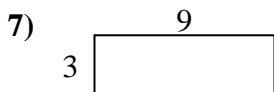
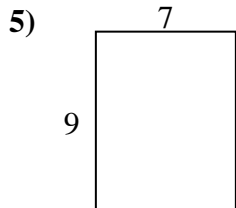
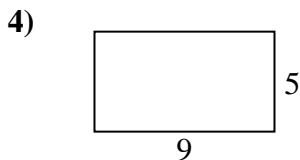

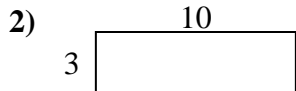
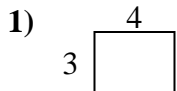
Risposte

1. 24 in 20 in²
2. 28 in 40 in²
3. 32 in 60 in²
4. 28 in 49 in²
5. 30 in 54 in²
6. 14 in 12 in²
7. 16 in 15 in²
8. 14 in 10 in²
9. 36 in 81 in²
10. 22 in 30 in²
11. 22 in 18 in²
12. 30 in 56 in²
13. 24 in 32 in²
14. 26 in 42 in²
15. 22 in 24 in²



Calcola il perimetro e l'area di ogni figura, Ogni misura è in pollici (in).

Non vanno fatte le equivalenze.



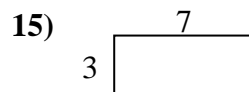
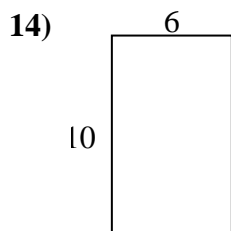
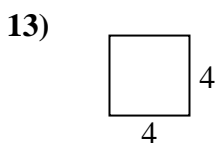
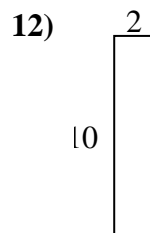
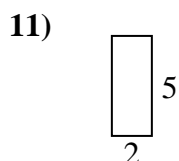
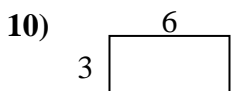
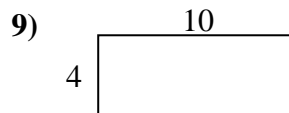
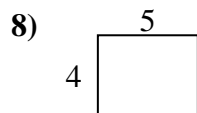
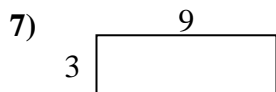
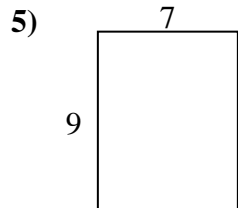
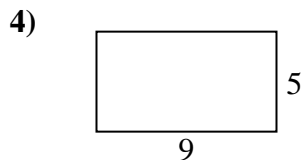
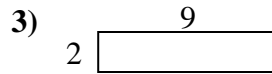
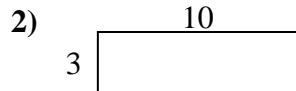
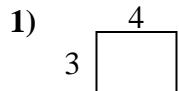
Risposte

1. _____
2. _____
3. _____
4. _____
5. _____
6. _____
7. _____
8. _____
9. _____
10. _____
11. _____
12. _____
13. _____
14. _____
15. _____



Calcola il perimetro e l'area di ogni figura, Ogni misura è in pollici (in).

Non vanno fatte le equivalenze.



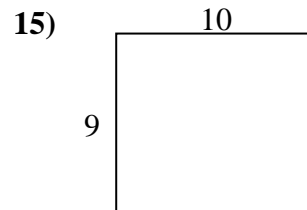
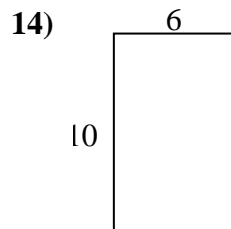
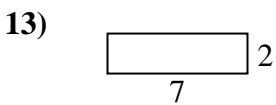
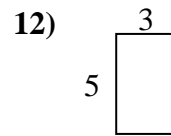
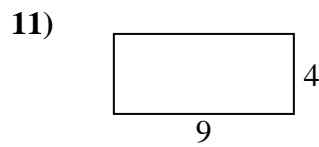
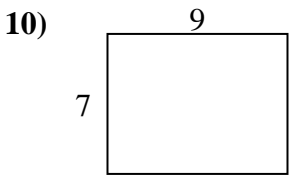
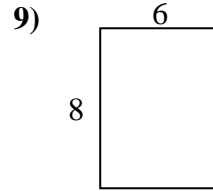
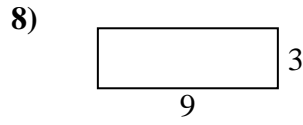
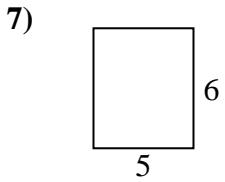
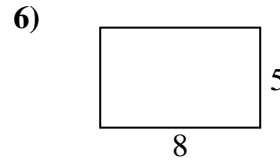
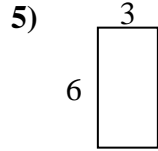
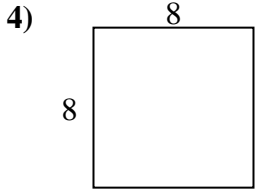
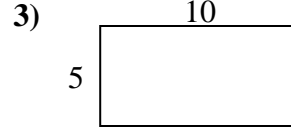

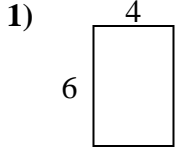
Risposte

1. 14 in 12 in²
2. 26 in 30 in²
3. 22 in 18 in²
4. 28 in 45 in²
5. 32 in 63 in²
6. 12 in 8 in²
7. 24 in 27 in²
8. 18 in 20 in²
9. 28 in 40 in²
10. 18 in 18 in²
11. 14 in 10 in²
12. 24 in 20 in²
13. 16 in 16 in²
14. 32 in 60 in²
15. 20 in 21 in²



Calcola il perimetro e l'area di ogni figura, Ogni misura è in pollici (in).

Non vanno fatte le equivalenze.



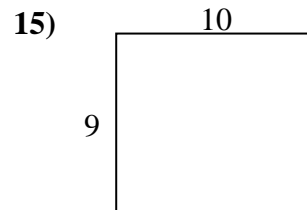
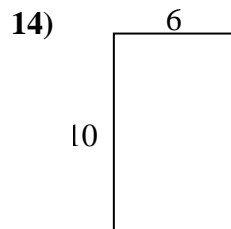
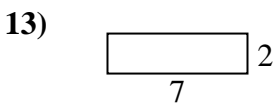
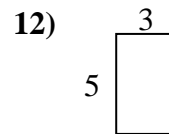
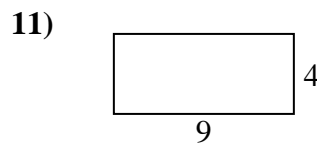
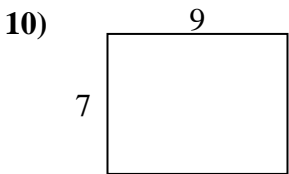
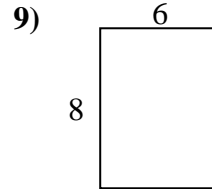
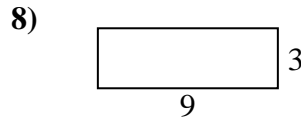
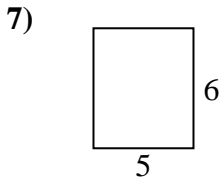
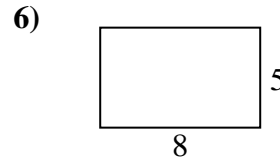
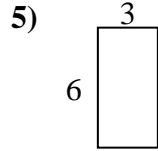
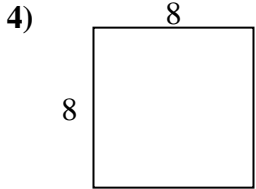
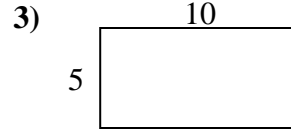

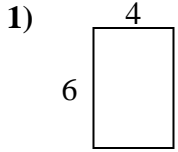
Risposte

1. _____
2. _____
3. _____
4. _____
5. _____
6. _____
7. _____
8. _____
9. _____
10. _____
11. _____
12. _____
13. _____
14. _____
15. _____



Calcola il perimetro e l'area di ogni figura, Ogni misura è in pollici (in).

Non vanno fatte le equivalenze.



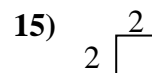
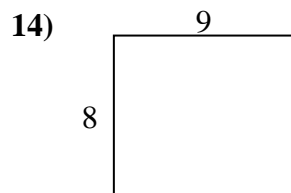
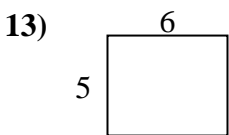
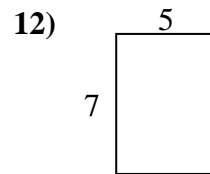
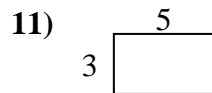
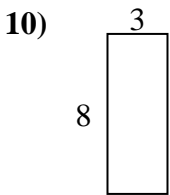
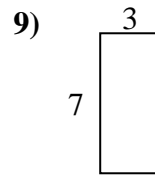
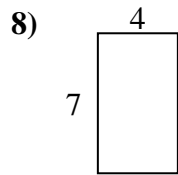
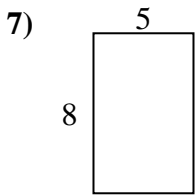
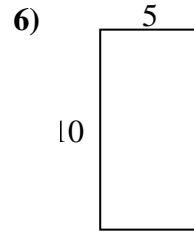
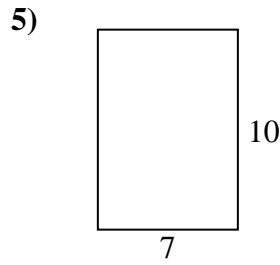
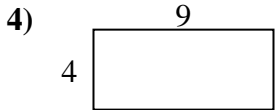
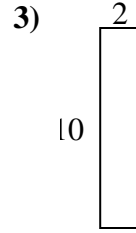
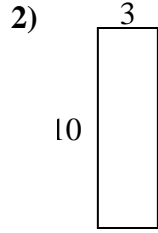
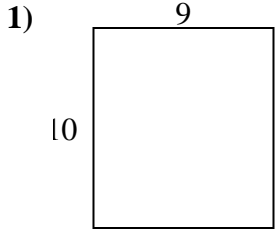
Risposte

1. 20 in 24 in²
2. 26 in 30 in²
3. 30 in 50 in²
4. 32 in 64 in²
5. 18 in 18 in²
6. 26 in 40 in²
7. 22 in 30 in²
8. 24 in 27 in²
9. 28 in 48 in²
10. 32 in 63 in²
11. 26 in 36 in²
12. 16 in 15 in²
13. 18 in 14 in²
14. 32 in 60 in²
15. 38 in 90 in²



Calcola il perimetro e l'area di ogni figura, Ogni misura è in pollici (in).

Non vanno fatte le equivalenze.



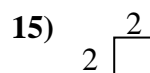
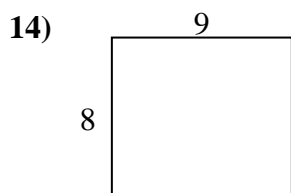
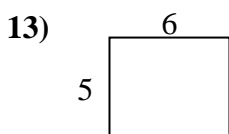
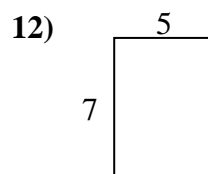
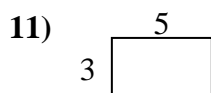
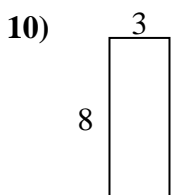
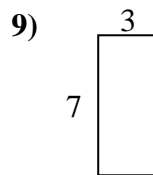
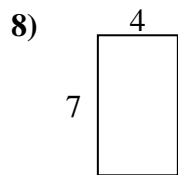
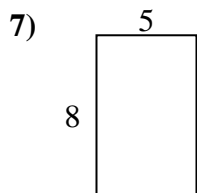
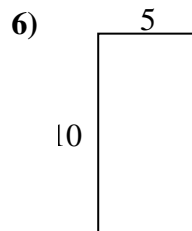
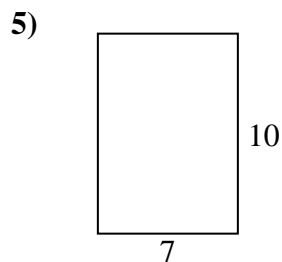
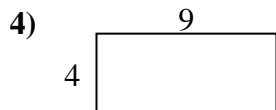
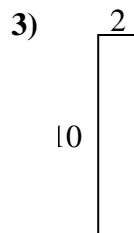
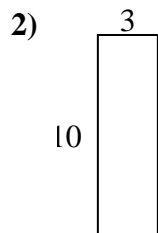
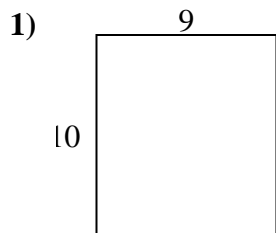
Risposte

1. _____
2. _____
3. _____
4. _____
5. _____
6. _____
7. _____
8. _____
9. _____
10. _____
11. _____
12. _____
13. _____
14. _____
15. _____



Calcola il perimetro e l'area di ogni figura, Ogni misura è in pollici (in).

Non vanno fatte le equivalenze.



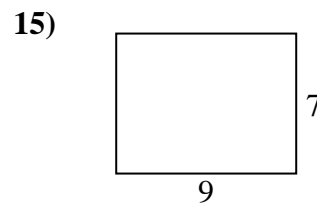
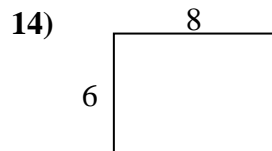
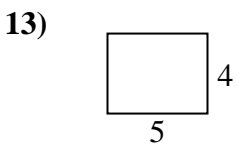
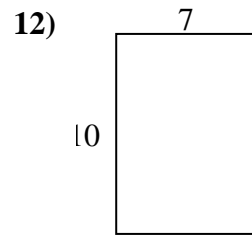
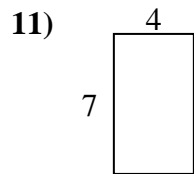
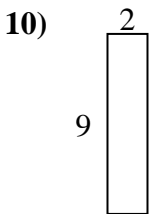
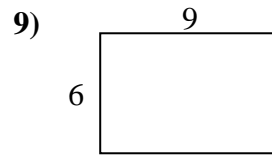
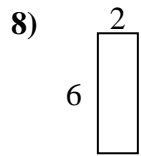
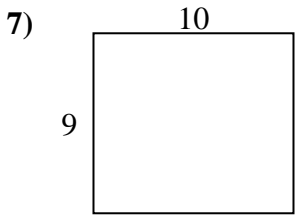
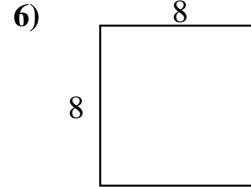
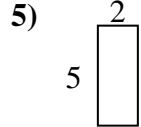
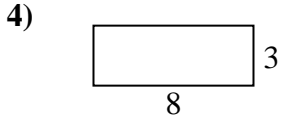
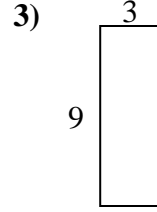
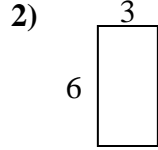
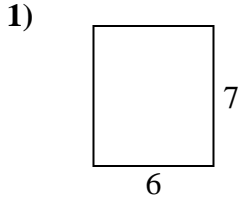
Risposte

1. 38 in 90 in²
2. 26 in 30 in²
3. 24 in 20 in²
4. 26 in 36 in²
5. 34 in 70 in²
6. 30 in 50 in²
7. 26 in 40 in²
8. 22 in 28 in²
9. 20 in 21 in²
10. 22 in 24 in²
11. 16 in 15 in²
12. 24 in 35 in²
13. 22 in 30 in²
14. 34 in 72 in²
15. 8 in 4 in²



Calcola il perimetro e l'area di ogni figura, Ogni misura è in pollici (in).

Non vanno fatte le equivalenze.



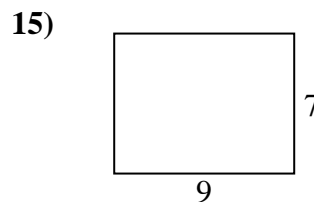
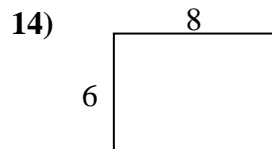
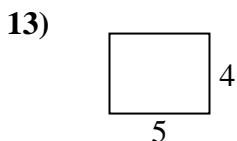
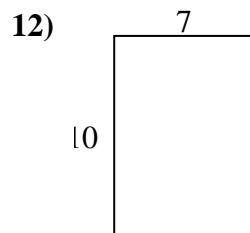
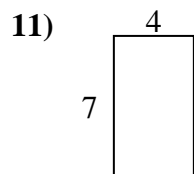
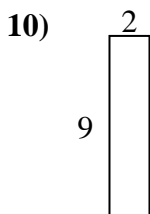
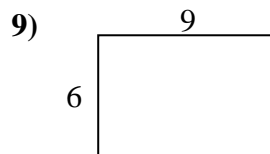
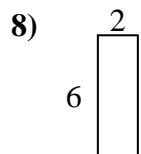
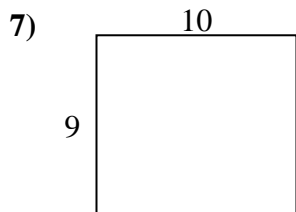
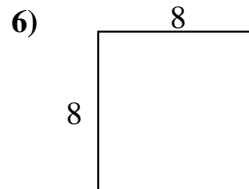
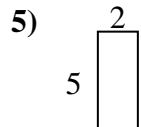
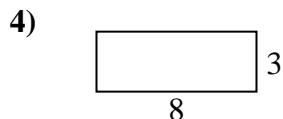
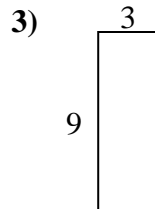
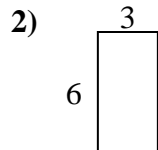
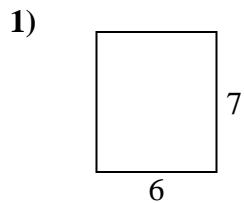
Risposte

1. _____
2. _____
3. _____
4. _____
5. _____
6. _____
7. _____
8. _____
9. _____
10. _____
11. _____
12. _____
13. _____
14. _____
15. _____



Calcola il perimetro e l'area di ogni figura, Ogni misura è in pollici (in).

Non vanno fatte le equivalenze.



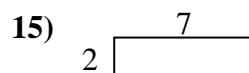
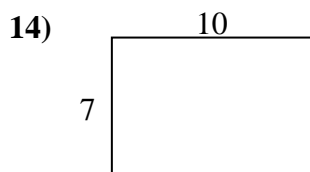
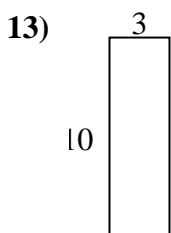
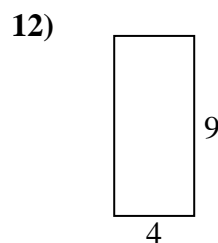
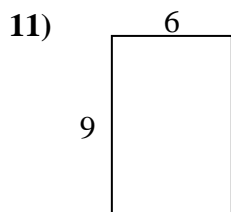
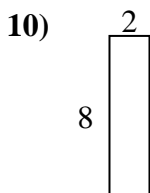
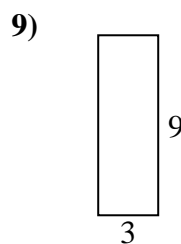
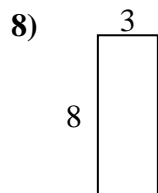
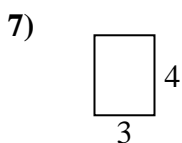
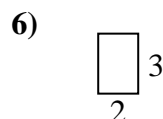
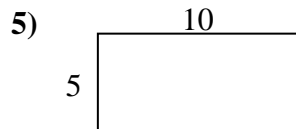
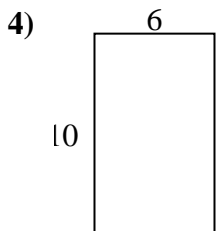
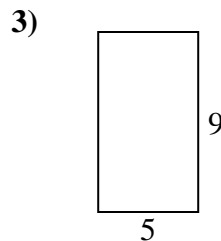
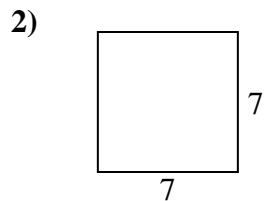
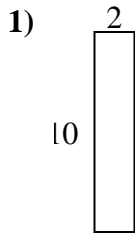
Risposte

1. 26 in 42 in²
2. 18 in 18 in²
3. 24 in 27 in²
4. 22 in 24 in²
5. 14 in 10 in²
6. 32 in 64 in²
7. 38 in 90 in²
8. 16 in 12 in²
9. 30 in 54 in²
10. 22 in 18 in²
11. 22 in 28 in²
12. 34 in 70 in²
13. 18 in 20 in²
14. 28 in 48 in²
15. 32 in 63 in²



Calcola il perimetro e l'area di ogni figura, Ogni misura è in pollici (in).

Non vanno fatte le equivalenze.



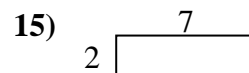
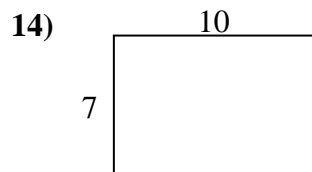
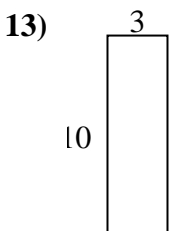
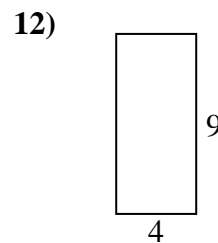
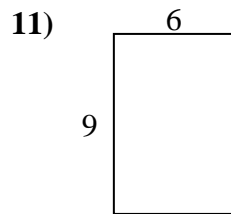
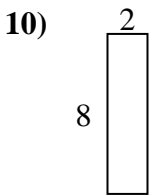
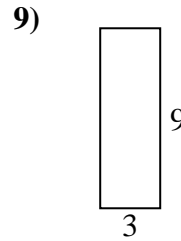
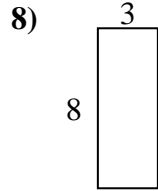
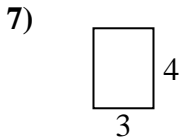
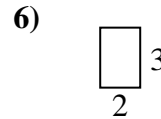
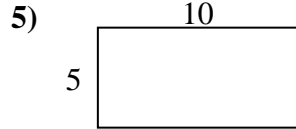
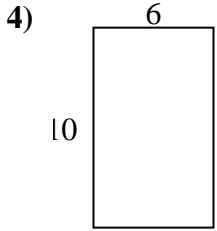
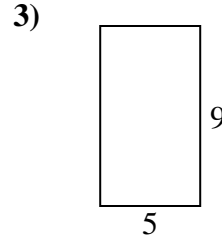
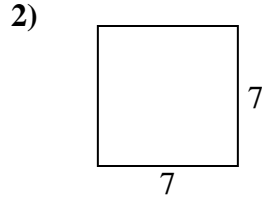
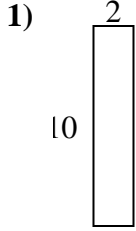
Risposte

1. _____
2. _____
3. _____
4. _____
5. _____
6. _____
7. _____
8. _____
9. _____
10. _____
11. _____
12. _____
13. _____
14. _____
15. _____



Calcola il perimetro e l'area di ogni figura, Ogni misura è in pollici (in).

Non vanno fatte le equivalenze.



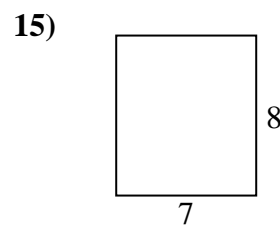
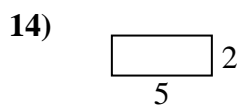
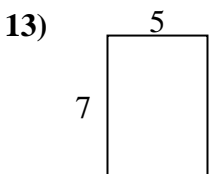
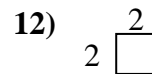
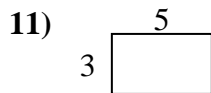
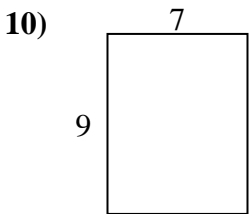
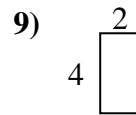
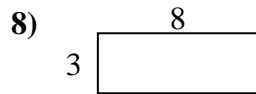
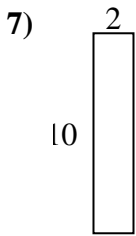
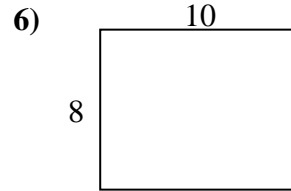
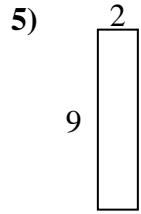
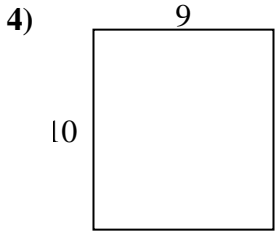
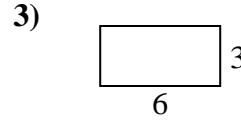
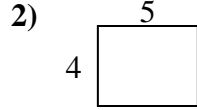
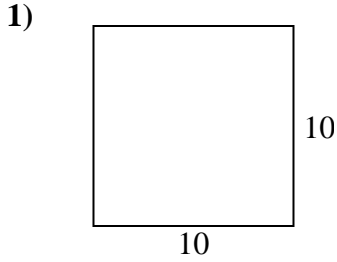
Risposte

1.	<u>24 in</u>	<u>20 in²</u>
2.	<u>28 in</u>	<u>49 in²</u>
3.	<u>28 in</u>	<u>45 in²</u>
4.	<u>32 in</u>	<u>60 in²</u>
5.	<u>30 in</u>	<u>50 in²</u>
6.	<u>10 in</u>	<u>6 in²</u>
7.	<u>14 in</u>	<u>12 in²</u>
8.	<u>22 in</u>	<u>24 in²</u>
9.	<u>24 in</u>	<u>27 in²</u>
10.	<u>20 in</u>	<u>16 in²</u>
11.	<u>30 in</u>	<u>54 in²</u>
12.	<u>26 in</u>	<u>36 in²</u>
13.	<u>26 in</u>	<u>30 in²</u>
14.	<u>34 in</u>	<u>70 in²</u>
15.	<u>18 in</u>	<u>14 in²</u>



Calcola il perimetro e l'area di ogni figura, Ogni misura è in pollici (in).

Non vanno fatte le equivalenze.



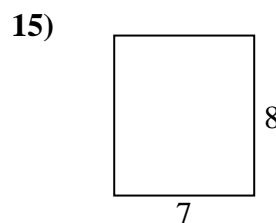
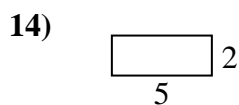
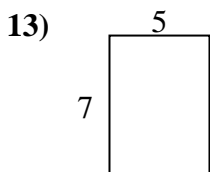
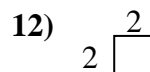
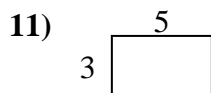
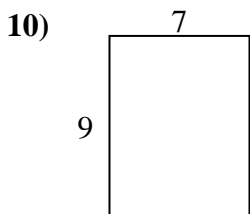
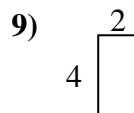
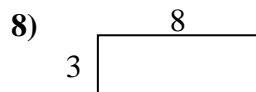
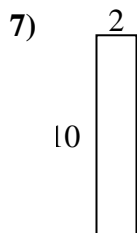
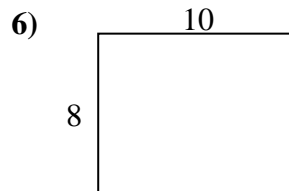
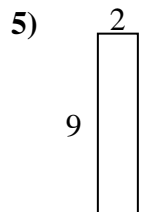
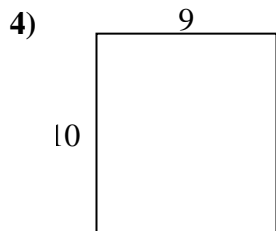
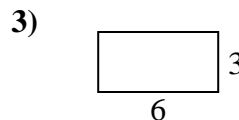
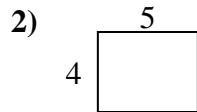
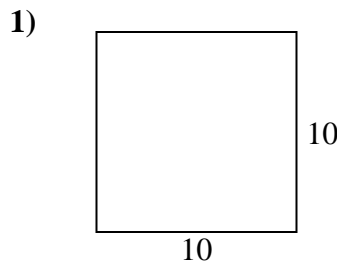
Risposte

1. _____
2. _____
3. _____
4. _____
5. _____
6. _____
7. _____
8. _____
9. _____
10. _____
11. _____
12. _____
13. _____
14. _____
15. _____



Calcola il perimetro e l'area di ogni figura, Ogni misura è in pollici (in).

Non vanno fatte le equivalenze.



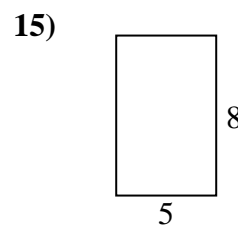
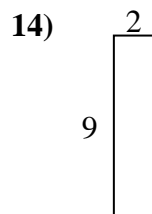
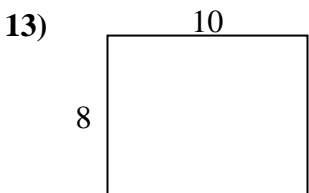
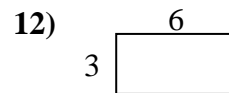
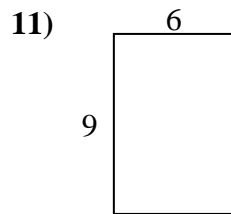
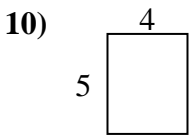
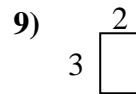
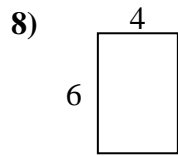
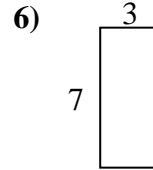
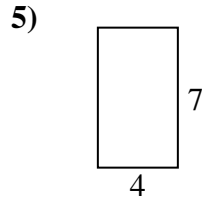
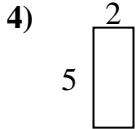
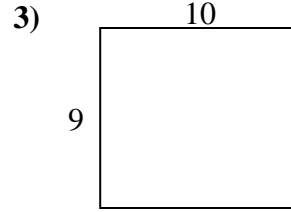
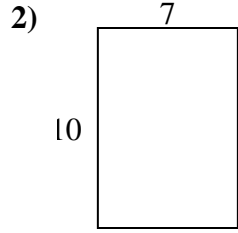
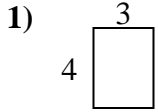
Risposte

1. 40 in 100 in²
2. 18 in 20 in²
3. 18 in 18 in²
4. 38 in 90 in²
5. 22 in 18 in²
6. 36 in 80 in²
7. 24 in 20 in²
8. 22 in 24 in²
9. 12 in 8 in²
10. 32 in 63 in²
11. 16 in 15 in²
12. 8 in 4 in²
13. 24 in 35 in²
14. 14 in 10 in²
15. 30 in 56 in²



Calcola il perimetro e l'area di ogni figura, Ogni misura è in pollici (in).

Non vanno fatte le equivalenze.



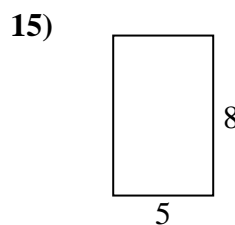
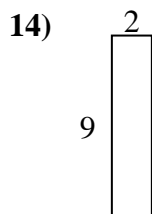
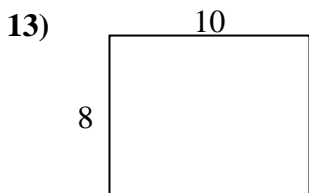
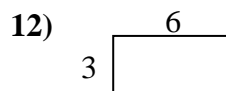
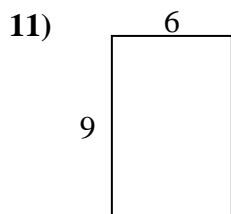
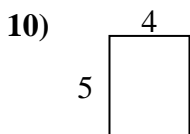
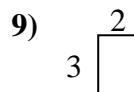
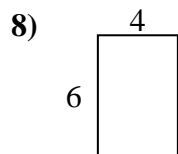
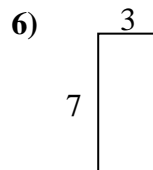
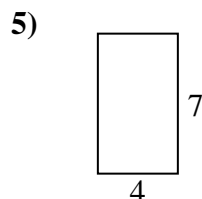
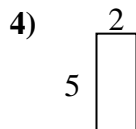
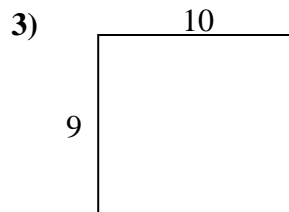
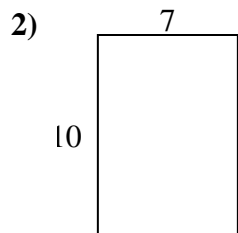
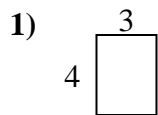
Risposte

1. _____
2. _____
3. _____
4. _____
5. _____
6. _____
7. _____
8. _____
9. _____
10. _____
11. _____
12. _____
13. _____
14. _____
15. _____



Calcola il perimetro e l'area di ogni figura, Ogni misura è in pollici (in).

Non vanno fatte le equivalenze.



Risposte

1. 14 in 12 in²
2. 34 in 70 in²
3. 38 in 90 in²
4. 14 in 10 in²
5. 22 in 28 in²
6. 20 in 21 in²
7. 20 in 16 in²
8. 20 in 24 in²
9. 10 in 6 in²
10. 18 in 20 in²
11. 30 in 54 in²
12. 18 in 18 in²
13. 36 in 80 in²
14. 22 in 18 in²
15. 26 in 40 in²