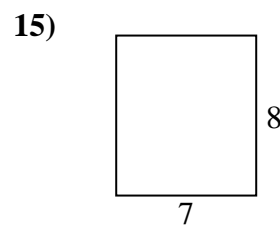
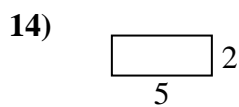
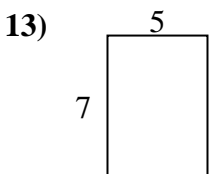
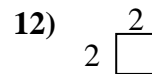
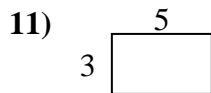
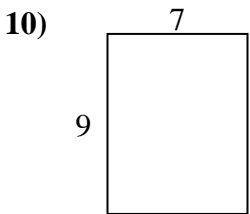
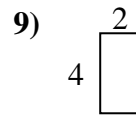
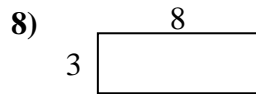
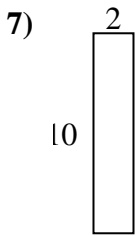
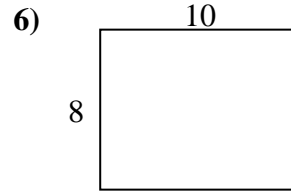
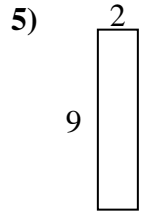
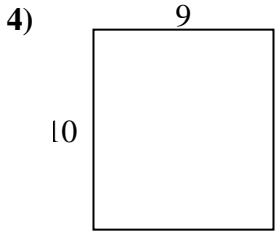
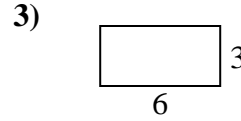
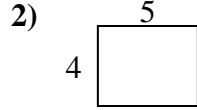
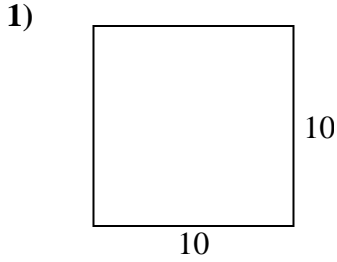




Calcola il perimetro e l'area di ogni figura, Ogni misura è in pollici (in).

Non vanno fatte le equivalenze.



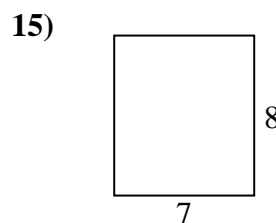
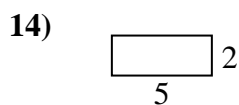
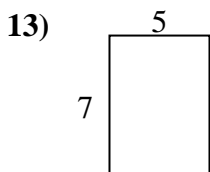
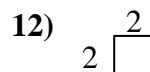
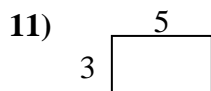
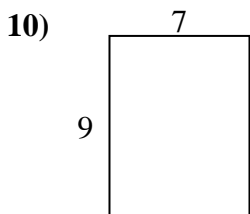
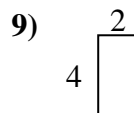
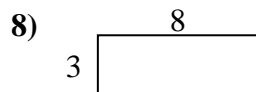
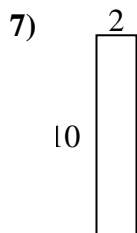
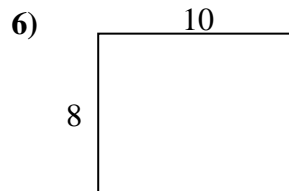
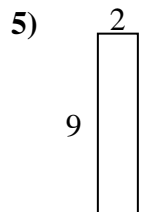
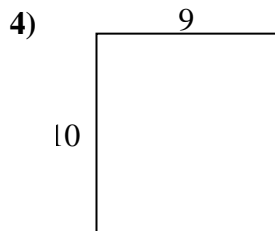
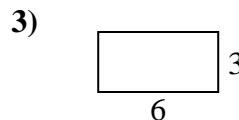
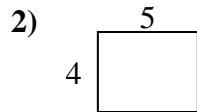
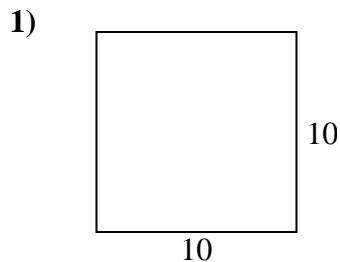
Risposte

1. _____
2. _____
3. _____
4. _____
5. _____
6. _____
7. _____
8. _____
9. _____
10. _____
11. _____
12. _____
13. _____
14. _____
15. _____



Calcola il perimetro e l'area di ogni figura, Ogni misura è in pollici (in).

Non vanno fatte le equivalenze.



Risposte

1. 40 in 100 in²
2. 18 in 20 in²
3. 18 in 18 in²
4. 38 in 90 in²
5. 22 in 18 in²
6. 36 in 80 in²
7. 24 in 20 in²
8. 22 in 24 in²
9. 12 in 8 in²
10. 32 in 63 in²
11. 16 in 15 in²
12. 8 in 4 in²
13. 24 in 35 in²
14. 14 in 10 in²
15. 30 in 56 in²