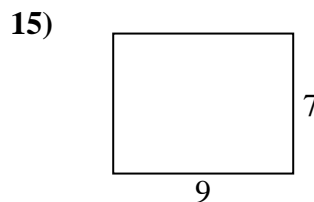
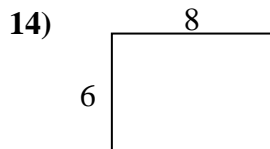
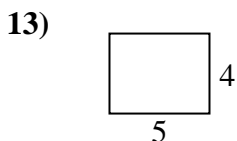
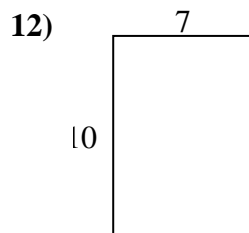
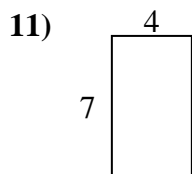
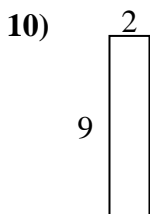
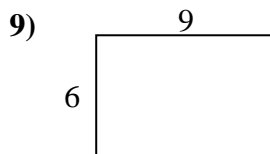
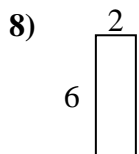
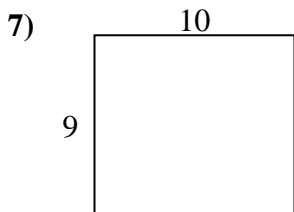
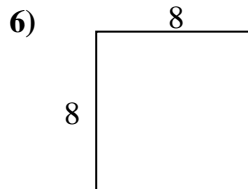
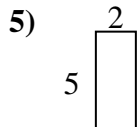
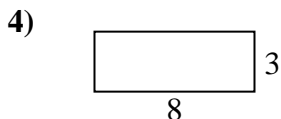
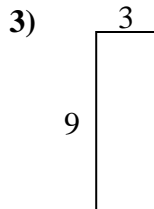
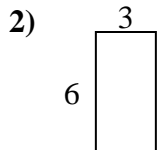
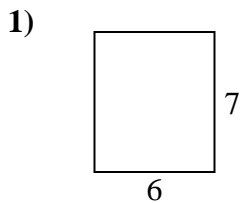




Calcola il perimetro e l'area di ogni figura, Ogni misura è in pollici (in).

Non vanno fatte le equivalenze.



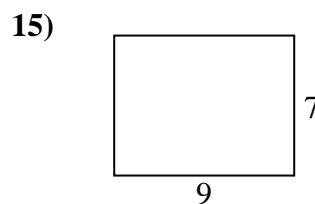
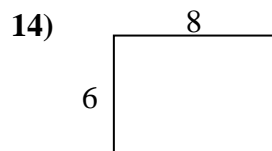
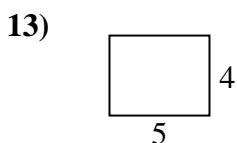
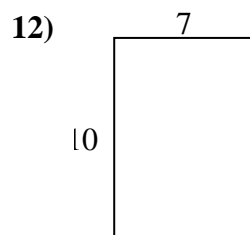
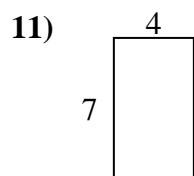
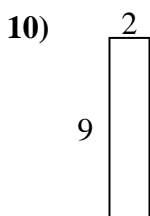
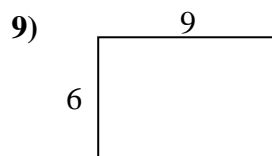
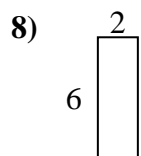
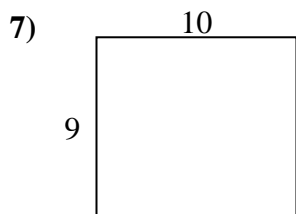
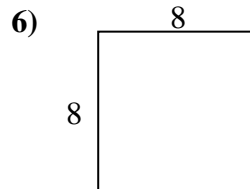
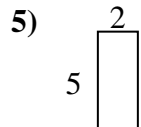
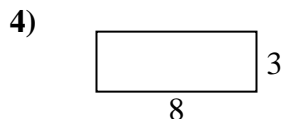
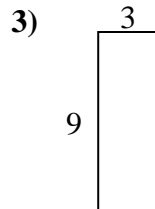
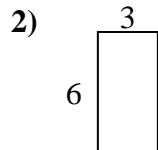
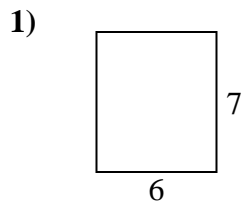
**Risposte**

1. \_\_\_\_\_
2. \_\_\_\_\_
3. \_\_\_\_\_
4. \_\_\_\_\_
5. \_\_\_\_\_
6. \_\_\_\_\_
7. \_\_\_\_\_
8. \_\_\_\_\_
9. \_\_\_\_\_
10. \_\_\_\_\_
11. \_\_\_\_\_
12. \_\_\_\_\_
13. \_\_\_\_\_
14. \_\_\_\_\_
15. \_\_\_\_\_



Calcola il perimetro e l'area di ogni figura, Ogni misura è in pollici (in).

Non vanno fatte le equivalenze.



**Risposte**

1. 26 in    42 in<sup>2</sup>
2. 18 in    18 in<sup>2</sup>
3. 24 in    27 in<sup>2</sup>
4. 22 in    24 in<sup>2</sup>
5. 14 in    10 in<sup>2</sup>
6. 32 in    64 in<sup>2</sup>
7. 38 in    90 in<sup>2</sup>
8. 16 in    12 in<sup>2</sup>
9. 30 in    54 in<sup>2</sup>
10. 22 in    18 in<sup>2</sup>
11. 22 in    28 in<sup>2</sup>
12. 34 in    70 in<sup>2</sup>
13. 18 in    20 in<sup>2</sup>
14. 28 in    48 in<sup>2</sup>
15. 32 in    63 in<sup>2</sup>